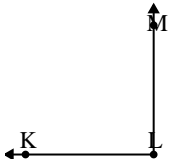




Solve each problem.

Answers

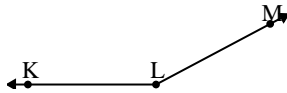
1)



Which choice best represents $\angle KLM$?

- A. 13°
- B. 147°
- C. 90°
- D. 42°

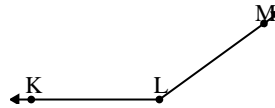
2)



Which choice best represents $\angle KLM$?

- A. 129°
- B. 11°
- C. 178°
- D. 152°

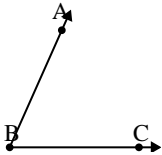
3)



Which choice best represents $\angle KLM$?

- A. 49°
- B. 91°
- C. 1°
- D. 144°

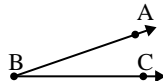
4)



Which choice best represents $\angle ABC$?

- A. 30°
- B. 66°
- C. 97°
- D. 127°

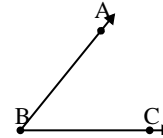
5)



Which choice best represents $\angle ABC$?

- A. 79°
- B. 117°
- C. 19°
- D. 53°

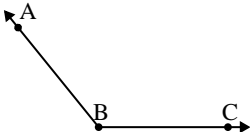
6)



Which choice best represents $\angle ABC$?

- A. 9°
- B. 160°
- C. 51°
- D. 133°

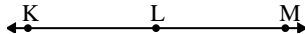
7)



Which choice best represents $\angle ABC$?

- A. 178°
- B. 154°
- C. 129°
- D. 5°

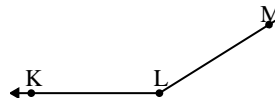
8)



Which choice best represents $\angle KLM$?

- A. 6°
- B. 180°
- C. 59°
- D. 123°

9)



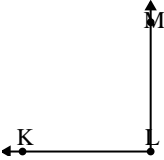
Which choice best represents $\angle KLM$?

- A. 124°
- B. 64°
- C. 148°
- D. 28°

1. _____
2. _____
3. _____
4. _____
5. _____
6. _____
7. _____
8. _____
9. _____

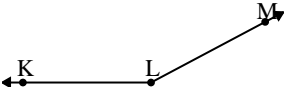


Solve each problem.

1) 

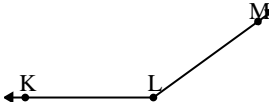
Which choice best represents $\angle KLM$?

A. 13°
 B. 147°
 C. 90°
 D. 42°

2) 

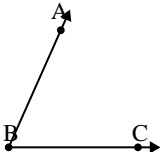
Which choice best represents $\angle KLM$?

A. 129°
 B. 11°
 C. 178°
 D. 152°

3) 

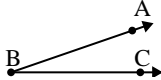
Which choice best represents $\angle KLM$?

A. 49°
 B. 91°
 C. 1°
 D. 144°

4) 

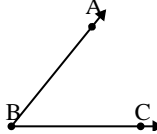
Which choice best represents $\angle ABC$?

A. 30°
 B. 66°
 C. 97°
 D. 127°

5) 

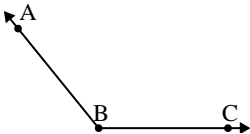
Which choice best represents $\angle ABC$?

A. 79°
 B. 117°
 C. 19°
 D. 53°

6) 

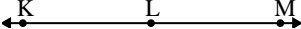
Which choice best represents $\angle ABC$?

A. 9°
 B. 160°
 C. 51°
 D. 133°

7) 

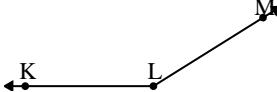
Which choice best represents $\angle ABC$?

A. 178°
 B. 154°
 C. 129°
 D. 5°

8) 

Which choice best represents $\angle KLM$?

A. 6°
 B. 180°
 C. 59°
 D. 123°

9) 

Which choice best represents $\angle KLM$?

A. 124°
 B. 64°
 C. 148°
 D. 28°

Answers

1. **C**
2. **D**
3. **D**
4. **B**
5. **C**
6. **C**
7. **C**
8. **B**
9. **C**