

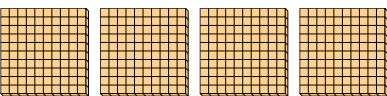


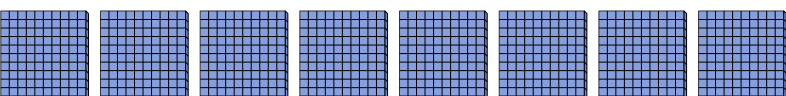


Use the blocks to determine the total quantities.

Ex) 
 _____ hundreds = _____ tens = _____ ones

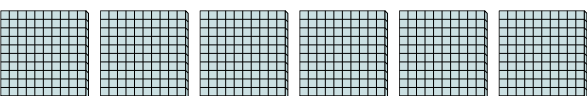
1) 
 _____ hundreds = _____ tens = _____ ones


2) 
 _____ hundreds = _____ tens = _____ ones


3) 
 _____ hundreds = _____ tens = _____ ones

4) 
 _____ hundreds = _____ tens = _____ ones

5) 
 _____ hundreds = _____ tens = _____ ones

6) 
 _____ hundreds = _____ tens = _____ ones

7) 
 _____ hundreds = _____ tens = _____ ones


8) 
 _____ hundreds = _____ tens = _____ ones


Answers

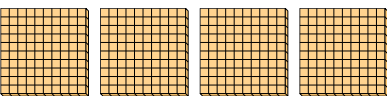
| | | | |
|-----|----------|-----------|------------|
| Ex. | <u>7</u> | <u>70</u> | <u>700</u> |
| 1. | _____ | _____ | _____ |
| 2. | _____ | _____ | _____ |
| 3. | _____ | _____ | _____ |
| 4. | _____ | _____ | _____ |
| 5. | _____ | _____ | _____ |
| 6. | _____ | _____ | _____ |
| 7. | _____ | _____ | _____ |
| 8. | _____ | _____ | _____ |

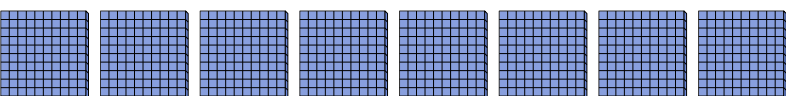


Use the blocks to determine the total quantities.

Ex) 
7 hundreds = 70 tens = 700 ones

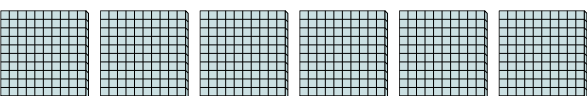
1) 
9 hundreds = 90 tens = 900 ones


2) 
4 hundreds = 40 tens = 400 ones


3) 
8 hundreds = 80 tens = 800 ones

4) 
1 hundreds = 10 tens = 100 ones

5) 
2 hundreds = 20 tens = 200 ones

6) 
6 hundreds = 60 tens = 600 ones

7) 
3 hundreds = 30 tens = 300 ones

8) 
5 hundreds = 50 tens = 500 ones

Answers

| | | | |
|-----|----------|-----------|------------|
| Ex. | <u>7</u> | <u>70</u> | <u>700</u> |
| 1. | <u>9</u> | <u>90</u> | <u>900</u> |
| 2. | <u>4</u> | <u>40</u> | <u>400</u> |
| 3. | <u>8</u> | <u>80</u> | <u>800</u> |
| 4. | <u>1</u> | <u>10</u> | <u>100</u> |
| 5. | <u>2</u> | <u>20</u> | <u>200</u> |
| 6. | <u>6</u> | <u>60</u> | <u>600</u> |
| 7. | <u>3</u> | <u>30</u> | <u>300</u> |
| 8. | <u>5</u> | <u>50</u> | <u>500</u> |