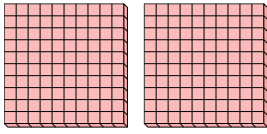




Use the groups to answer each question.

**Answers**

- 1) a. How many groups of 100 are there?
- b. How many small blocks are there total?

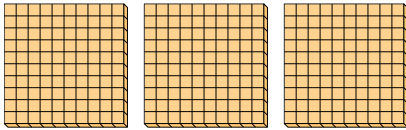


1. \_\_\_\_

2. \_\_\_\_

3. \_\_\_\_

- 2) a. How many groups of 100 are there?
- b. How many small blocks are there total?




4. \_\_\_\_

5. \_\_\_\_

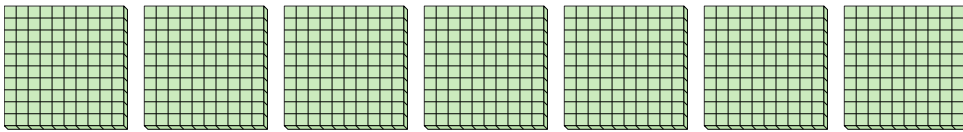
6. \_\_\_\_

- 3) a. How many groups of 100 are there?
- b. How many small blocks are there total?




7. \_\_\_\_

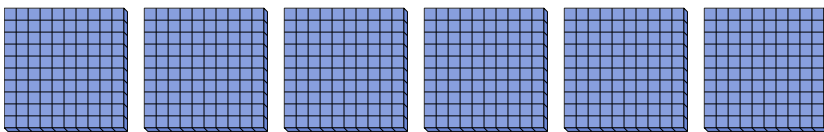
- 4) a. How many groups of 100 are there?
- b. How many small blocks are there total?



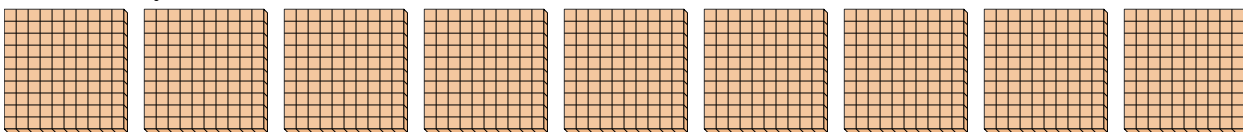
- 5) a. How many groups of 100 are there?
- b. How many small blocks are there total?



- 6) a. How many groups of 100 are there?
- b. How many small blocks are there total?



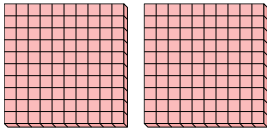
- 7) a. How many groups of 100 are there?
- b. How many small blocks are there total?



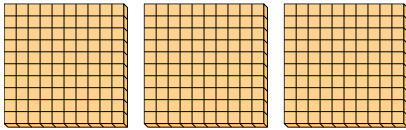


Use the groups to answer each question.


- 1) a. How many groups of 100 are there?
- b. How many small blocks are there total?



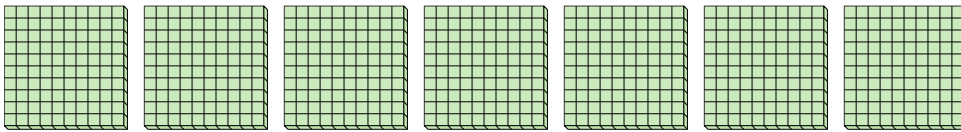
- 2) a. How many groups of 100 are there?
- b. How many small blocks are there total?




- 3) a. How many groups of 100 are there?
- b. How many small blocks are there total?



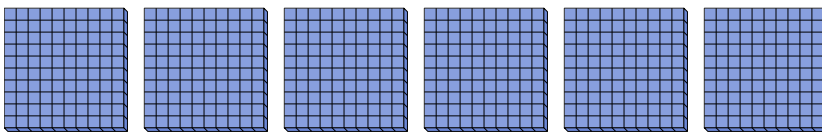
- 4) a. How many groups of 100 are there?
- b. How many small blocks are there total?



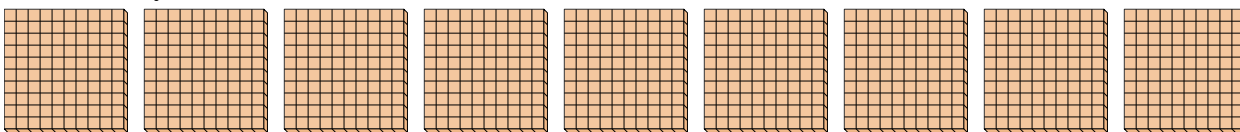
- 5) a. How many groups of 100 are there?
- b. How many small blocks are there total?



- 6) a. How many groups of 100 are there?
- b. How many small blocks are there total?



- 7) a. How many groups of 100 are there?
- b. How many small blocks are there total?



**Answers**

- 1. 2 200
- 2. 3 300
- 3. 5 500
- 4. 7 700
- 5. 8 800
- 6. 6 600
- 7. 9 900