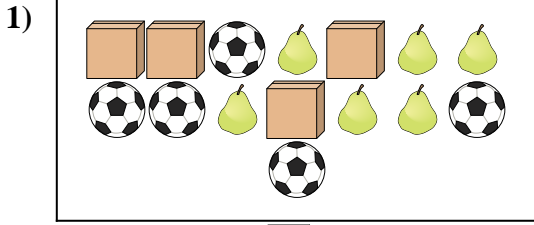
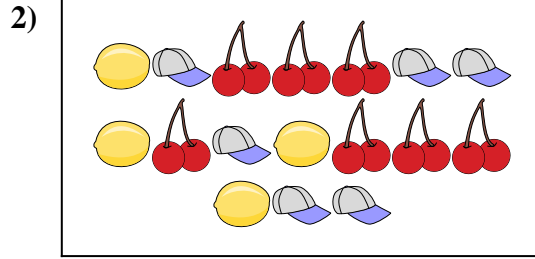




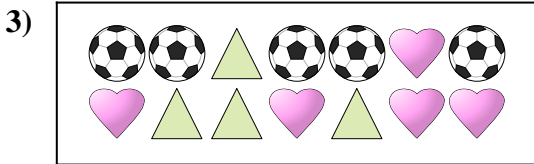
Compare the number of shapes.




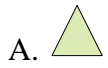
Are there more or more ?




Are there less or less ?




Are there less or less ?



Are there less or less ?



Are there more or more ?



Are there more or more ?



**Answers**

1. \_\_\_\_\_

2. \_\_\_\_\_

3. \_\_\_\_\_

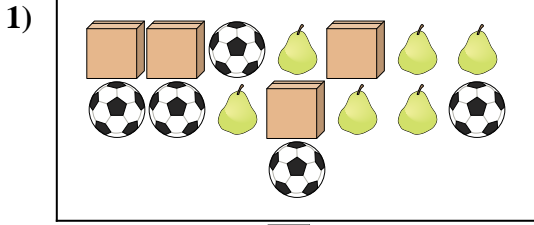
4. \_\_\_\_\_

5. \_\_\_\_\_

6. \_\_\_\_\_

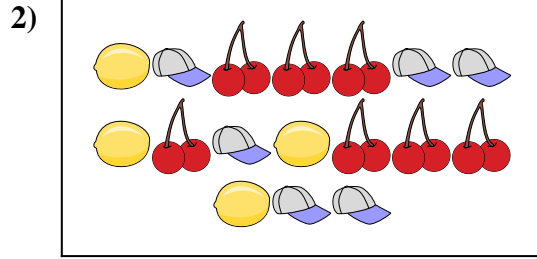


Compare the number of shapes.



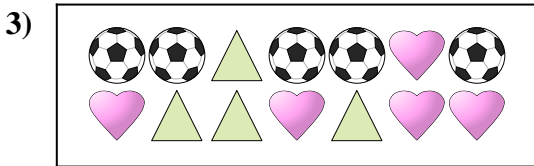
Are there more or more ?

- A.
- B.




Are there less or less ?

- A.
- B.




Are there less or less ?

- A.
- B.



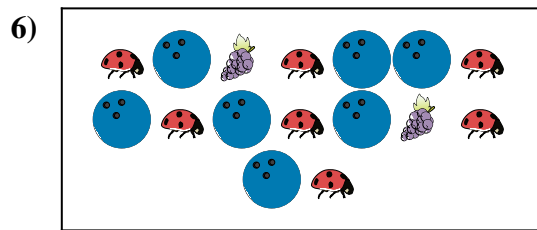
Are there less or less ?

- A.
- B.



Are there more or more ?

- A.
- B.



Are there more or more ?

- A.
- B.

**Answers**

- 1. **B**
- 2. **A**
- 3. **A**
- 4. **A**
- 5. **B**
- 6. **B**