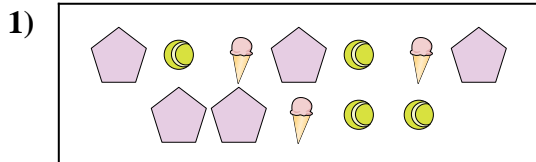





Compare the number of shapes.



Are there less or less ?

A.

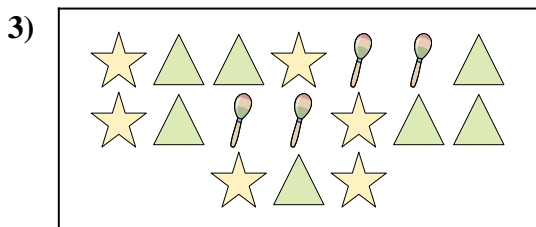
B.



Are there more or more ?

A.


B.



Are there less or less ?

A.


B.



Are there less or less ?

A.

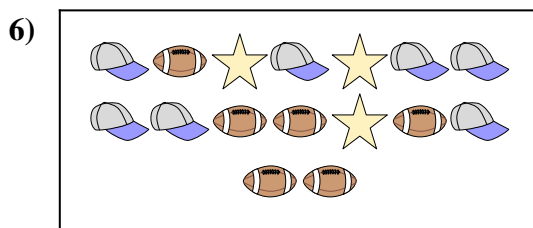
B.



Are there less or less ?

A.

B.



Are there less or less ?

A.

B.

Answers

1. _____

2. _____

3. _____

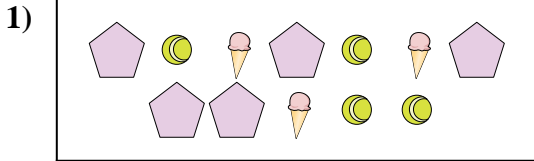
4. _____

5. _____

6. _____



Compare the number of shapes.



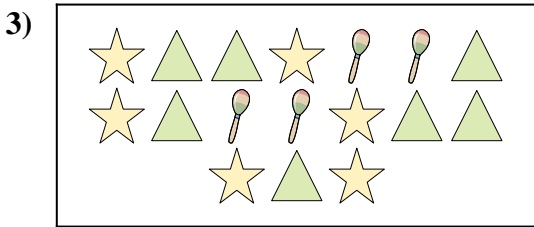
Are there less or less ?

- A.
- B.




Are there more or more ?

- A.
- B.




Are there less or less ?

- A.
- B.



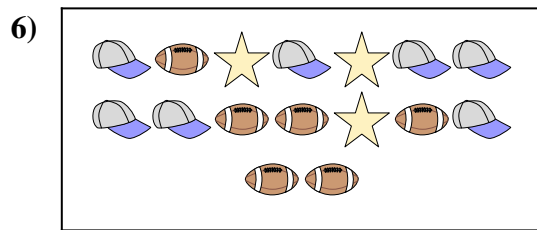
Are there less or less ?

- A.
- B.



Are there less or less ?

- A.
- B.



Are there less or less ?

- A.
- B.

Answers

- 1. **A**
- 2. **A**
- 3. **B**
- 4. **B**
- 5. **A**
- 6. **B**