
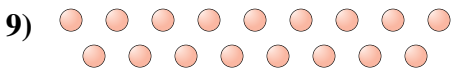
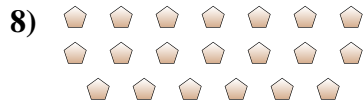
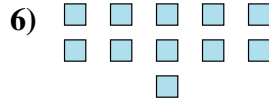
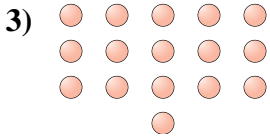
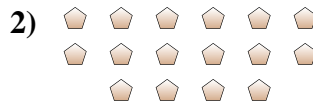




Determine if the number of shapes is even or odd.



Answers

- 1. _____
- 2. _____
- 3. _____
- 4. _____
- 5. _____
- 6. _____
- 7. _____
- 8. _____
- 9. _____
- 10. _____



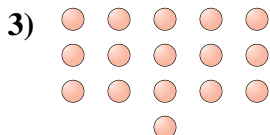
Determine if the number of shapes is even or odd.



11



16



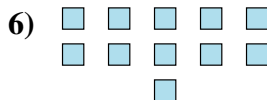
16



7



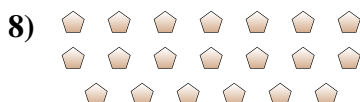
6



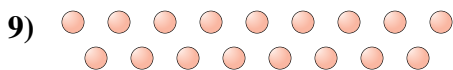
11




8



20



17



14

Answers

1. odd

2. even

3. even

4. odd

5. even

6. odd

7. even

8. even

9. odd

10. even