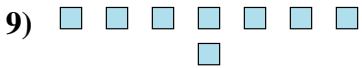
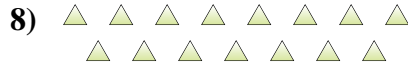
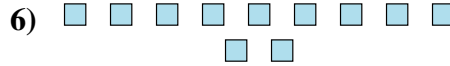
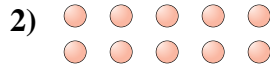





Determine if the number of shapes is even or odd.


Answers

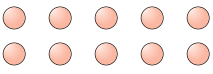



- 1. _____
- 2. _____
- 3. _____
- 4. _____
- 5. _____
- 6. _____
- 7. _____
- 8. _____
- 9. _____
- 10. _____



Determine if the number of shapes is even or odd.

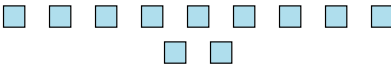
1) 
18

2) 
10

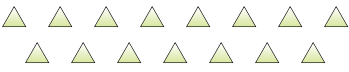
3) 
6

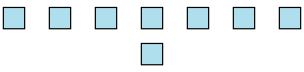
4) 
13


5) 
6

6) 
11

7) 
12

8) 
15

9) 
8

10) 
16

Answers

1. even

2. even

3. even

4. odd

5. even

6. odd

7. even

8. odd

9. even

10. even