



Determine how many groups of 100 can be created from the blocks shown.

Answers

Ex)

Ex. 2

1)

1. _____

2)

2. _____

3)

3. _____

4)

4. _____

5)

5. _____

6)

6. _____

7)

7. _____

8)

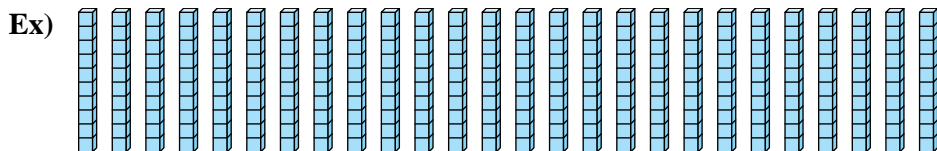
8. _____

9)

9. _____

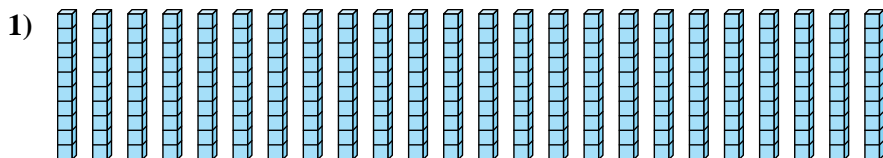


Determine how many groups of 100 can be created from the blocks shown.

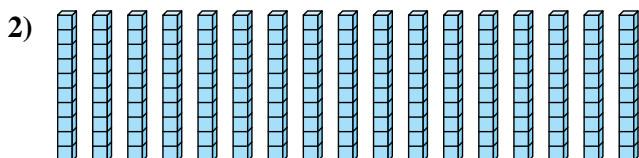


Answers


Ex. 2



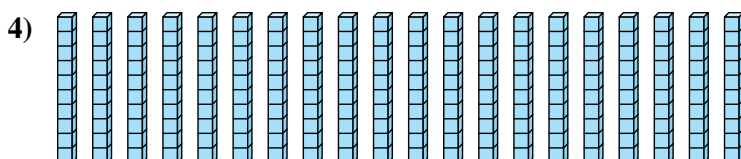
1. 2



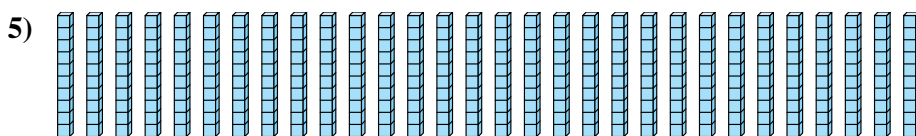
2. 1



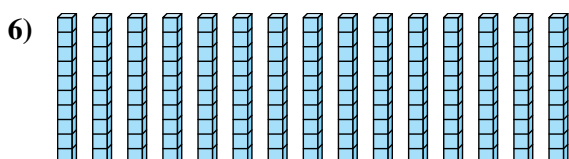
3. 1



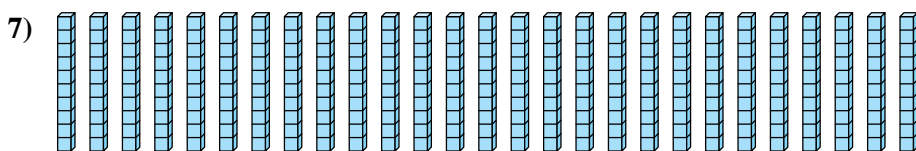
4. 2



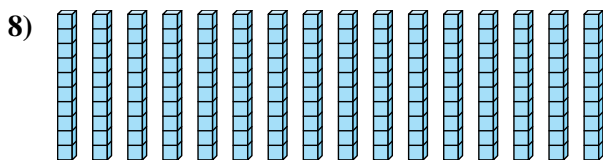
5. 3



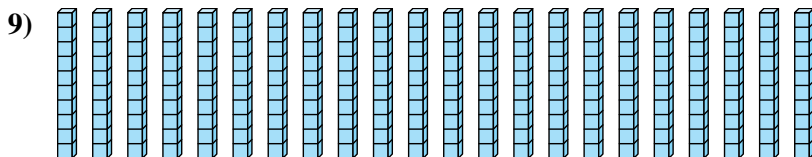
6. 1



7. 2



8. 1



9. 2