



Determine how many groups of 100 can be created from the blocks shown.

Answers

Ex)

Ex. 3

1)

1. _____

2)

2. _____

3)

3. _____

4)

4. _____

5)

5. _____

6)

6. _____

7)

7. _____

8)

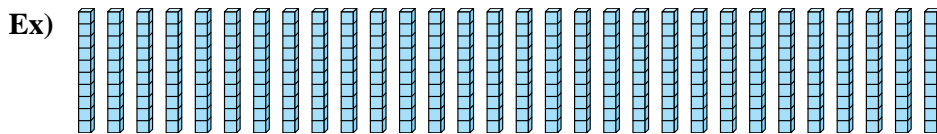
8. _____

9)

9. _____

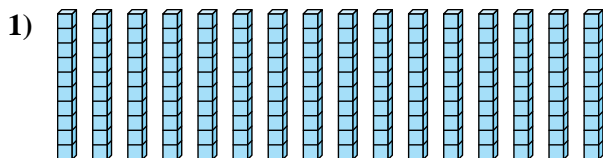


Determine how many groups of 100 can be created from the blocks shown.

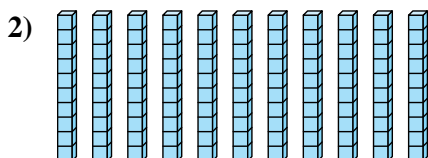


Answers

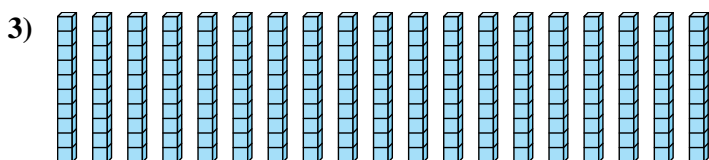
Ex. 3



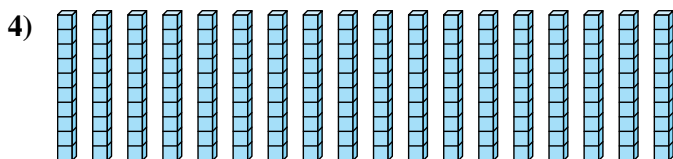
1. 1



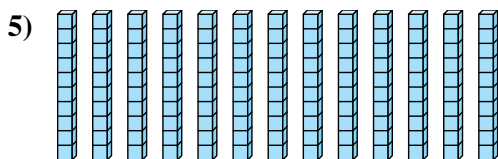
2. 1



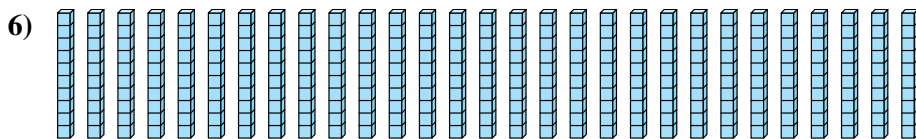
3. 1



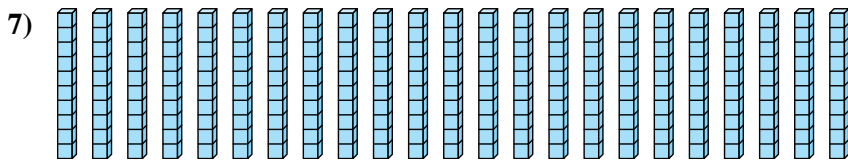
4. 1



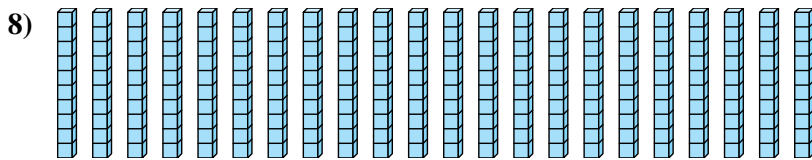
5. 1



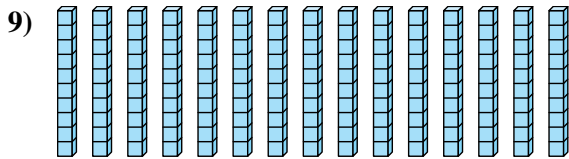
6. 2



7. 2



8. 2



9. 1