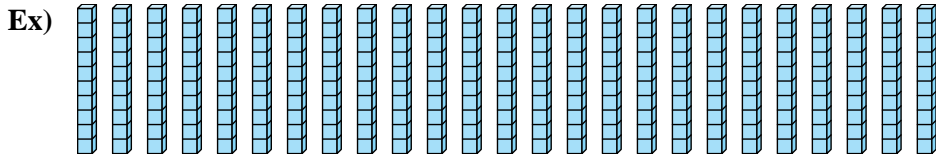


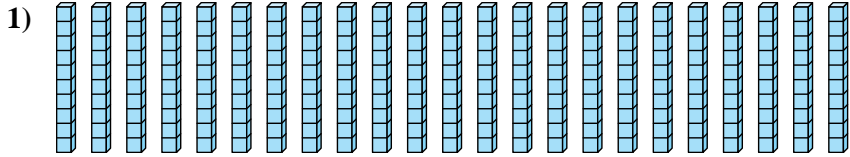


Determine how many groups of 100 can be created from the blocks shown.

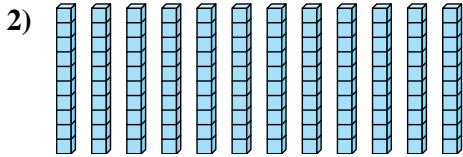
Answers



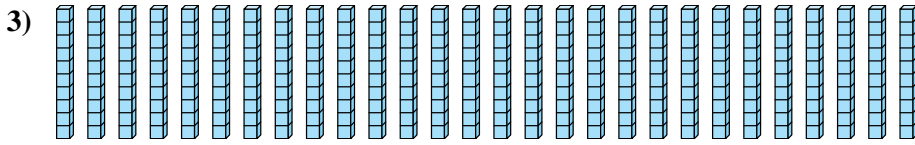
Ex. 2



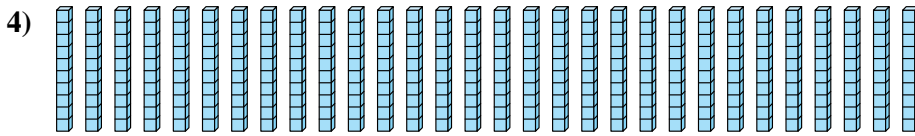
1. _____



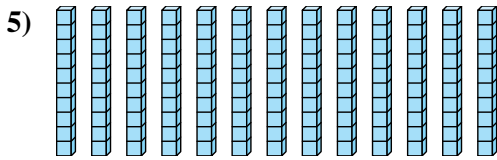
2. _____



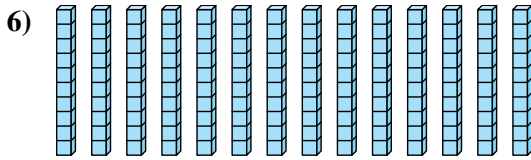
3. _____



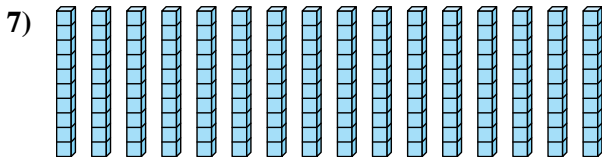
4. _____



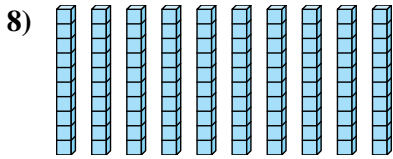
5. _____



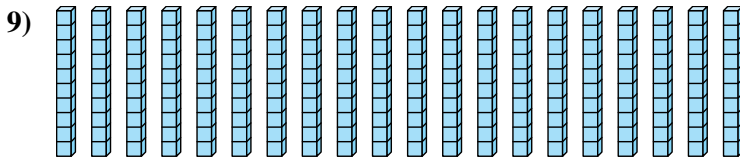
6. _____



7. _____



8. _____



9. _____



Determine how many groups of 100 can be created from the blocks shown.

Ex)

1)

2)

3)

4)

5)

6)

7)

8)

9)

Answers

Ex. 2

1. 2

2. 1

3. 2

4. 3

5. 1

6. 1

7. 1

8. 1

9. 2