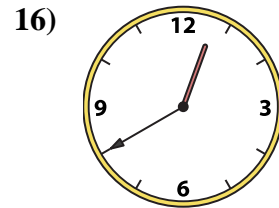
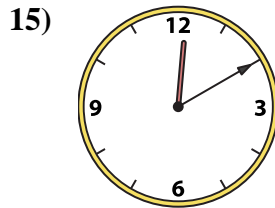
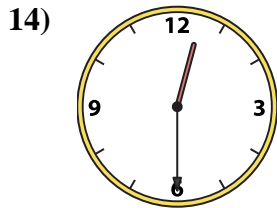
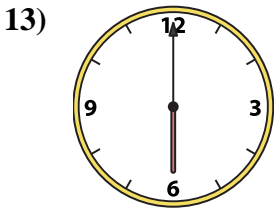
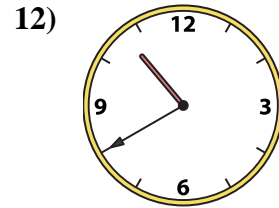
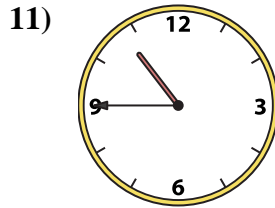
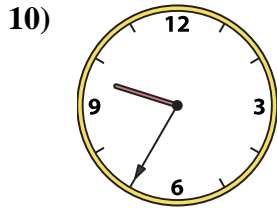
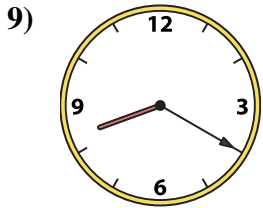
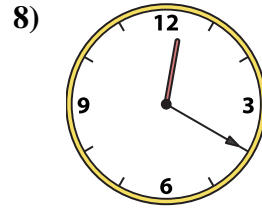
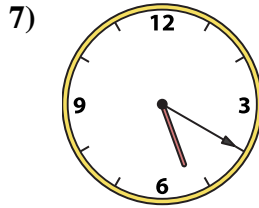
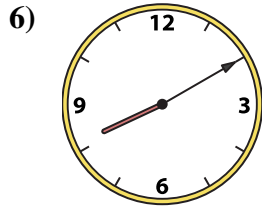
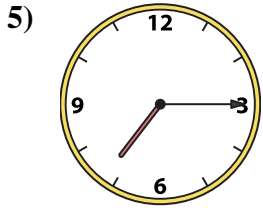
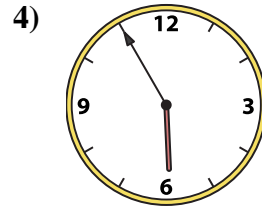
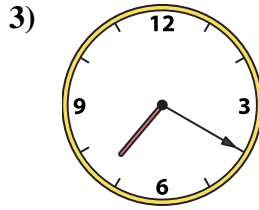
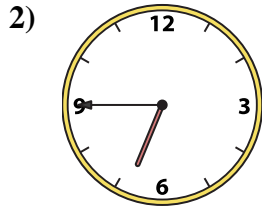
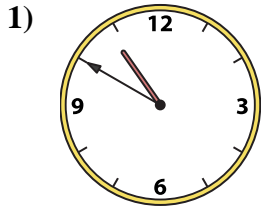




Match the analog clock to the digital clock.



A. 9:35

B. 8:20

C. 7:20

D. 6:45

E. 5:55

F. 7:15

G. 10:50

H. 12:10

I. 10:45

J. 5:20

K. 10:40

L. 12:20

M. 6:00

N. 12:40

O. 8:10

P. 12:30

Answers

1. _____

2. _____

3. _____

4. _____

5. _____

6. _____

7. _____

8. _____

9. _____

10. _____

11. _____

12. _____

13. _____


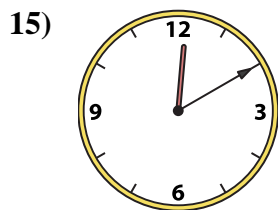
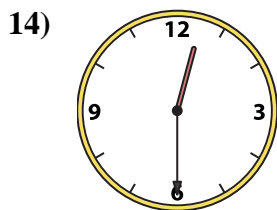
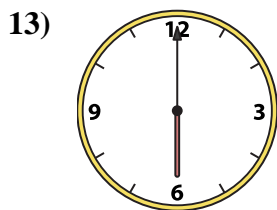
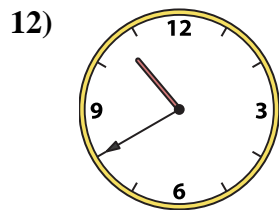
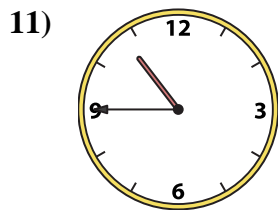
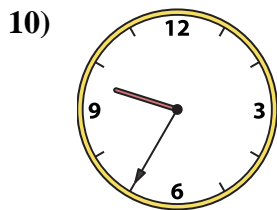
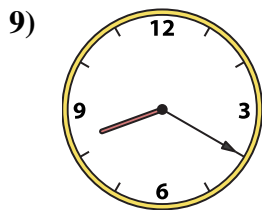

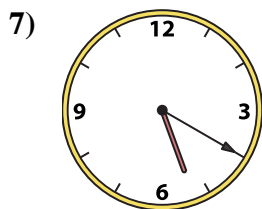
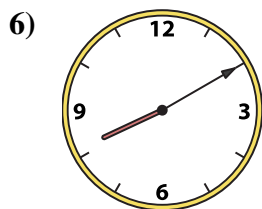
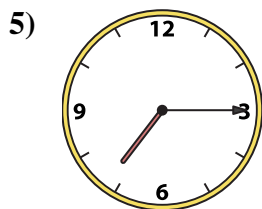
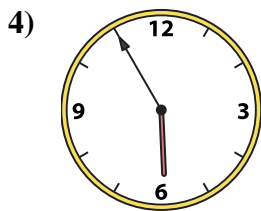
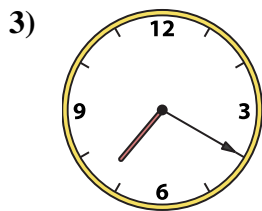
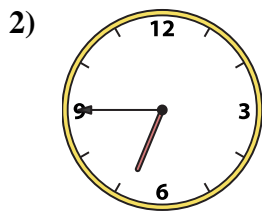
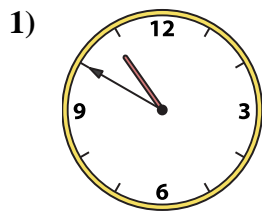
14. _____

15. _____

16. _____



Match the analog clock to the digital clock.



A. **9:35**

B. **8:20**

C. **7:20**

D. **6:45**

E. **5:55**

F. **7:15**

G. **10:50**

H. **12:10**

I. **10:45**

J. **5:20**

K. **10:40**

L. **12:20**

M. **6:00**

N. **12:40**

O. **8:10**

P. **12:30**

Answers

1. **G**

2. **D**

3. **C**

4. **E**

5. **F**

6. **O**

7. **J**

8. **L**

9. **B**

10. **A**

11. **I**

12. **K**

13. **M**

14. **P**

15. **H**

16. **N**