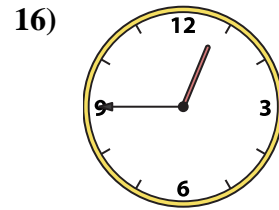
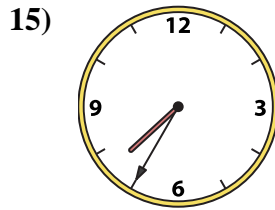
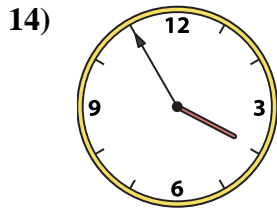
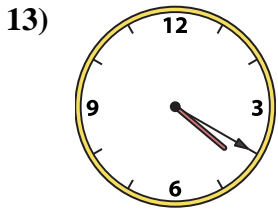
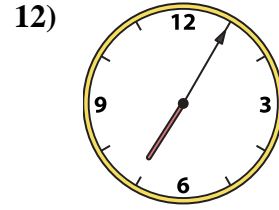
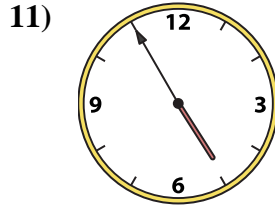
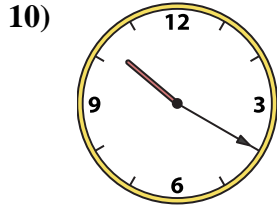
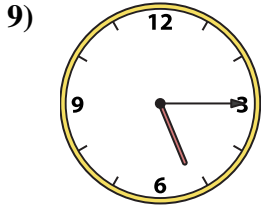
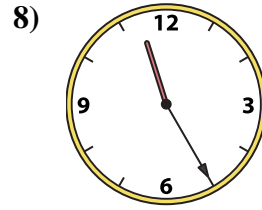
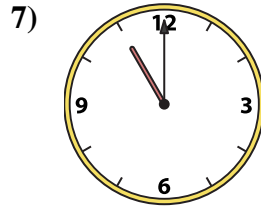
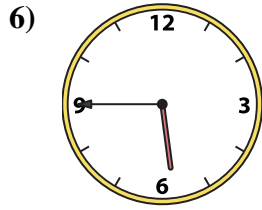
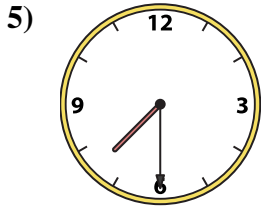
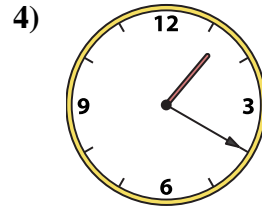
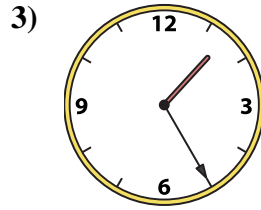
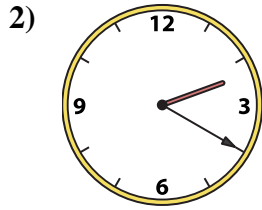





Match the analog clock to the digital clock.



A. 11:00

B. 1:20

C. 11:25

D. 5:15

E. 4:55

F. 4:20

G. 3:55

H. 5:45

I. 7:30

J. 1:00

K. 1:25

L. 12:45

M. 7:35

N. 2:20

O. 10:20

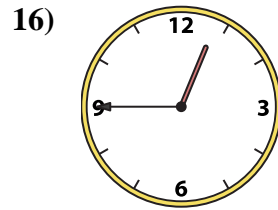
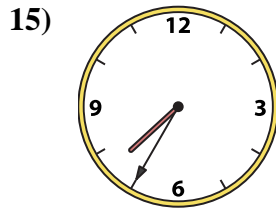
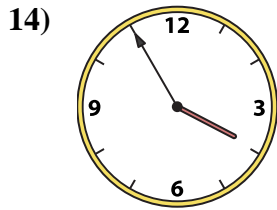
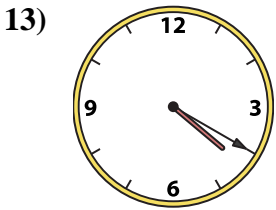
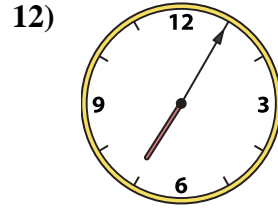
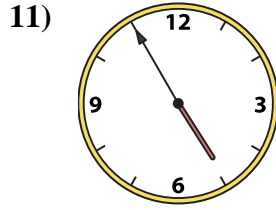
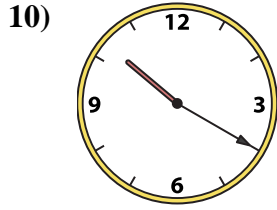
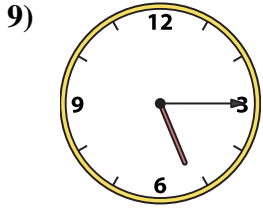
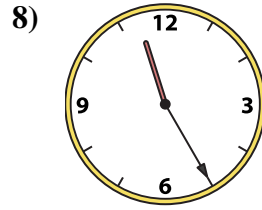
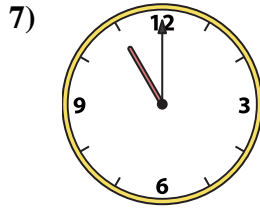
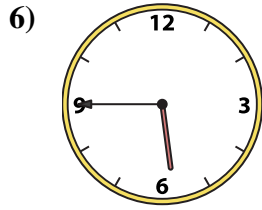
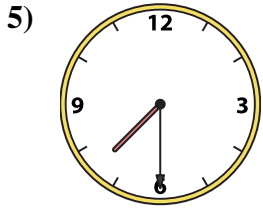
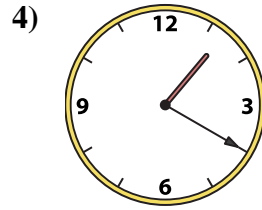
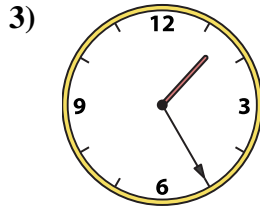
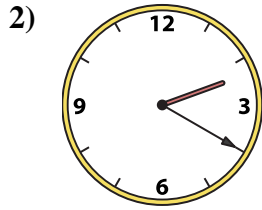

P. 7:05

Answers

1. _____
2. _____
3. _____
4. _____
5. _____
6. _____
7. _____
8. _____
9. _____
10. _____
11. _____
12. _____
13. _____
14. _____
15. _____
16. _____



Match the analog clock to the digital clock.



A. **11:00**

B. **1:20**

C. **11:25**

D. **5:15**

E. **4:55**

F. **4:20**

G. **3:55**

H. **5:45**

I. **7:30**

J. **1:00**

K. **1:25**

L. **12:45**

M. **7:35**

N. **2:20**

O. **10:20**

P. **7:05**

Answers

1. **J**

2. **N**

3. **K**

4. **B**

5. **I**

6. **H**

7. **A**

8. **C**

9. **D**

10. **O**

11. **E**

12. **P**

13. **F**

14. **G**

15. **M**

16. **L**