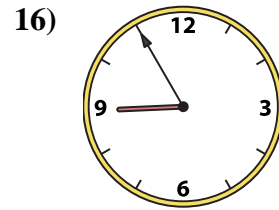
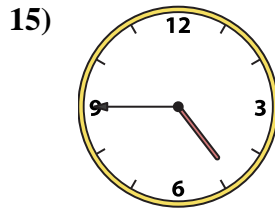
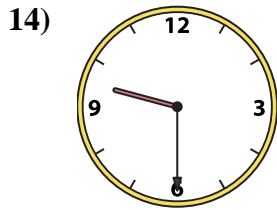
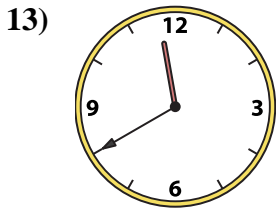
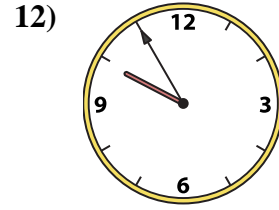
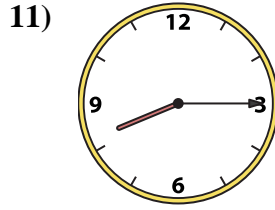
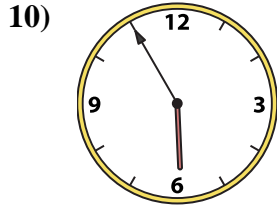
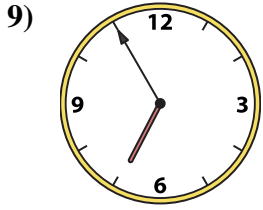
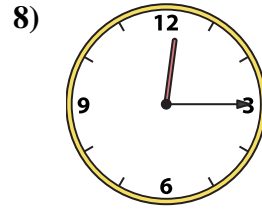
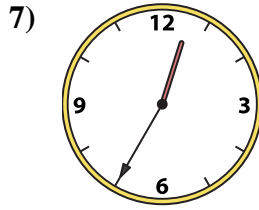
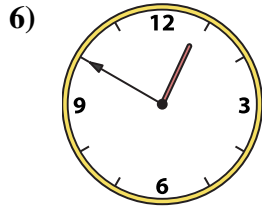
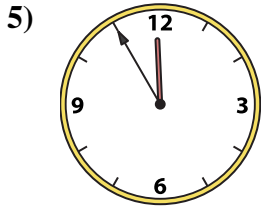
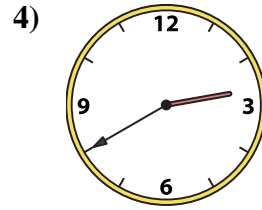
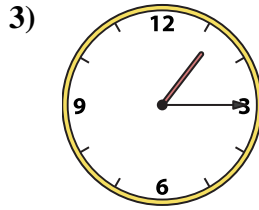

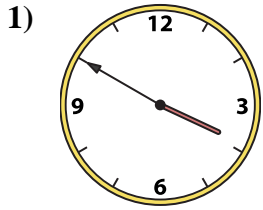




Match the analog clock to the digital clock.



A. 9:55

B. 5:55

C. 4:45

D. 11:40

E. 3:50

F. 1:55

G. 8:15

H. 1:15

I. 6:55

J. 8:55

K. 9:30

L. 12:50

M. 11:55

N. 12:15

O. 12:35

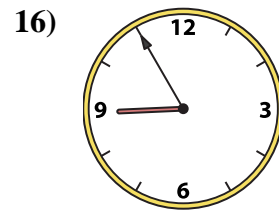
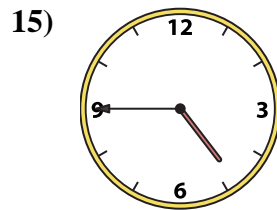
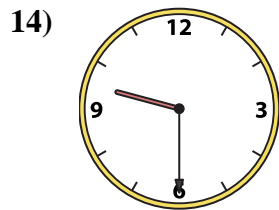
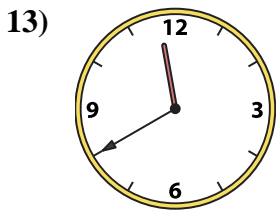

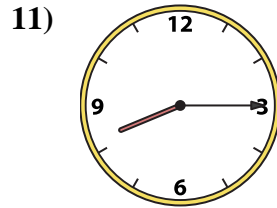
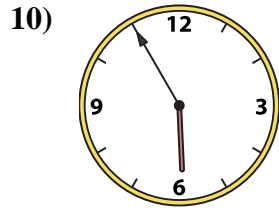

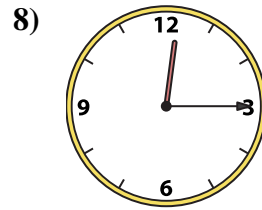
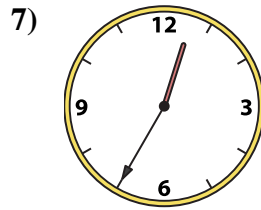
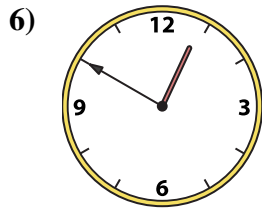
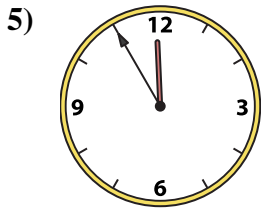
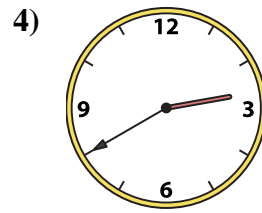
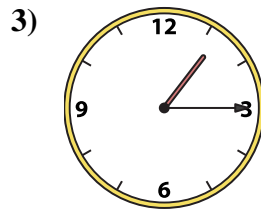
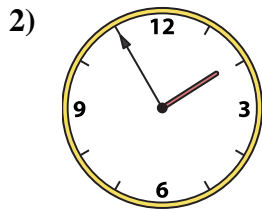
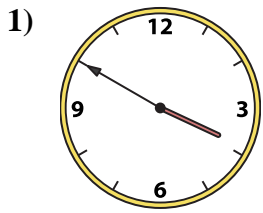
P. 2:40

Answers

1. \_\_\_\_\_
2. \_\_\_\_\_
3. \_\_\_\_\_
4. \_\_\_\_\_
5. \_\_\_\_\_
6. \_\_\_\_\_
7. \_\_\_\_\_
8. \_\_\_\_\_
9. \_\_\_\_\_
10. \_\_\_\_\_
11. \_\_\_\_\_
12. \_\_\_\_\_
13. \_\_\_\_\_
14. \_\_\_\_\_
15. \_\_\_\_\_
16. \_\_\_\_\_



Match the analog clock to the digital clock.



A. **9:55**

B. **5:55**

C. **4:45**

D. **11:40**

E. **3:50**

F. **1:55**

G. **8:15**

H. **1:15**

I. **6:55**

J. **8:55**

K. **9:30**

L. **12:50**

M. **11:55**

N. **12:15**

O. **12:35**

P. **2:40**

**Answers**

1. **E**

2. **F**

3. **H**

4. **P**

5. **M**

6. **L**

7. **O**

8. **N**

9. **I**

10. **B**

11. **G**

12. **A**

13. **D**

14. **K**

15. **C**

16. **J**