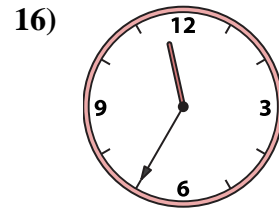
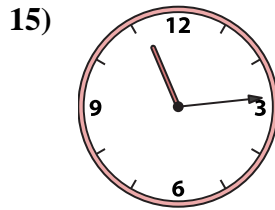
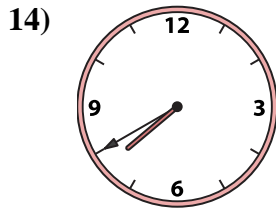
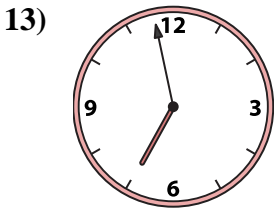
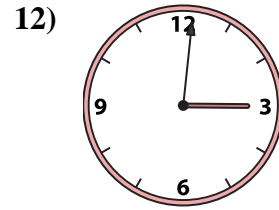
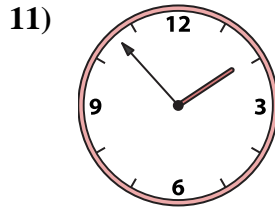
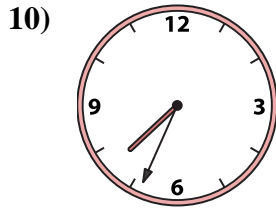
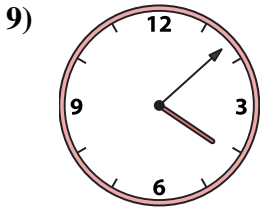
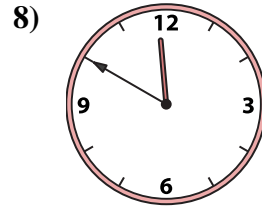
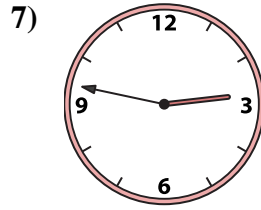
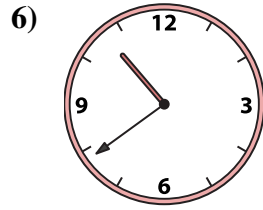

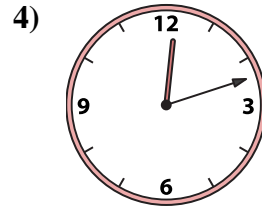
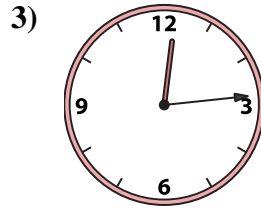
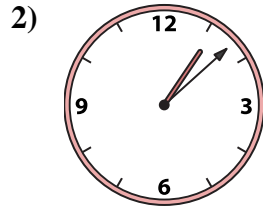





Match the analog clock to the digital clock.

Answers



A. 4:08

B. 6:58

C. 7:40

D. 1:08

E. 9:59

F. 12:14

G. 7:34

H. 2:47

I. 12:12

J. 11:50

K. 1:53

L. 11:35

M. 10:39

N. 3:01

O. 11:14

P. 12:07

1. _____

2. _____

3. _____

4. _____

5. _____

6. _____

7. _____

8. _____

9. _____

10. _____

11. _____

12. _____

13. _____

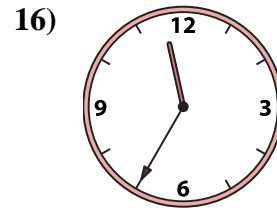
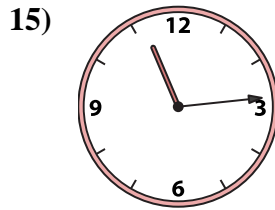
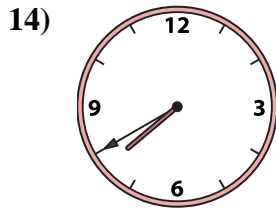
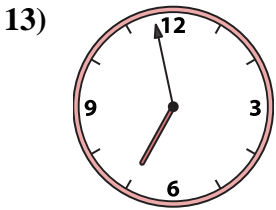
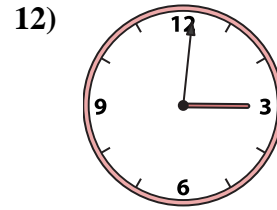
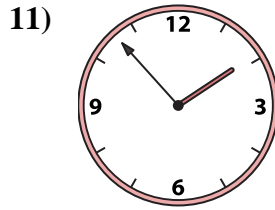
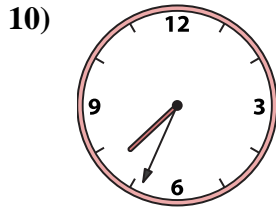
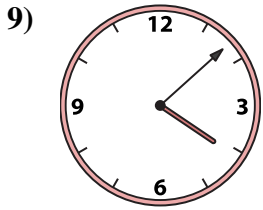
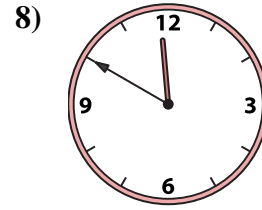
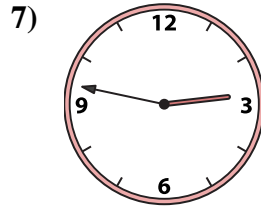
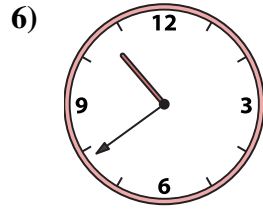

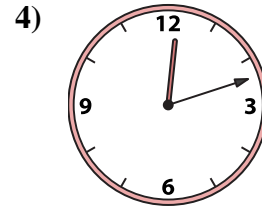
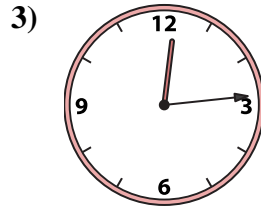
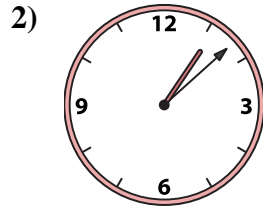

14. _____

15. _____

16. _____



Match the analog clock to the digital clock.



A. 4:08

B. 6:58

C. 7:40

D. 1:08

E. 9:59

F. 12:14

G. 7:34

H. 2:47

I. 12:12

J. 11:50

K. 1:53

L. 11:35

M. 10:39

N. 3:01

O. 11:14

P. 12:07

Answers

1. **P**

2. **D**

3. **F**

4. **I**

5. **E**

6. **M**

7. **H**

8. **J**

9. **A**

10. **G**

11. **K**

12. **N**

13. **B**

14. **C**

15. **O**

16. **L**