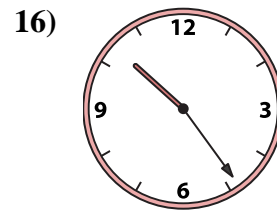
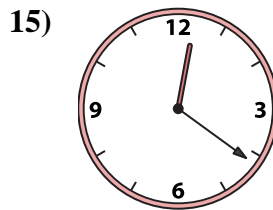
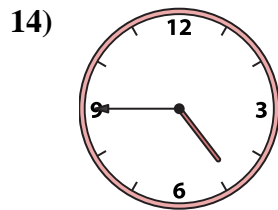
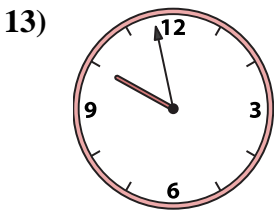
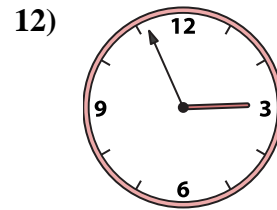
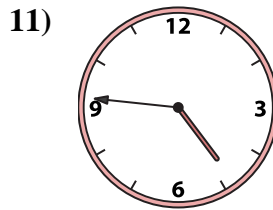
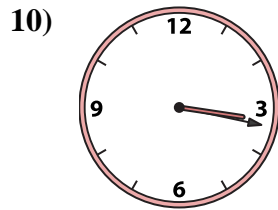
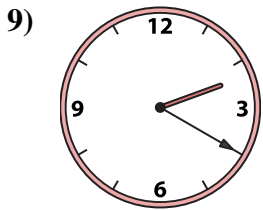
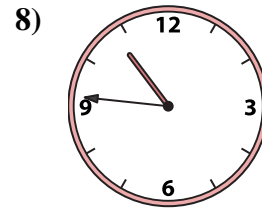
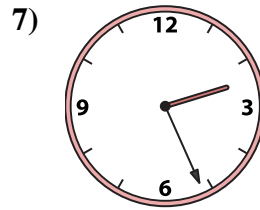
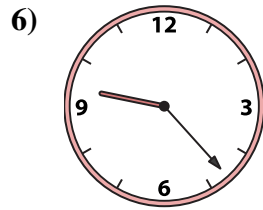

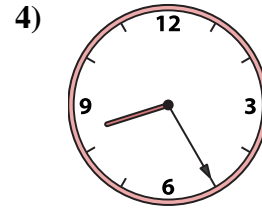
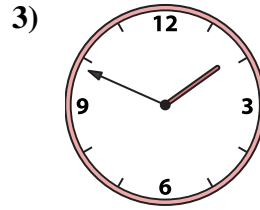
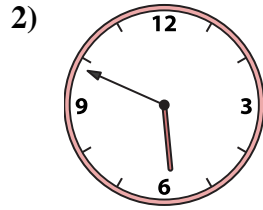
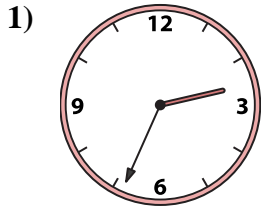




Match the analog clock to the digital clock.



A. 12:21

B. 8:25

C. 1:49

D. 3:17

E. 2:56

F. 4:45

G. 2:20

H. 2:26

I. 4:46

J. 10:46

K. 9:23

L. 10:24

M. 5:49

N. 2:34

O. 9:58

P. 8:55

Answers

1. _____

2. _____

3. _____

4. _____

5. _____

6. _____

7. _____

8. _____

9. _____

10. _____

11. _____

12. _____

13. _____

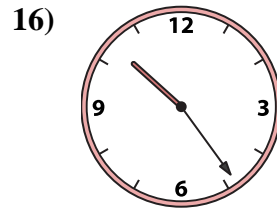
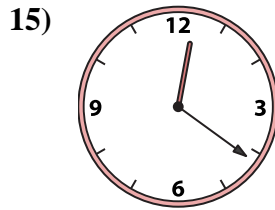
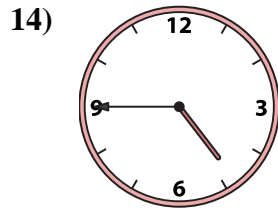
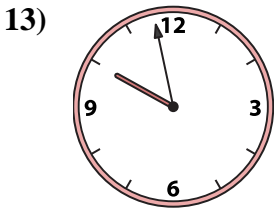
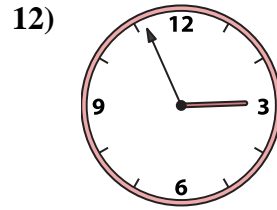
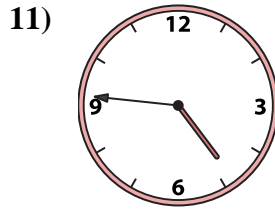
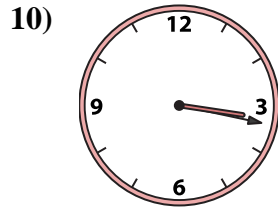
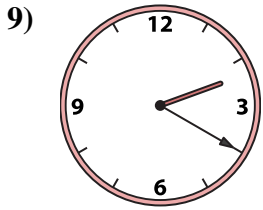
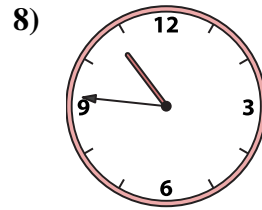
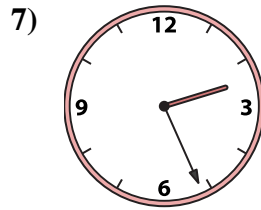
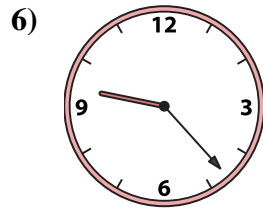

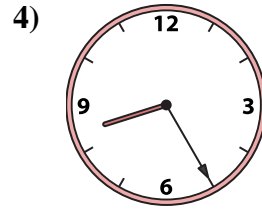
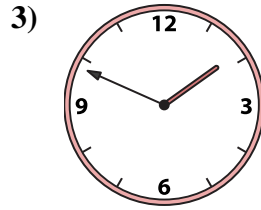
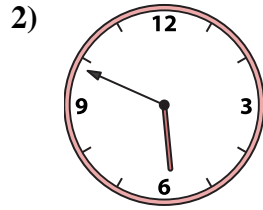
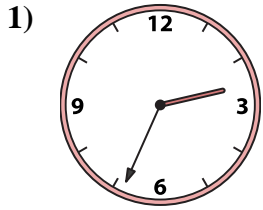
14. _____

15. _____

16. _____



Match the analog clock to the digital clock.



A. 12:21

B. 8:25

C. 1:49

D. 3:17

E. 2:56

F. 4:45

G. 2:20

H. 2:26

I. 4:46

J. 10:46

K. 9:23

L. 10:24

M. 5:49

N. 2:34

O. 9:58

P. 8:55

Answers

1. **N**

2. **M**

3. **C**

4. **B**

5. **P**

6. **K**

7. **H**

8. **J**

9. **G**

10. **D**

11. **I**

12. **E**

13. **O**

14. **F**

15. **A**

16. **L**