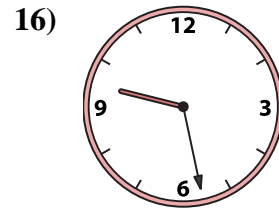
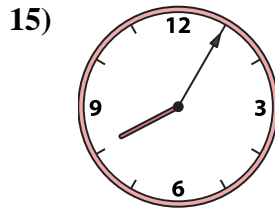
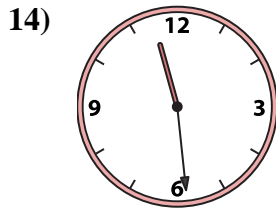
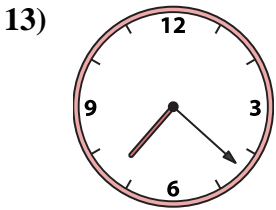
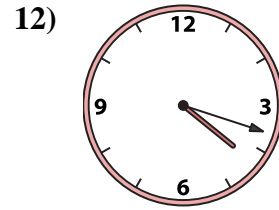
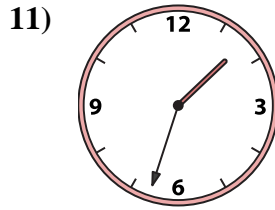
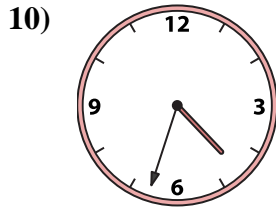
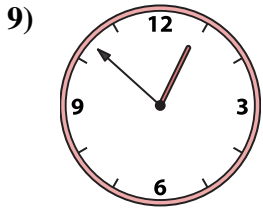
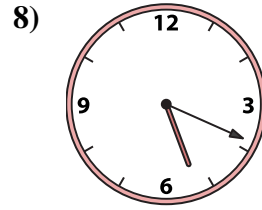
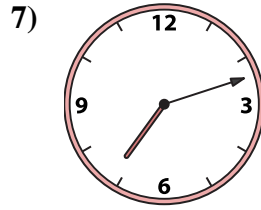
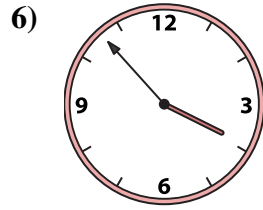

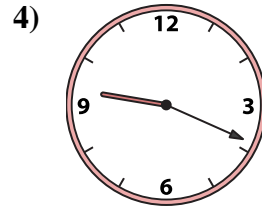
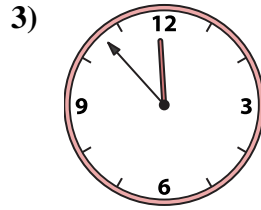
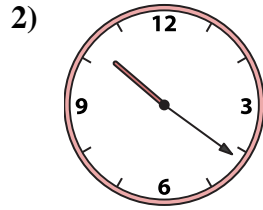
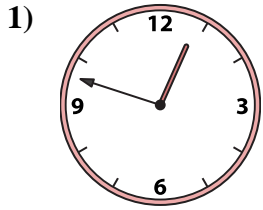




Match the analog clock to the digital clock.



**Answers**

1. \_\_\_\_\_
2. \_\_\_\_\_
3. \_\_\_\_\_
4. \_\_\_\_\_
5. \_\_\_\_\_
6. \_\_\_\_\_
7. \_\_\_\_\_
8. \_\_\_\_\_
9. \_\_\_\_\_
10. \_\_\_\_\_
11. \_\_\_\_\_
12. \_\_\_\_\_
13. \_\_\_\_\_
14. \_\_\_\_\_
15. \_\_\_\_\_
16. \_\_\_\_\_

A. **11:56**

B. **9:28**

C. **11:53**

D. **3:53**

E. **12:48**

F. **1:33**

G. **11:29**

H. **7:12**

I. **4:33**

J. **5:19**

K. **7:22**

L. **10:21**

M. **9:19**

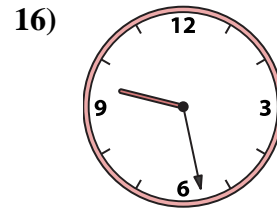
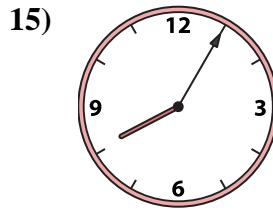
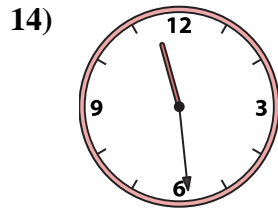
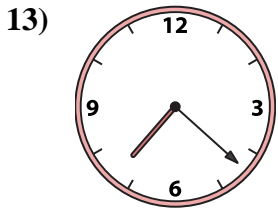
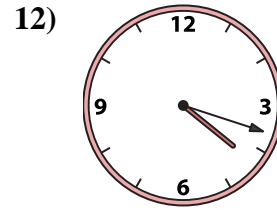
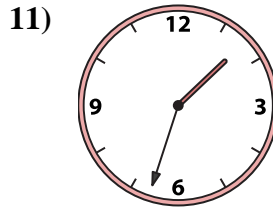
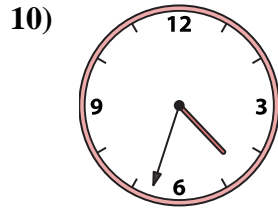
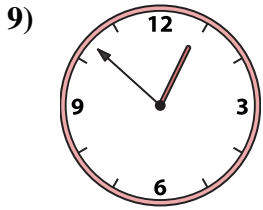
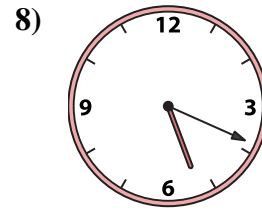
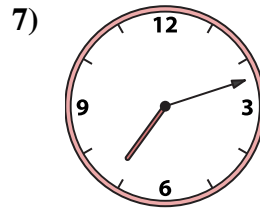
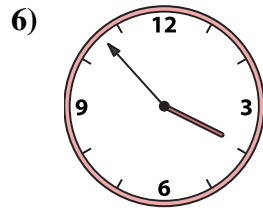
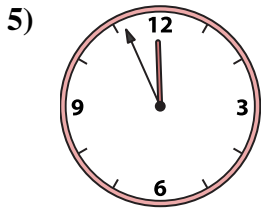
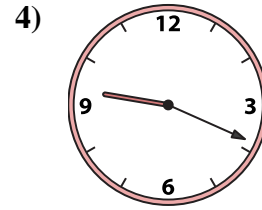

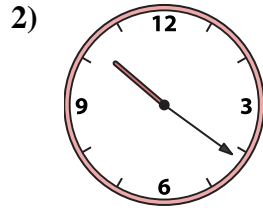
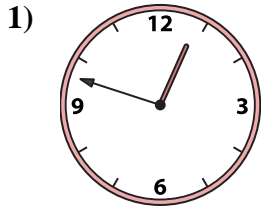
N. **12:52**

O. **4:18**

P. **8:05**



Match the analog clock to the digital clock.



A. 11:56

B. 9:28

C. 11:53

D. 3:53

E. 12:48

F. 1:33

G. 11:29

H. 7:12

I. 4:33

J. 5:19

K. 7:22

L. 10:21

M. 9:19

N. 12:52

O. 4:18

P. 8:05

**Answers**

1. **E**

2. **L**

3. **C**

4. **M**

5. **A**

6. **D**

7. **H**

8. **J**

9. **N**

10. **I**

11. **F**

12. **O**

13. **K**

14. **G**

15. **P**

16. **B**