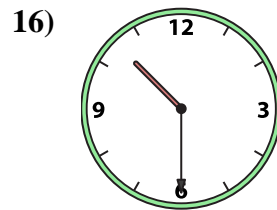
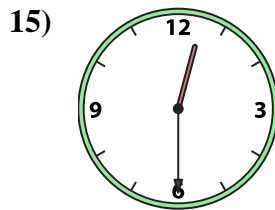
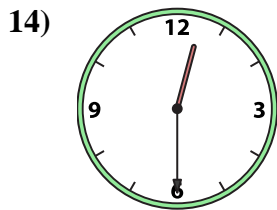
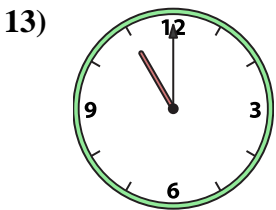
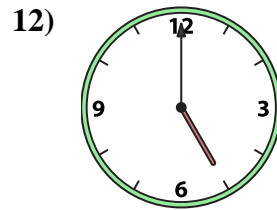
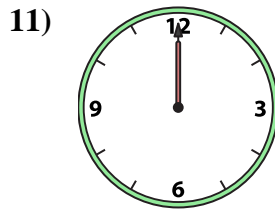
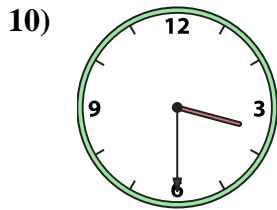
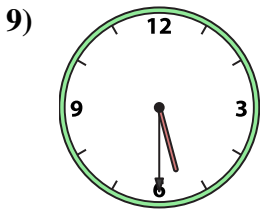
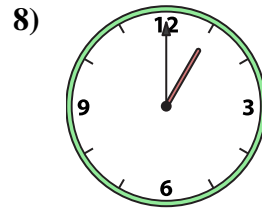
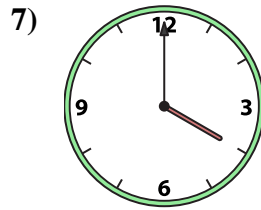
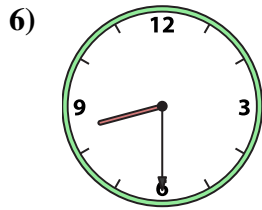
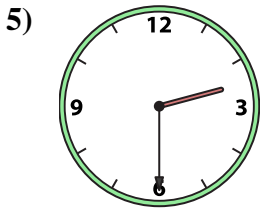
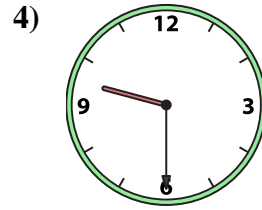
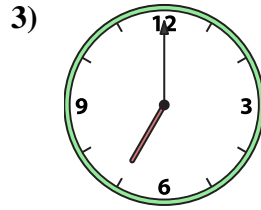
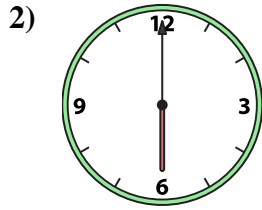
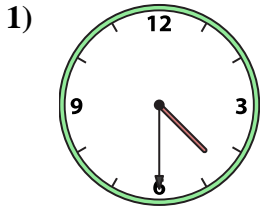




Match the analog clock to the digital clock.

Answers



A. 12:30

B. 9:30

C. 12:30

D. 5:30

E. 10:30

F. 12:00

G. 2:30

H. 7:00

I. 3:30

J. 11:00

K. 1:00

L. 6:00

M. 4:30

N. 5:00

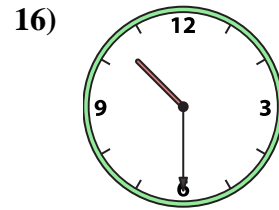
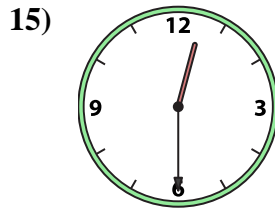
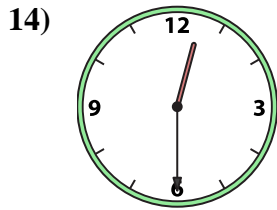
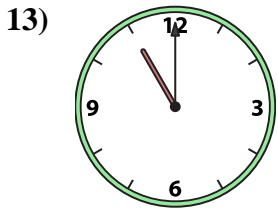
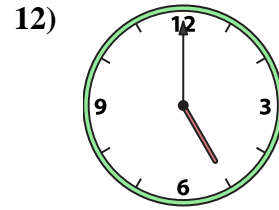
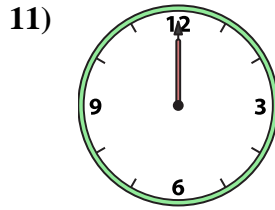
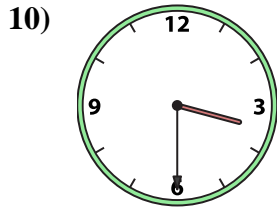
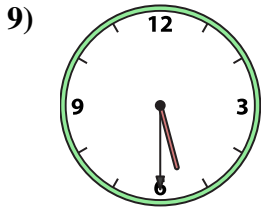
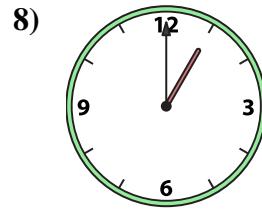
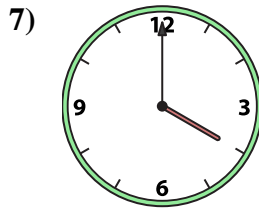
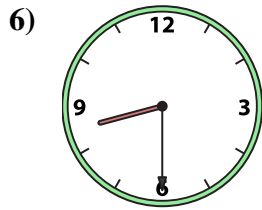
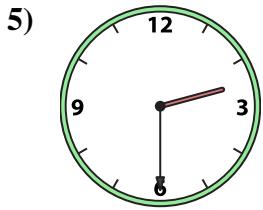
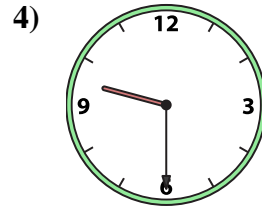
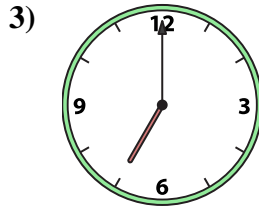
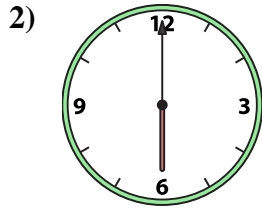
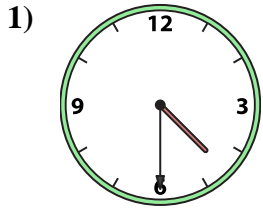
O. 4:00

P. 8:30

1. _____
2. _____
3. _____
4. _____
5. _____
6. _____
7. _____
8. _____
9. _____
10. _____
11. _____
12. _____
13. _____
14. _____
15. _____
16. _____



Match the analog clock to the digital clock.



A. 12:30

B. 9:30

C. 12:30

D. 5:30

E. 10:30

F. 12:00

G. 2:30

H. 7:00

I. 3:30

J. 11:00

K. 1:00

L. 6:00

M. 4:30

N. 5:00

O. 4:00

P. 8:30

Answers

1. **M**

2. **L**

3. **H**

4. **B**

5. **G**

6. **P**

7. **O**

8. **K**

9. **D**

10. **I**

11. **F**

12. **N**

13. **J**

14. **A**

15. **C**

16. **E**