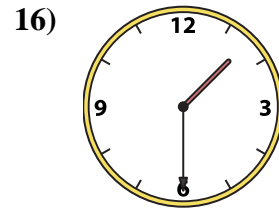
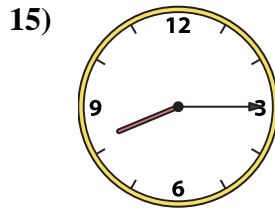
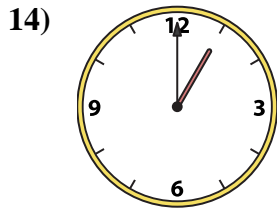
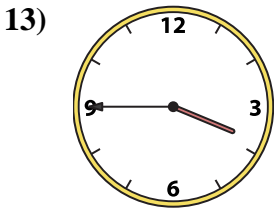

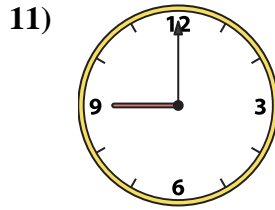
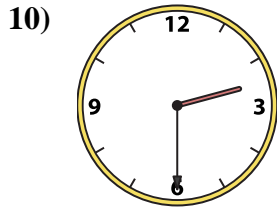
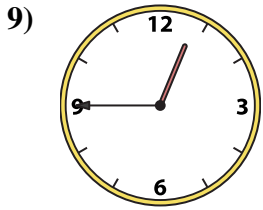
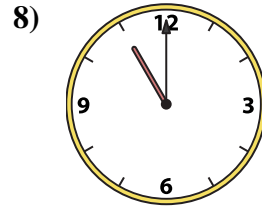
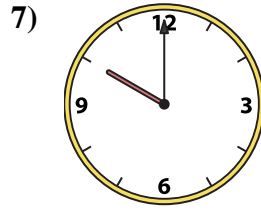
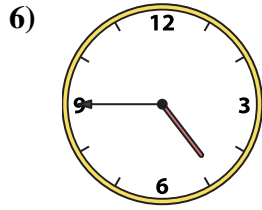
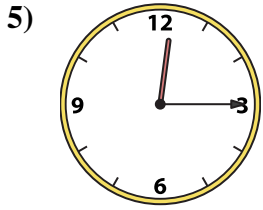
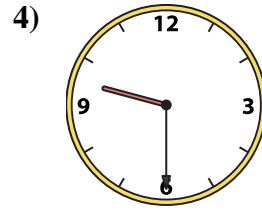
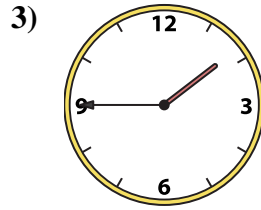
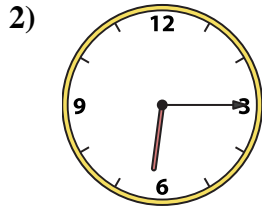
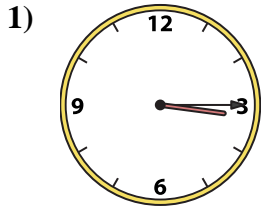




Match the analog clock to the digital clock.



A. 2:30

B. 11:00

C. 3:45

D. 9:00

E. 3:15

F. 1:45

G. 6:15

H. 1:00

I. 10:00

J. 4:45

K. 12:15

L. 12:15

M. 12:45

N. 1:30

O. 9:30

P. 8:15

Answers

1. \_\_\_\_\_

2. \_\_\_\_\_

3. \_\_\_\_\_

4. \_\_\_\_\_

5. \_\_\_\_\_

6. \_\_\_\_\_

7. \_\_\_\_\_

8. \_\_\_\_\_

9. \_\_\_\_\_

10. \_\_\_\_\_

11. \_\_\_\_\_

12. \_\_\_\_\_

13. \_\_\_\_\_

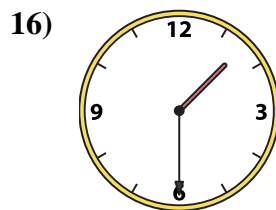
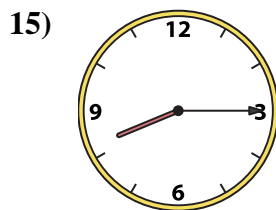
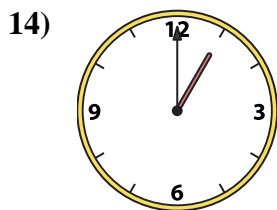
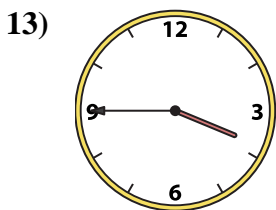
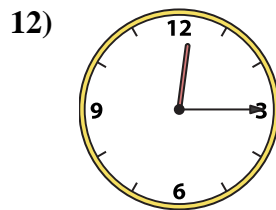
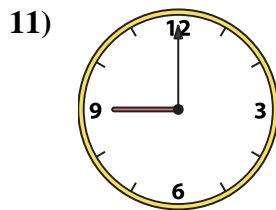
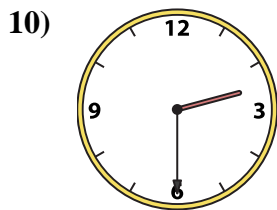
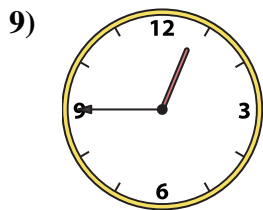
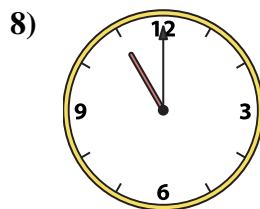
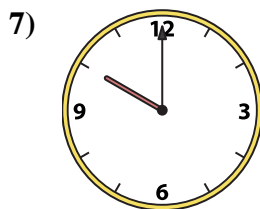
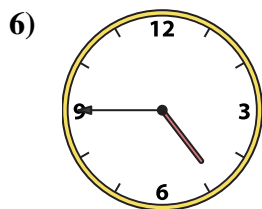
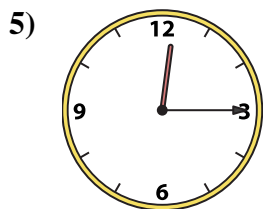
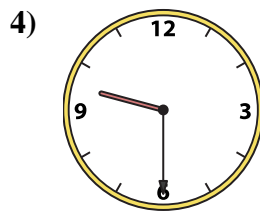
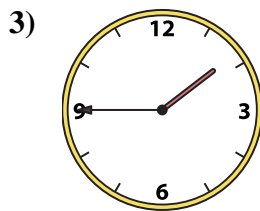
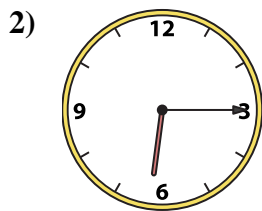
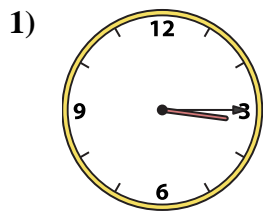
14. \_\_\_\_\_

15. \_\_\_\_\_

16. \_\_\_\_\_



Match the analog clock to the digital clock.



A. 2:30

B. 11:00

C. 3:45

D. 9:00

E. 3:15

F. 1:45

G. 6:15

H. 1:00

I. 10:00

J. 4:45

K. 12:15

L. 12:15

M. 12:45

N. 1:30

O. 9:30

P. 8:15

**Answers**

1. **E**

2. **G**

3. **F**

4. **O**

5. **K**

6. **J**

7. **I**

8. **B**

9. **M**

10. **A**

11. **D**

12. **L**

13. **C**

14. **H**

15. **P**

16. **N**