



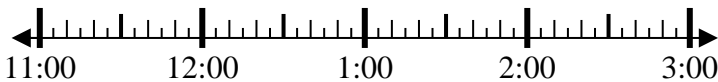
Solve each problem.

Answers

1) Start: \_\_\_\_\_

Elapsed: 1 hr & 20 mins

End: 1:00

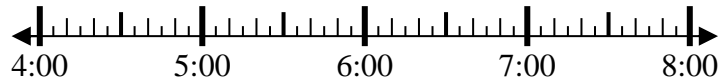


1. \_\_\_\_\_

2) Start: \_\_\_\_\_

Elapsed: 1 hr & 10 mins

End: 5:30

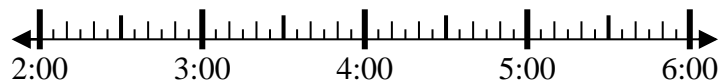


2. \_\_\_\_\_

3) Start: \_\_\_\_\_

Elapsed: 1 hr & 25 mins

End: 4:00

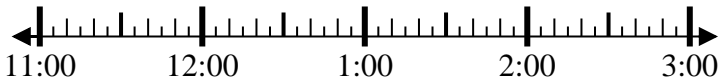


3. \_\_\_\_\_

4) Start: \_\_\_\_\_

Elapsed: 1 hr & 25 mins

End: 1:05

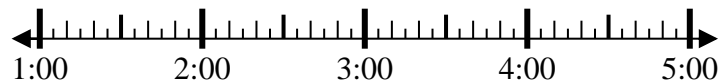


4. \_\_\_\_\_

5) Start: \_\_\_\_\_

Elapsed: 1 hr & 30 mins

End: 2:40

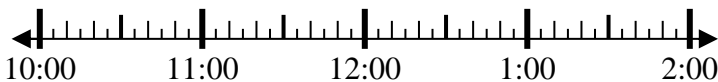


5. \_\_\_\_\_

6) Start: \_\_\_\_\_

Elapsed: 1 hr & 40 mins

End: 12:05

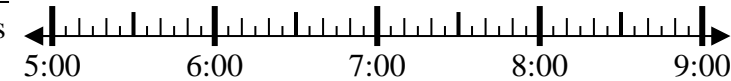


6. \_\_\_\_\_

7) Start: \_\_\_\_\_

Elapsed: 2 hrs & 30 mins

End: 7:55



7. \_\_\_\_\_

8) Start: \_\_\_\_\_

Elapsed: 2 hrs & 15 mins

End: 9:35

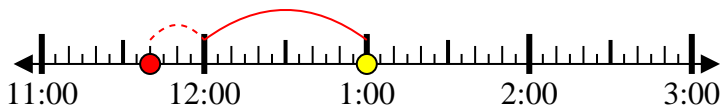


8. \_\_\_\_\_



Solve each problem.

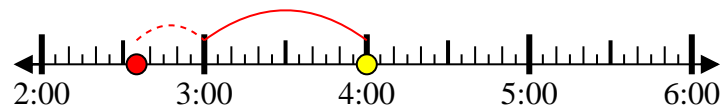
1) Start: 11:40  
 Elapsed: 1 hr & 20 mins  
 End: 1:00



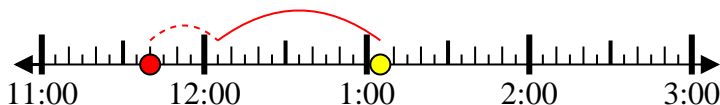
2) Start: 4:20  
 Elapsed: 1 hr & 10 mins  
 End: 5:30



3) Start: 2:35  
 Elapsed: 1 hr & 25 mins  
 End: 4:00



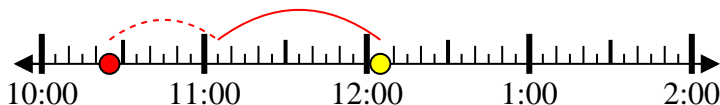
4) Start: 11:40  
 Elapsed: 1 hr & 25 mins  
 End: 1:05



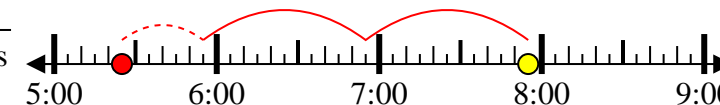
5) Start: 1:10  
 Elapsed: 1 hr & 30 mins  
 End: 2:40



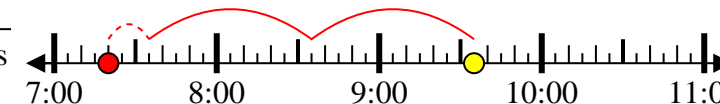
6) Start: 10:25  
 Elapsed: 1 hr & 40 mins  
 End: 12:05



7) Start: 5:25  
 Elapsed: 2 hrs & 30 mins  
 End: 7:55



8) Start: 7:20  
 Elapsed: 2 hrs & 15 mins  
 End: 9:35



Answers

1. 11:40

2. 4:20

3. 2:35

4. 11:40

5. 1:10

6. 10:25

7. 5:25

8. 7:20