



Solve each problem.

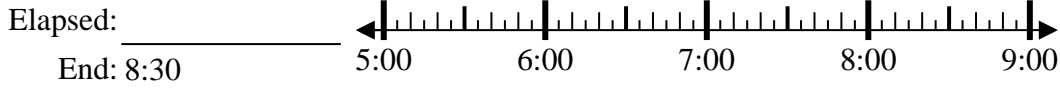
Answers

1) Start: 3:50



1. _____

2) Start: 5:50



2. _____

3) Start: 9:05



3. _____

4) Start: 1:20



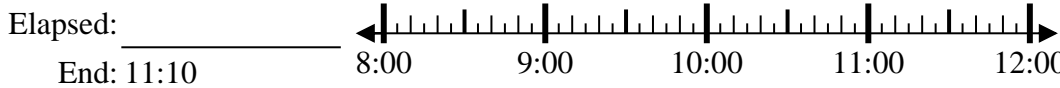
4. _____

5) Start: 9:45



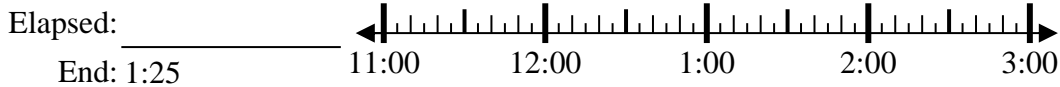
5. _____

6) Start: 8:25



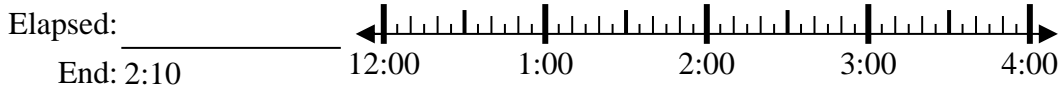
6. _____

7) Start: 11:40



7. _____

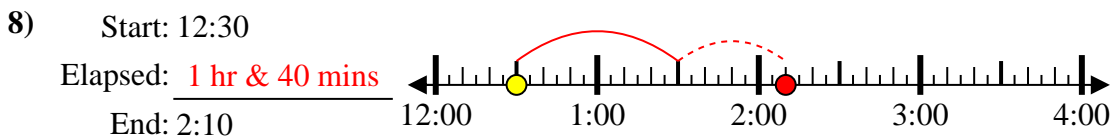
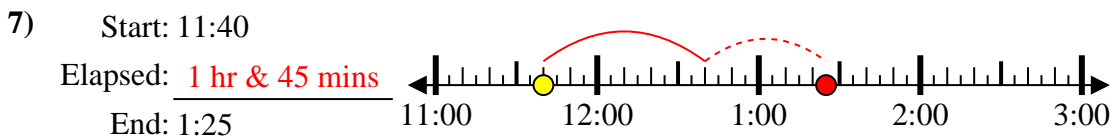
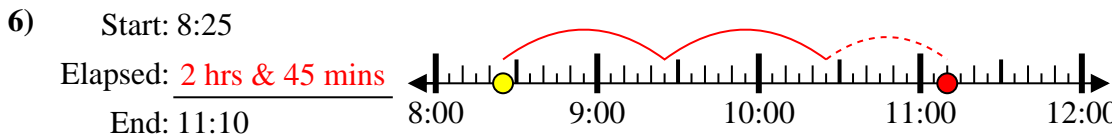
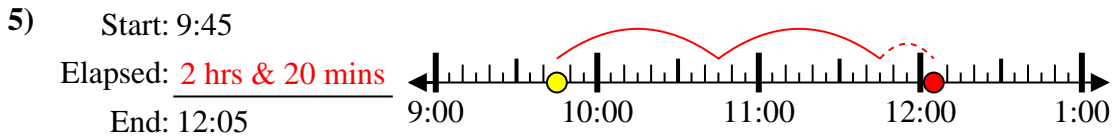
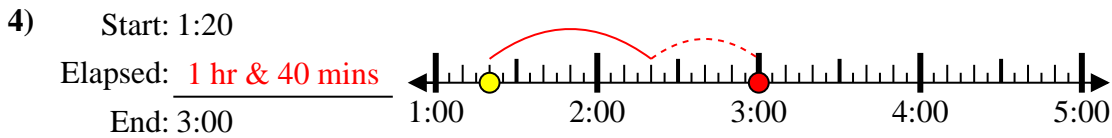
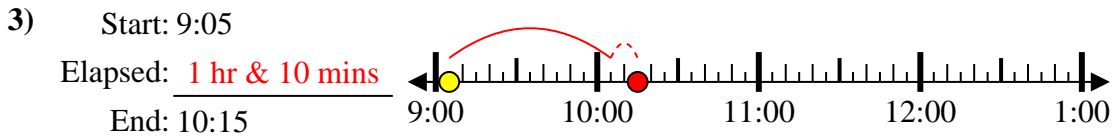
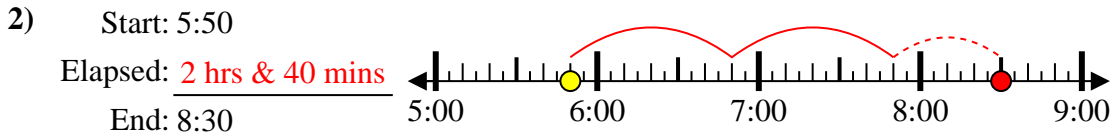
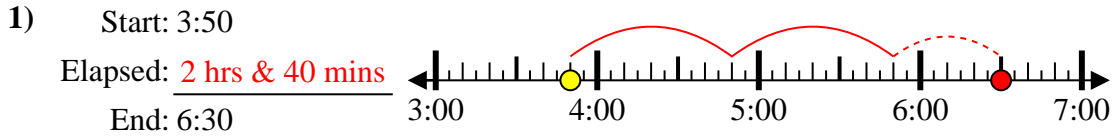
8) Start: 12:30



8. _____



Solve each problem.



Answers

1. 2 hrs & 40 mins

2. 2 hrs & 40 mins

3. 1 hr & 10 mins

4. 1 hr & 40 mins

5. 2 hrs & 20 mins

6. 2 hrs & 45 mins

7. 1 hr & 45 mins

8. 1 hr & 40 mins