

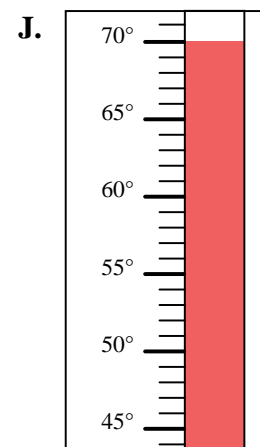
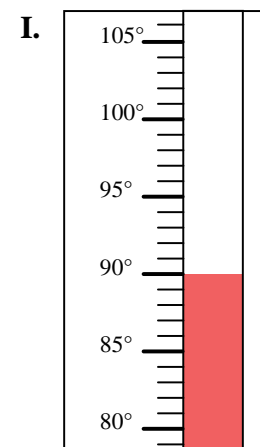
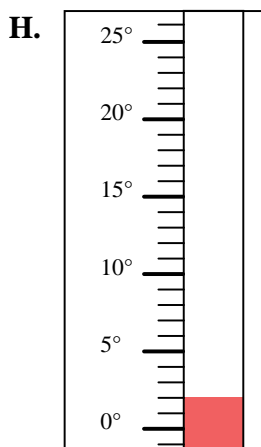
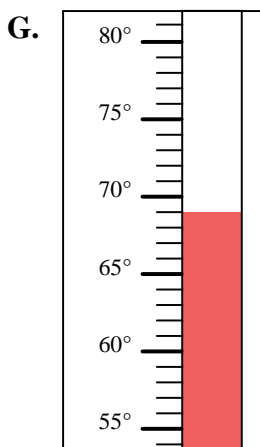
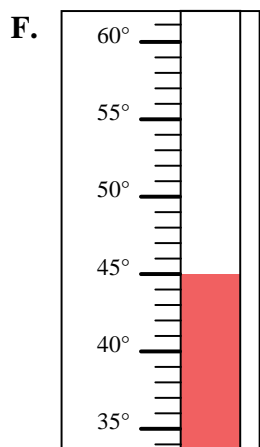
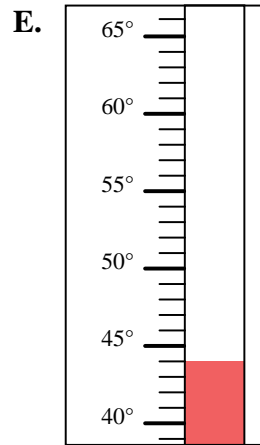
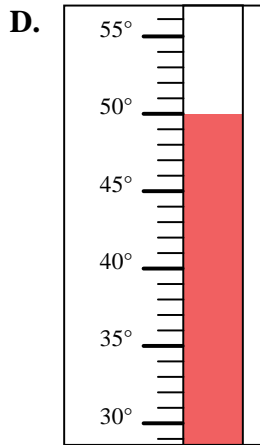
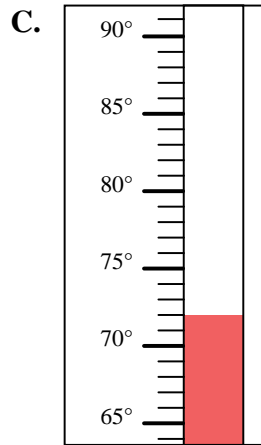
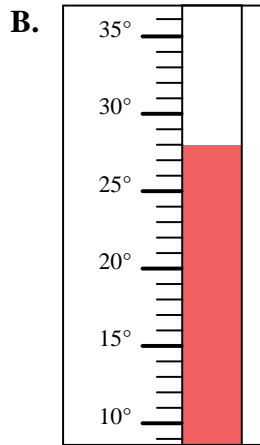
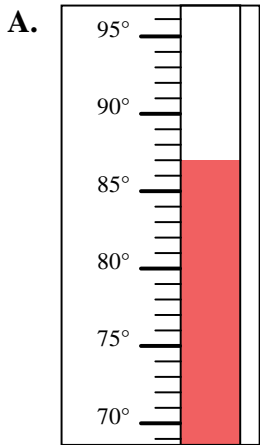


Determine which letter best answers each question.

Answers

- 1) Which thermometer best represents the temperature 87°?
- 2) Which thermometer best represents the temperature 69°?
- 3) Which thermometer best represents the temperature 70°?
- 4) Which thermometer best represents the temperature 44°?
- 5) Which thermometer best represents the temperature 2°?
- 6) Which thermometer best represents the temperature 28°?
- 7) Which thermometer best represents the temperature 90°?
- 8) Which thermometer best represents the temperature 72°?
- 9) Which thermometer best represents the temperature 50°?
- 10) Which thermometer best represents the temperature 45°?

1. _____
2. _____
3. _____
4. _____
5. _____
6. _____
7. _____
8. _____
9. _____
10. _____





Determine which letter best answers each question.

Answers

- 1) Which thermometer best represents the temperature 87°?
- 2) Which thermometer best represents the temperature 69°?
- 3) Which thermometer best represents the temperature 70°?
- 4) Which thermometer best represents the temperature 44°?
- 5) Which thermometer best represents the temperature 2°?
- 6) Which thermometer best represents the temperature 28°?
- 7) Which thermometer best represents the temperature 90°?
- 8) Which thermometer best represents the temperature 72°?
- 9) Which thermometer best represents the temperature 50°?
- 10) Which thermometer best represents the temperature 45°?

1. **A**
2. **G**
3. **J**
4. **E**
5. **H**
6. **B**
7. **I**
8. **C**
9. **D**
10. **F**

