



Express each number using tally marks.

1) 79 \_\_\_\_\_

2) 25 \_\_\_\_\_

3) 80 \_\_\_\_\_

4) 73 \_\_\_\_\_

5) 72 \_\_\_\_\_

6) 64 \_\_\_\_\_

7) 90 \_\_\_\_\_

8) 63 \_\_\_\_\_

9) 52 \_\_\_\_\_

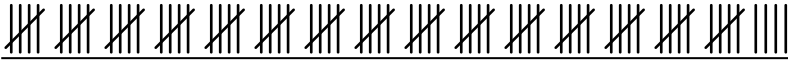
10) 84 \_\_\_\_\_

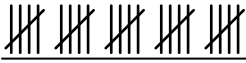
11) 92 \_\_\_\_\_

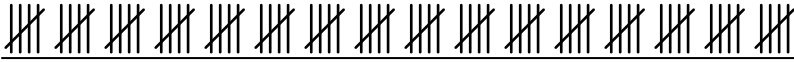
12) 56 \_\_\_\_\_




Express each number using tally marks.

1) 79 

2) 25 

3) 80 

4) 73 

5) 72 

6) 64 

7) 90 

8) 63 

9) 52 

10) 84 

11) 92 

12) 56 