



Use the visual model to solve each problem.

Answers

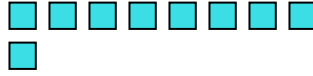
1) There are 6 hexagons below.



If you were to take away 1, how many would be left?

$6 - 1 = ?$

2) There are 9 squares below.



If you were to take away 7, how many would be left?

$9 - 7 = ?$

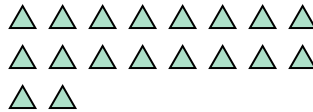
3) There are 2 circles below.



If you were to take away 1, how many would be left?

$2 - 1 = ?$

4) There are 18 triangles below.



If you were to take away 5, how many would be left?

$18 - 5 = ?$

5) There are 5 rectangles below.



If you were to take away 4, how many would be left?

$5 - 4 = ?$


6) There are 3 stars below.



If you were to take away 1, how many would be left?

$3 - 1 = ?$

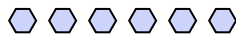
7) There are 20 squares below.



If you were to take away 16, how many would be left?

$20 - 16 = ?$

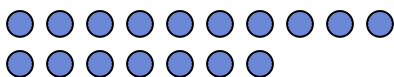
8) There are 6 hexagons below.



If you were to take away 4, how many would be left?

$6 - 4 = ?$

9) There are 17 circles below.



If you were to take away 10, how many would be left?

$17 - 10 = ?$

10) There are 7 rectangles below.



If you were to take away 6, how many would be left?

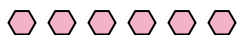
$7 - 6 = ?$

1. _____
2. _____
3. _____
4. _____
5. _____
6. _____
7. _____
8. _____
9. _____
10. _____



Use the visual model to solve each problem.


1) There are 6 hexagons below.



If you were to take away 1, how many would be left?

6 - 1 = ?

2) There are 9 squares below.



If you were to take away 7, how many would be left?

9 - 7 = ?

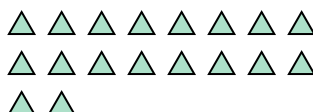
3) There are 2 circles below.



If you were to take away 1, how many would be left?

2 - 1 = ?

4) There are 18 triangles below.



If you were to take away 5, how many would be left?

18 - 5 = ?

5) There are 5 rectangles below.



If you were to take away 4, how many would be left?

5 - 4 = ?

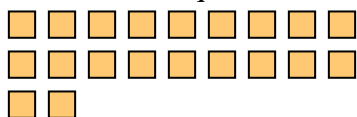
6) There are 3 stars below.



If you were to take away 1, how many would be left?

3 - 1 = ?

7) There are 20 squares below.



If you were to take away 16, how many would be left?

20 - 16 = ?

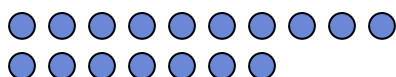
8) There are 6 hexagons below.



If you were to take away 4, how many would be left?

6 - 4 = ?

9) There are 17 circles below.



If you were to take away 10, how many would be left?

17 - 10 = ?

10) There are 7 rectangles below.



If you were to take away 6, how many would be left?

7 - 6 = ?

Answers

1. 5

2. 2

3. 1

4. 13

5. 1

6. 2

7. 4

8. 2

9. 7

10. 1



Use the visual model to solve each problem.

Answers

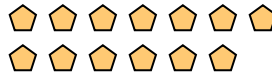
1) There are 6 circles below.



If you were to take away 4, how many would be left?

$6 - 4 = ?$

2) There are 13 pentagons below.



If you were to take away 10, how many would be left?

$13 - 10 = ?$

3) There are 3 hexagons below.



If you were to take away 1, how many would be left?

$3 - 1 = ?$

4) There are 7 circles below.



If you were to take away 1, how many would be left?

$7 - 1 = ?$

5) There are 3 squares below.



If you were to take away 2, how many would be left?

$3 - 2 = ?$

6) There are 9 rectangles below.



If you were to take away 6, how many would be left?

$9 - 6 = ?$

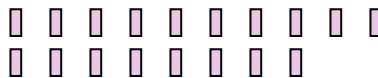
7) There are 12 stars below.



If you were to take away 9, how many would be left?

$12 - 9 = ?$

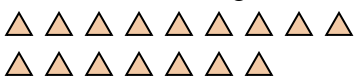
8) There are 18 rectangles below.



If you were to take away 3, how many would be left?

$18 - 3 = ?$

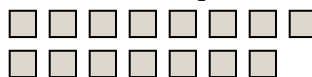
9) There are 16 triangles below.



If you were to take away 4, how many would be left?

$16 - 4 = ?$

10) There are 15 squares below.



If you were to take away 6, how many would be left?

$15 - 6 = ?$

1. _____
2. _____
3. _____
4. _____
5. _____
6. _____
7. _____
8. _____
9. _____
10. _____



Use the visual model to solve each problem.

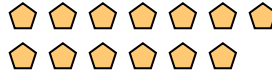
1) There are 6 circles below.



If you were to take away 4, how many would be left?

$6 - 4 = ?$

2) There are 13 pentagons below.



If you were to take away 10, how many would be left?

$13 - 10 = ?$

3) There are 3 hexagons below.



If you were to take away 1, how many would be left?

$3 - 1 = ?$


4) There are 7 circles below.



If you were to take away 1, how many would be left?

$7 - 1 = ?$

5) There are 3 squares below.



If you were to take away 2, how many would be left?

$3 - 2 = ?$

6) There are 9 rectangles below.



If you were to take away 6, how many would be left?

$9 - 6 = ?$

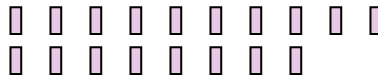
7) There are 12 stars below.



If you were to take away 9, how many would be left?

$12 - 9 = ?$

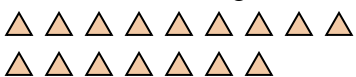
8) There are 18 rectangles below.



If you were to take away 3, how many would be left?

$18 - 3 = ?$

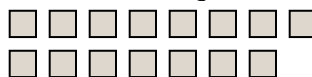
9) There are 16 triangles below.



If you were to take away 4, how many would be left?

$16 - 4 = ?$

10) There are 15 squares below.



If you were to take away 6, how many would be left?

$15 - 6 = ?$

Answers

1. 2

2. 3

3. 2

4. 6

5. 1

6. 3

7. 3

8. 15

9. 12

10. 9



Use the visual model to solve each problem.

Answers

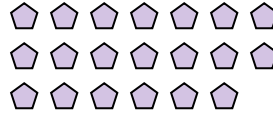
1) There are 4 triangles below.



If you were to take away 2, how many would be left?

$4 - 2 = ?$

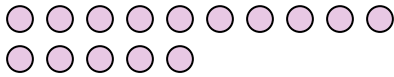
2) There are 20 pentagons below.



If you were to take away 16, how many would be left?

$20 - 16 = ?$

3) There are 15 circles below.



If you were to take away 4, how many would be left?

$15 - 4 = ?$


4) There are 2 squares below.



If you were to take away 1, how many would be left?

$2 - 1 = ?$

5) There are 19 circles below.



If you were to take away 7, how many would be left?

$19 - 7 = ?$

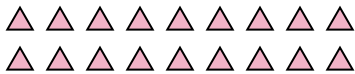
6) There are 3 hexagons below.



If you were to take away 2, how many would be left?

$3 - 2 = ?$

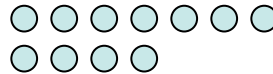
7) There are 18 triangles below.



If you were to take away 15, how many would be left?

$18 - 15 = ?$


8) There are 11 circles below.



If you were to take away 1, how many would be left?

$11 - 1 = ?$


9) There are 17 circles below.



If you were to take away 14, how many would be left?

$17 - 14 = ?$

10) There are 8 circles below.



If you were to take away 5, how many would be left?

$8 - 5 = ?$

1. _____
2. _____
3. _____
4. _____
5. _____
6. _____
7. _____
8. _____
9. _____
10. _____



Use the visual model to solve each problem.


1) There are 4 triangles below.



If you were to take away 2, how many would be left?

$4 - 2 = ?$

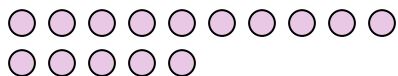
2) There are 20 pentagons below.



If you were to take away 16, how many would be left?

$20 - 16 = ?$

3) There are 15 circles below.



If you were to take away 4, how many would be left?

$15 - 4 = ?$


4) There are 2 squares below.



If you were to take away 1, how many would be left?

$2 - 1 = ?$

5) There are 19 circles below.



If you were to take away 7, how many would be left?

$19 - 7 = ?$

6) There are 3 hexagons below.



If you were to take away 2, how many would be left?

$3 - 2 = ?$

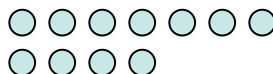
7) There are 18 triangles below.



If you were to take away 15, how many would be left?

$18 - 15 = ?$

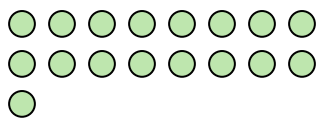
8) There are 11 circles below.



If you were to take away 1, how many would be left?

$11 - 1 = ?$


9) There are 17 circles below.



If you were to take away 14, how many would be left?

$17 - 14 = ?$

10) There are 8 circles below.



If you were to take away 5, how many would be left?

$8 - 5 = ?$

Answers

1. 2

2. 4

3. 11

4. 1

5. 12

6. 1

7. 3

8. 10

9. 3

10. 3



Use the visual model to solve each problem.

Answers

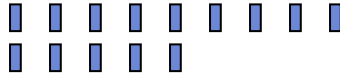
1) There are 13 stars below.



If you were to take away 1, how many would be left?

$13 - 1 = ?$

2) There are 14 rectangles below.



If you were to take away 13, how many would be left?

$14 - 13 = ?$


3) There are 5 stars below.



If you were to take away 2, how many would be left?

$5 - 2 = ?$

4) There are 10 triangles below.



If you were to take away 3, how many would be left?

$10 - 3 = ?$

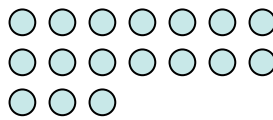
5) There are 3 stars below.



If you were to take away 2, how many would be left?

$3 - 2 = ?$

6) There are 17 circles below.



If you were to take away 4, how many would be left?

$17 - 4 = ?$

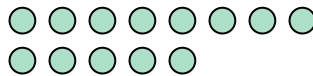
7) There are 5 pentagons below.



If you were to take away 4, how many would be left?

$5 - 4 = ?$

8) There are 13 circles below.



If you were to take away 12, how many would be left?

$13 - 12 = ?$

9) There are 2 circles below.



If you were to take away 1, how many would be left?

$2 - 1 = ?$

10) There are 12 stars below.



If you were to take away 5, how many would be left?

$12 - 5 = ?$

1. _____
2. _____
3. _____
4. _____
5. _____
6. _____
7. _____
8. _____
9. _____
10. _____



Use the visual model to solve each problem.

- 1) There are 13 stars below.
 ☆ ☆ ☆ ☆ ☆ ☆ ☆ ☆ ☆
 ☆ ☆ ☆ ☆ ☆

If you were to take away 1, how many would be left?
 $13 - 1 = ?$

- 2) There are 14 rectangles below.
 ▮ ▮ ▮ ▮ ▮ ▮ ▮ ▮ ▮ ▮
 ▮ ▮ ▮ ▮ ▮

If you were to take away 13, how many would be left?
 $14 - 13 = ?$

- 3) There are 5 stars below.
 ☆ ☆ ☆ ☆ ☆

If you were to take away 2, how many would be left?
 $5 - 2 = ?$

- 4) There are 10 triangles below.
 ▲ ▲ ▲ ▲ ▲ ▲ ▲ ▲ ▲ ▲
 ▲

If you were to take away 3, how many would be left?
 $10 - 3 = ?$

- 5) There are 3 stars below.
 ☆ ☆ ☆

If you were to take away 2, how many would be left?
 $3 - 2 = ?$

- 6) There are 17 circles below.
 ○ ○ ○ ○ ○ ○ ○ ○
 ○ ○ ○ ○ ○ ○ ○ ○
 ○ ○ ○

If you were to take away 4, how many would be left?
 $17 - 4 = ?$

- 7) There are 5 pentagons below.
 ⬠ ⬠ ⬠ ⬠ ⬠

If you were to take away 4, how many would be left?
 $5 - 4 = ?$

- 8) There are 13 circles below.
 ○ ○ ○ ○ ○ ○ ○ ○ ○
 ○ ○ ○ ○ ○ ○

If you were to take away 12, how many would be left?
 $13 - 12 = ?$

- 9) There are 2 circles below.
 ○ ○

If you were to take away 1, how many would be left?
 $2 - 1 = ?$

- 10) There are 12 stars below.
 ☆ ☆ ☆ ☆ ☆ ☆ ☆ ☆ ☆ ☆
 ☆ ☆ ☆

If you were to take away 5, how many would be left?
 $12 - 5 = ?$

Answers

1. 12
 2. 1
 3. 3
 4. 7
 5. 1
 6. 13
 7. 1
 8. 1
 9. 1
 10. 7



Use the visual model to solve each problem.

Answers

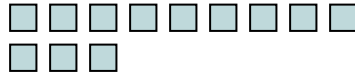
1) There are 11 rectangles below.



If you were to take away 2, how many would be left?

$11 - 2 = ?$

2) There are 12 squares below.



If you were to take away 8, how many would be left?

$12 - 8 = ?$

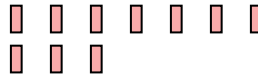
3) There are 11 stars below.



If you were to take away 10, how many would be left?

$11 - 10 = ?$

4) There are 10 rectangles below.



If you were to take away 3, how many would be left?

$10 - 3 = ?$

5) There are 15 stars below.



If you were to take away 2, how many would be left?

$15 - 2 = ?$

6) There are 12 triangles below.



If you were to take away 7, how many would be left?

$12 - 7 = ?$

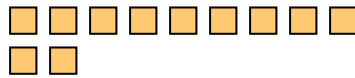
7) There are 3 squares below.



If you were to take away 2, how many would be left?

$3 - 2 = ?$

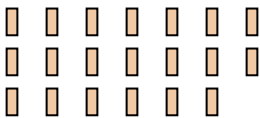
8) There are 11 squares below.



If you were to take away 1, how many would be left?

$11 - 1 = ?$

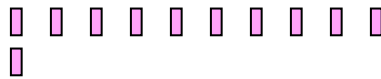
9) There are 20 rectangles below.



If you were to take away 9, how many would be left?

$20 - 9 = ?$

10) There are 11 rectangles below.



If you were to take away 9, how many would be left?

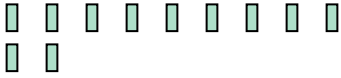
$11 - 9 = ?$

- 1. _____
- 2. _____
- 3. _____
- 4. _____
- 5. _____
- 6. _____
- 7. _____
- 8. _____
- 9. _____
- 10. _____



Use the visual model to solve each problem.

1) There are 11 rectangles below.



If you were to take away 2, how many would be left?

$11 - 2 = ?$

2) There are 12 squares below.



If you were to take away 8, how many would be left?

$12 - 8 = ?$

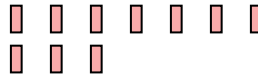
3) There are 11 stars below.



If you were to take away 10, how many would be left?

$11 - 10 = ?$

4) There are 10 rectangles below.



If you were to take away 3, how many would be left?

$10 - 3 = ?$

5) There are 15 stars below.



If you were to take away 2, how many would be left?

$15 - 2 = ?$

6) There are 12 triangles below.



If you were to take away 7, how many would be left?

$12 - 7 = ?$

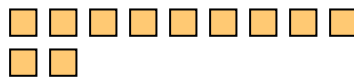
7) There are 3 squares below.



If you were to take away 2, how many would be left?

$3 - 2 = ?$

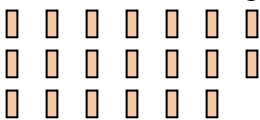
8) There are 11 squares below.



If you were to take away 1, how many would be left?

$11 - 1 = ?$

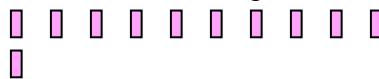
9) There are 20 rectangles below.



If you were to take away 9, how many would be left?

$20 - 9 = ?$

10) There are 11 rectangles below.



If you were to take away 9, how many would be left?

$11 - 9 = ?$

Answers

1. 9

2. 4

3. 1

4. 7

5. 13

6. 5

7. 1

8. 10

9. 11

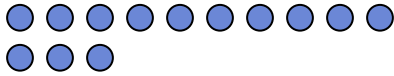
10. 2



Use the visual model to solve each problem.

Answers

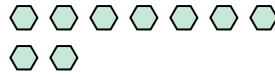
1) There are 13 circles below.



If you were to take away 1, how many would be left?

$13 - 1 = ?$

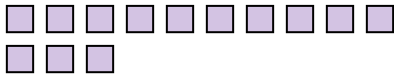
2) There are 9 hexagons below.



If you were to take away 6, how many would be left?

$9 - 6 = ?$

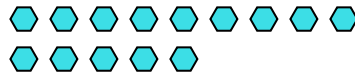
3) There are 13 squares below.



If you were to take away 11, how many would be left?

$13 - 11 = ?$

4) There are 14 hexagons below.



If you were to take away 7, how many would be left?

$14 - 7 = ?$

5) There are 10 rectangles below.



If you were to take away 4, how many would be left?

$10 - 4 = ?$

6) There are 5 rectangles below.



If you were to take away 1, how many would be left?

$5 - 1 = ?$

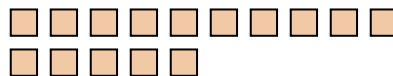
7) There are 17 pentagons below.



If you were to take away 2, how many would be left?

$17 - 2 = ?$

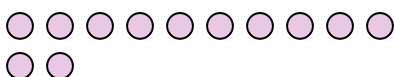
8) There are 15 squares below.



If you were to take away 12, how many would be left?

$15 - 12 = ?$

9) There are 12 circles below.



If you were to take away 3, how many would be left?

$12 - 3 = ?$

10) There are 5 rectangles below.



If you were to take away 4, how many would be left?

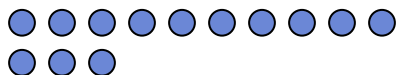
$5 - 4 = ?$

1. _____
2. _____
3. _____
4. _____
5. _____
6. _____
7. _____
8. _____
9. _____
10. _____



Use the visual model to solve each problem.

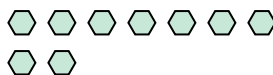
1) There are 13 circles below.



If you were to take away 1, how many would be left?

13 - 1 = ?

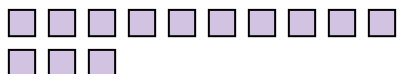
2) There are 9 hexagons below.



If you were to take away 6, how many would be left?

9 - 6 = ?

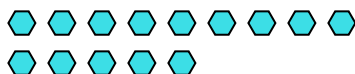
3) There are 13 squares below.



If you were to take away 11, how many would be left?

13 - 11 = ?

4) There are 14 hexagons below.



If you were to take away 7, how many would be left?

14 - 7 = ?

5) There are 10 rectangles below.



If you were to take away 4, how many would be left?

10 - 4 = ?

6) There are 5 rectangles below.



If you were to take away 1, how many would be left?

5 - 1 = ?

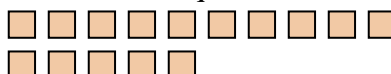
7) There are 17 pentagons below.



If you were to take away 2, how many would be left?

17 - 2 = ?

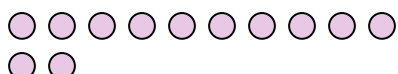
8) There are 15 squares below.



If you were to take away 12, how many would be left?

15 - 12 = ?

9) There are 12 circles below.



If you were to take away 3, how many would be left?

12 - 3 = ?

10) There are 5 rectangles below.



If you were to take away 4, how many would be left?

5 - 4 = ?

Answers

1. 12

2. 3

3. 2

4. 7

5. 6

6. 4

7. 15

8. 3

9. 9

10. 1



Use the visual model to solve each problem.

Answers

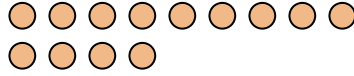
1) There are 9 triangles below.



If you were to take away 8, how many would be left?

$9 - 8 = ?$

2) There are 13 circles below.



If you were to take away 7, how many would be left?

$13 - 7 = ?$

3) There are 9 rectangles below.



If you were to take away 5, how many would be left?

$9 - 5 = ?$

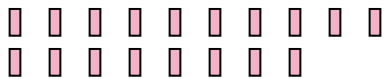
4) There are 6 stars below.



If you were to take away 2, how many would be left?

$6 - 2 = ?$

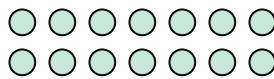
5) There are 18 rectangles below.



If you were to take away 9, how many would be left?

$18 - 9 = ?$

6) There are 14 circles below.



If you were to take away 9, how many would be left?

$14 - 9 = ?$

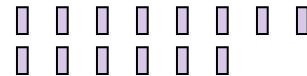
7) There are 2 squares below.



If you were to take away 1, how many would be left?

$2 - 1 = ?$

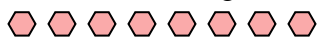
8) There are 14 rectangles below.



If you were to take away 5, how many would be left?

$14 - 5 = ?$

9) There are 8 hexagons below.



If you were to take away 2, how many would be left?

$8 - 2 = ?$

10) There are 3 circles below.



If you were to take away 1, how many would be left?

$3 - 1 = ?$

1. _____
2. _____
3. _____
4. _____
5. _____
6. _____
7. _____
8. _____
9. _____
10. _____



Use the visual model to solve each problem.

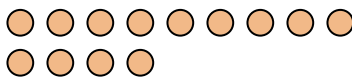
1) There are 9 triangles below.



If you were to take away 8, how many would be left?

$9 - 8 = ?$

2) There are 13 circles below.



If you were to take away 7, how many would be left?

$13 - 7 = ?$

3) There are 9 rectangles below.



If you were to take away 5, how many would be left?

$9 - 5 = ?$

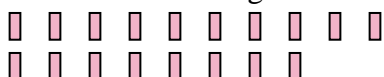
4) There are 6 stars below.



If you were to take away 2, how many would be left?

$6 - 2 = ?$


5) There are 18 rectangles below.



If you were to take away 9, how many would be left?

$18 - 9 = ?$

6) There are 14 circles below.



If you were to take away 9, how many would be left?

$14 - 9 = ?$

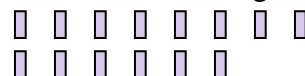
7) There are 2 squares below.



If you were to take away 1, how many would be left?

$2 - 1 = ?$

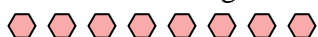
8) There are 14 rectangles below.



If you were to take away 5, how many would be left?

$14 - 5 = ?$

9) There are 8 hexagons below.



If you were to take away 2, how many would be left?

$8 - 2 = ?$

10) There are 3 circles below.



If you were to take away 1, how many would be left?

$3 - 1 = ?$

Answers

1. 1

2. 6

3. 4

4. 4

5. 9

6. 5

7. 1

8. 9

9. 6

10. 2



Use the visual model to solve each problem.

Answers

1) There are 15 stars below.



If you were to take away 8, how many would be left?

$15 - 8 = ?$

2) There are 8 triangles below.



If you were to take away 4, how many would be left?

$8 - 4 = ?$

3) There are 6 squares below.



If you were to take away 2, how many would be left?

$6 - 2 = ?$

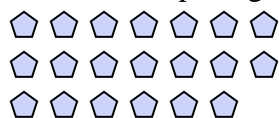
4) There are 5 rectangles below.



If you were to take away 1, how many would be left?

$5 - 1 = ?$

5) There are 20 pentagons below.



If you were to take away 4, how many would be left?

$20 - 4 = ?$

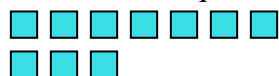
6) There are 8 stars below.



If you were to take away 6, how many would be left?

$8 - 6 = ?$

7) There are 10 squares below.



If you were to take away 8, how many would be left?

$10 - 8 = ?$

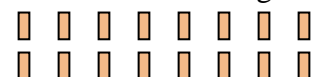
8) There are 19 stars below.



If you were to take away 10, how many would be left?

$19 - 10 = ?$

9) There are 16 rectangles below.



If you were to take away 5, how many would be left?

$16 - 5 = ?$

10) There are 6 squares below.



If you were to take away 1, how many would be left?

$6 - 1 = ?$

- 1. _____
- 2. _____
- 3. _____
- 4. _____
- 5. _____
- 6. _____
- 7. _____
- 8. _____
- 9. _____
- 10. _____



Use the visual model to solve each problem.

1) There are 15 stars below.



If you were to take away 8, how many would be left?

15 - 8 = ?

2) There are 8 triangles below.



If you were to take away 4, how many would be left?

8 - 4 = ?

3) There are 6 squares below.



If you were to take away 2, how many would be left?

6 - 2 = ?

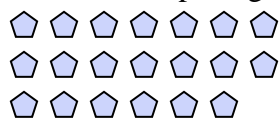
4) There are 5 rectangles below.



If you were to take away 1, how many would be left?

5 - 1 = ?

5) There are 20 pentagons below.



If you were to take away 4, how many would be left?

20 - 4 = ?

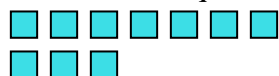
6) There are 8 stars below.



If you were to take away 6, how many would be left?

8 - 6 = ?

7) There are 10 squares below.



If you were to take away 8, how many would be left?

10 - 8 = ?

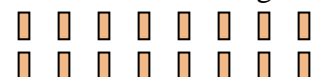
8) There are 19 stars below.



If you were to take away 10, how many would be left?

19 - 10 = ?

9) There are 16 rectangles below.



If you were to take away 5, how many would be left?

16 - 5 = ?

10) There are 6 squares below.



If you were to take away 1, how many would be left?

6 - 1 = ?

Answers

1. 7

2. 4

3. 4

4. 4

5. 16

6. 2

7. 2

8. 9

9. 11

10. 5



Use the visual model to solve each problem.

Answers

- 1) There are 13 triangles below.
-

If you were to take away 1, how many would be left?

$13 - 1 = ?$

- 2) There are 15 triangles below.
-

If you were to take away 5, how many would be left?

$15 - 5 = ?$

- 3) There are 11 stars below.
-

If you were to take away 4, how many would be left?

$11 - 4 = ?$

- 4) There are 13 squares below.
-

If you were to take away 4, how many would be left?

$13 - 4 = ?$

- 5) There are 6 stars below.
-

If you were to take away 1, how many would be left?

$6 - 1 = ?$

- 6) There are 18 stars below.
-

If you were to take away 10, how many would be left?

$18 - 10 = ?$

- 7) There are 10 squares below.
-

If you were to take away 2, how many would be left?

$10 - 2 = ?$

- 8) There are 9 circles below.
-

If you were to take away 3, how many would be left?

$9 - 3 = ?$

- 9) There are 5 stars below.
-

If you were to take away 1, how many would be left?

$5 - 1 = ?$

- 10) There are 15 hexagons below.
-

If you were to take away 1, how many would be left?

$15 - 1 = ?$

1. _____
2. _____
3. _____
4. _____
5. _____
6. _____
7. _____
8. _____
9. _____
10. _____



Use the visual model to solve each problem.

- 1) There are 13 triangles below.

If you were to take away 1, how many would be left?
 $13 - 1 = ?$

- 2) There are 15 triangles below.

If you were to take away 5, how many would be left?
 $15 - 5 = ?$

- 3) There are 11 stars below.

If you were to take away 4, how many would be left?
 $11 - 4 = ?$

- 4) There are 13 squares below.

If you were to take away 4, how many would be left?
 $13 - 4 = ?$

- 5) There are 6 stars below.

If you were to take away 1, how many would be left?
 $6 - 1 = ?$

- 6) There are 18 stars below.

If you were to take away 10, how many would be left?
 $18 - 10 = ?$

- 7) There are 10 squares below.

If you were to take away 2, how many would be left?
 $10 - 2 = ?$

- 8) There are 9 circles below.

If you were to take away 3, how many would be left?
 $9 - 3 = ?$

- 9) There are 5 stars below.

If you were to take away 1, how many would be left?
 $5 - 1 = ?$

- 10) There are 15 hexagons below.

If you were to take away 1, how many would be left?
 $15 - 1 = ?$

Answers

1. 12

2. 10

3. 7

4. 9

5. 5

6. 8

7. 8

8. 6

9. 4

10. 14



Use the visual model to solve each problem.

Answers

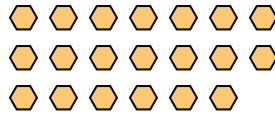
1) There are 12 squares below.



If you were to take away 4, how many would be left?

$12 - 4 = ?$

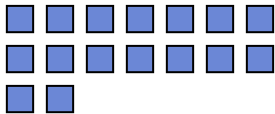
2) There are 20 hexagons below.



If you were to take away 12, how many would be left?

$20 - 12 = ?$

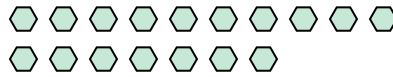
3) There are 16 squares below.



If you were to take away 11, how many would be left?

$16 - 11 = ?$

4) There are 17 hexagons below.



If you were to take away 5, how many would be left?

$17 - 5 = ?$

5) There are 4 stars below.



If you were to take away 2, how many would be left?

$4 - 2 = ?$

6) There are 6 rectangles below.



If you were to take away 4, how many would be left?

$6 - 4 = ?$

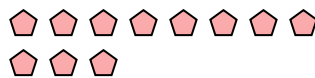
7) There are 17 rectangles below.



If you were to take away 10, how many would be left?

$17 - 10 = ?$


8) There are 11 pentagons below.



If you were to take away 6, how many would be left?

$11 - 6 = ?$

9) There are 18 pentagons below.



If you were to take away 7, how many would be left?

$18 - 7 = ?$

10) There are 9 triangles below.



If you were to take away 7, how many would be left?

$9 - 7 = ?$

1. _____
2. _____
3. _____
4. _____
5. _____
6. _____
7. _____
8. _____
9. _____
10. _____



Use the visual model to solve each problem.

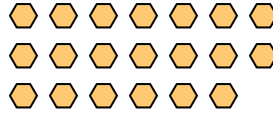
1) There are 12 squares below.



If you were to take away 4, how many would be left?

12 - 4 = ?

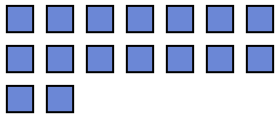
2) There are 20 hexagons below.



If you were to take away 12, how many would be left?

20 - 12 = ?

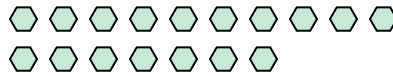
3) There are 16 squares below.



If you were to take away 11, how many would be left?

16 - 11 = ?

4) There are 17 hexagons below.



If you were to take away 5, how many would be left?

17 - 5 = ?

5) There are 4 stars below.



If you were to take away 2, how many would be left?

4 - 2 = ?

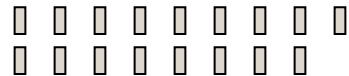
6) There are 6 rectangles below.



If you were to take away 4, how many would be left?

6 - 4 = ?

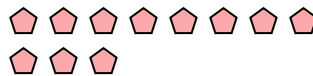
7) There are 17 rectangles below.



If you were to take away 10, how many would be left?

17 - 10 = ?

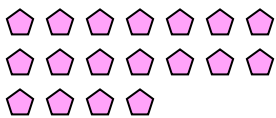
8) There are 11 pentagons below.



If you were to take away 6, how many would be left?

11 - 6 = ?

9) There are 18 pentagons below.



If you were to take away 7, how many would be left?

18 - 7 = ?

10) There are 9 triangles below.



If you were to take away 7, how many would be left?

9 - 7 = ?

Answers

1. 8

2. 8

3. 5

4. 12

5. 2

6. 2

7. 7

8. 5

9. 11

10. 2