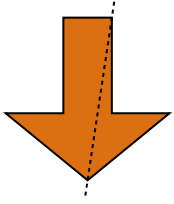


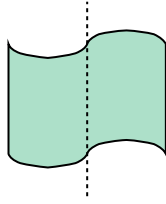


Determine if the line through the figure is a line of symmetry.

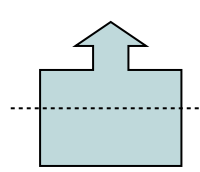
Ex)



1)



2)



Answers

Ex. no

1. _____

2. _____

3. _____

4. _____

5. _____

6. _____

7. _____

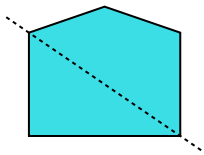
8. _____

9. _____

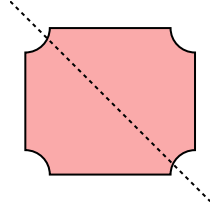
10. _____

11. _____

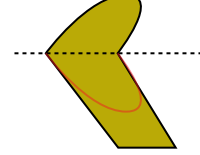
3)



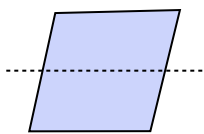
4)



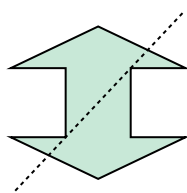
5)



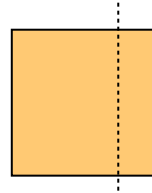
6)



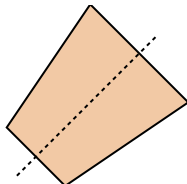
7)



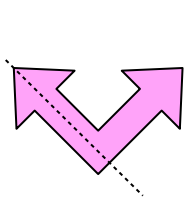
8)



9)



10)



11)

