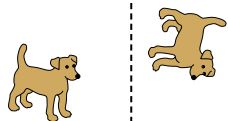




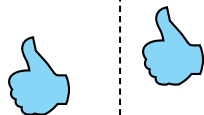
Determine if the shape is translating (slide), rotating (turn) or reflecting (flip).

Answers

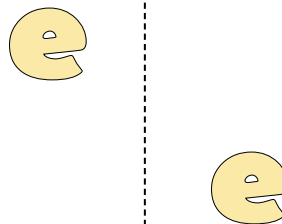
1)



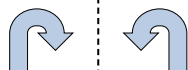
2)



3)




4)



5)



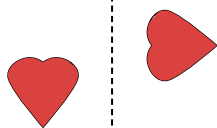
6)



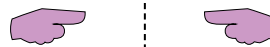
7)



8)




9)



10)



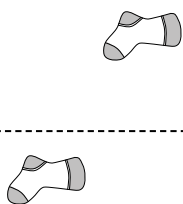
11)



12)



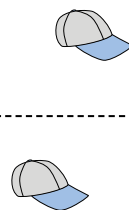
13)



14)



15)

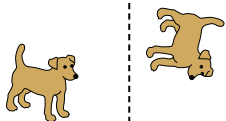


1. _____
2. _____
3. _____
4. _____
5. _____
6. _____
7. _____
8. _____
9. _____
10. _____
11. _____
12. _____
13. _____
14. _____
15. _____

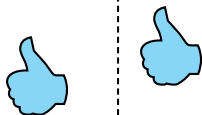


Determine if the shape is translating (slide), rotating (turn) or reflecting (flip).

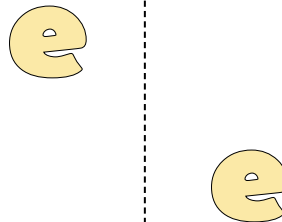
1)



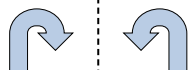
2)




3)




4)



5)



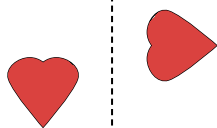
6)



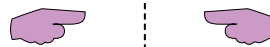
7)



8)




9)



10)



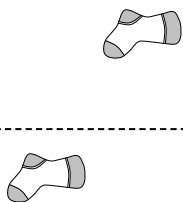
11)



12)



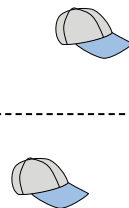
13)



14)



15)



Answers

1. rotating

2. translating

3. translating

4. reflecting

5. translating

6. rotating

7. rotating

8. rotating

9. reflecting

10. reflecting

11. reflecting

12. reflecting

13. translating

14. translating

15. translating