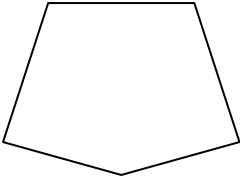





Determine if the shape shown is a regular shape or an irregular shape.

Answers


1)



2)



3)



1. _____

2. _____

3. _____

4. _____

5. _____

6. _____

7. _____

8. _____

9. _____

10. _____

11. _____


12. _____

13. _____

14. _____

15. _____

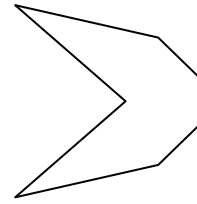
4)



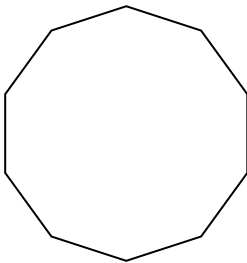
5)



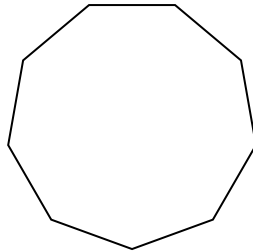
6)



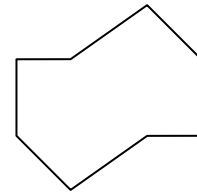
7)



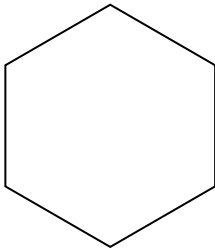
8)



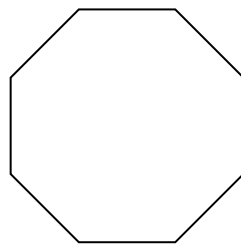
9)



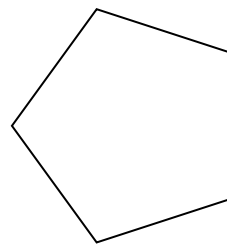
10)




11)



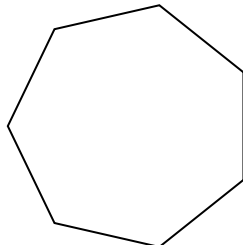
12)




13)



14)



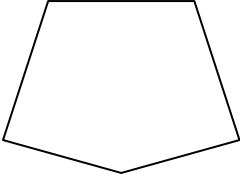
15)






Determine if the shape shown is a regular shape or an irregular shape.

1)




2)



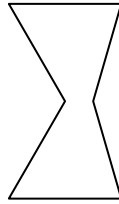
3)



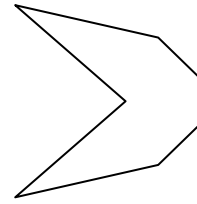
4)



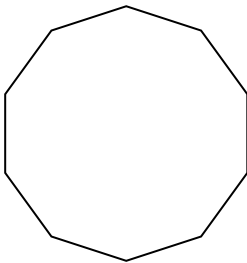
5)



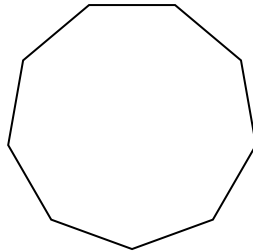
6)



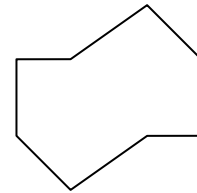
7)



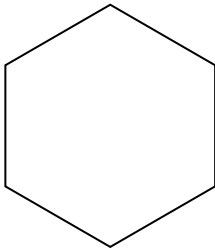
8)



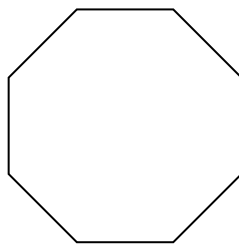
9)



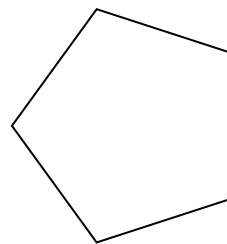
10)




11)



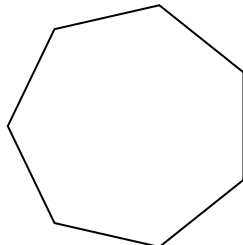
12)




13)



14)



15)



Answers

1. Irregular

2. Irregular

3. Regular

4. Irregular

5. Irregular

6. Irregular

7. Regular

8. Regular

9. Irregular

10. Regular

11. Regular

12. Regular

13. Irregular

14. Regular

15. Irregular