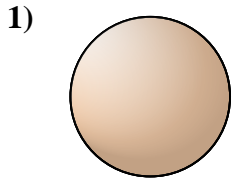


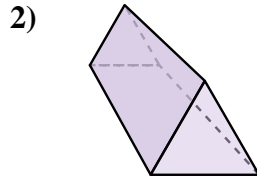


Determine which choice BEST describes the shape shown.

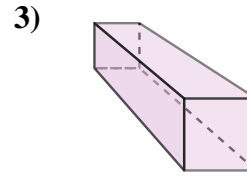
Answers



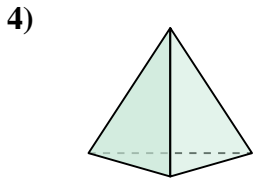
- A. triangular pyramid
- B. sphere
- C. rectangular pyramid
- D. rectangular prism



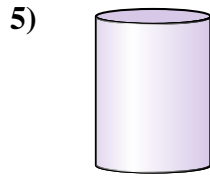
- A. triangular pyramid
- B. cone
- C. triangular prism
- D. cube



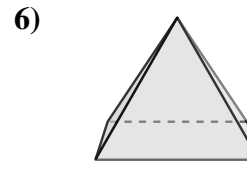
- A. cube
- B. triangular prism
- C. rectangular prism
- D. rectangular pyramid



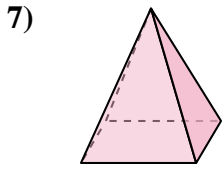
- A. triangular pyramid
- B. sphere
- C. triangular prism
- D. cube



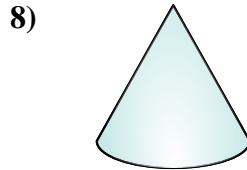
- A. rectangular prism
- B. rectangular pyramid
- C. cylinder
- D. triangular pyramid



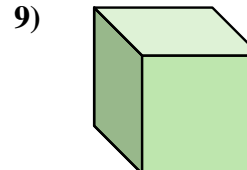
- A. cone
- B. triangular pyramid
- C. rectangular pyramid
- D. cylinder



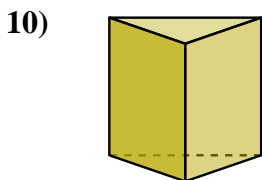
- A. triangular pyramid
- B. cube
- C. rectangular prism
- D. rectangular pyramid



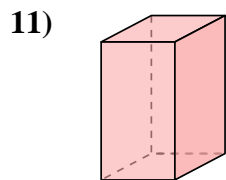
- A. rectangular pyramid
- B. cube
- C. triangular prism
- D. cone



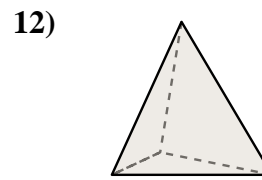
- A. cylinder
- B. rectangular prism
- C. triangular prism
- D. cube



- A. cylinder
- B. sphere
- C. cone
- D. triangular prism



- A. triangular prism
- B. cube
- C. rectangular prism
- D. cone

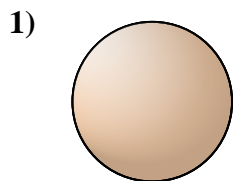


- A. sphere
- B. triangular prism
- C. cube
- D. triangular pyramid

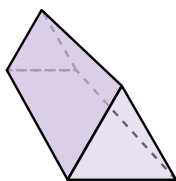
- 1. _____
- 2. _____
- 3. _____
- 4. _____
- 5. _____
- 6. _____
- 7. _____
- 8. _____
- 9. _____
- 10. _____
- 11. _____
- 12. _____



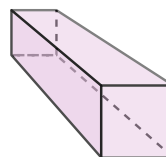
Determine which choice BEST describes the shape shown.



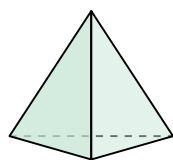
- 1)
 A. triangular pyramid
 B. sphere
 C. rectangular pyramid
 D. rectangular prism




- 2)
 A. triangular pyramid
 B. cone
 C. triangular prism
 D. cube



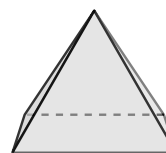
- 3)
 A. cube
 B. triangular prism
 C. rectangular prism
 D. rectangular pyramid



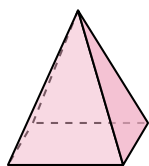
- 4)
 A. triangular pyramid
 B. sphere
 C. triangular prism
 D. cube



- 5)
 A. rectangular prism
 B. rectangular pyramid
 C. cylinder
 D. triangular pyramid



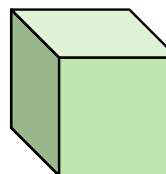
- 6)
 A. cone
 B. triangular pyramid
 C. rectangular pyramid
 D. cylinder



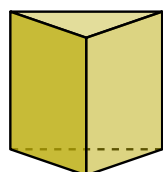
- 7)
 A. triangular pyramid
 B. cube
 C. rectangular prism
 D. rectangular pyramid



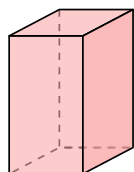
- 8)
 A. rectangular pyramid
 B. cube
 C. triangular prism
 D. cone



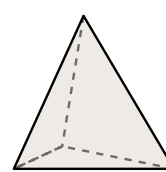
- 9)
 A. cylinder
 B. rectangular prism
 C. triangular prism
 D. cube



- 10)
 A. cylinder
 B. sphere
 C. cone
 D. triangular prism



- 11)
 A. triangular prism
 B. cube
 C. rectangular prism
 D. cone



- 12)
 A. sphere
 B. triangular prism
 C. cube
 D. triangular pyramid

Answers

1. **B**
 2. **C**
 3. **C**
 4. **A**
 5. **C**
 6. **C**
 7. **D**
 8. **D**
 9. **D**
 10. **D**
 11. **C**
 12. **D**