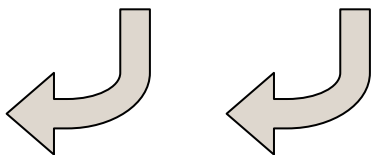





Determine if the shapes shown are 'similar', 'congruent' or 'neither'.

Answers

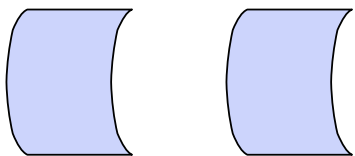
1)



2)




3)



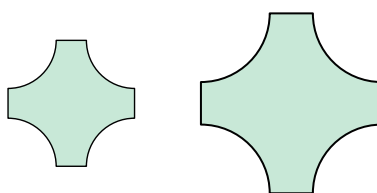
4)



5)



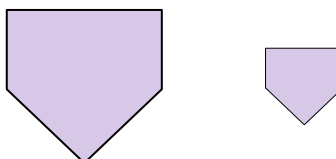
6)



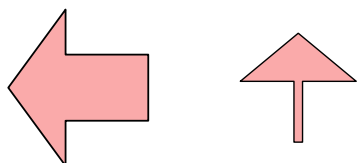
7)



8)



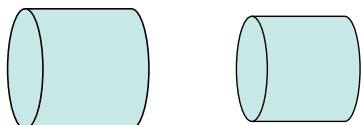
9)



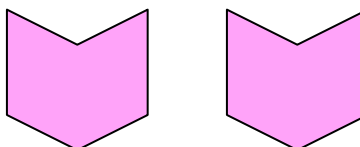
10)



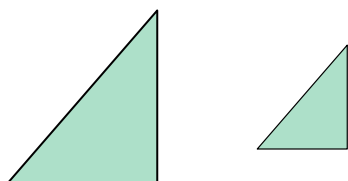
11)




12)




13)



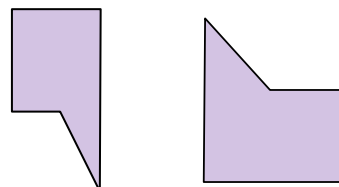
14)



15)



16)



1. _____

2. _____

3. _____

4. _____

5. _____

6. _____

7. _____

8. _____

9. _____

10. _____

11. _____

12. _____

13. _____

14. _____

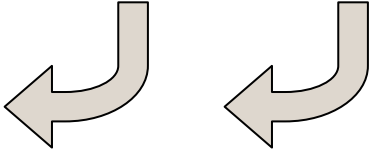
15. _____

16. _____



Determine if the shapes shown are 'similar', 'congruent' or 'neither'.

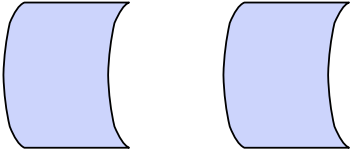
1)



2)



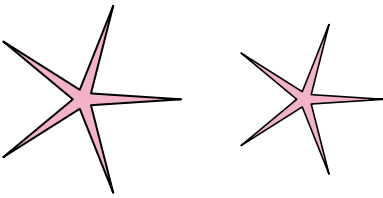
3)



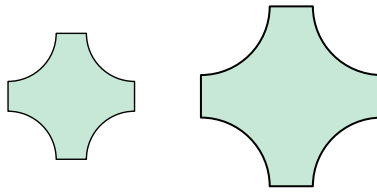
4)



5)



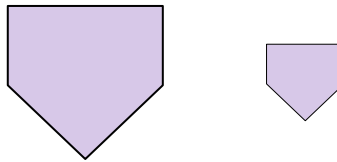
6)



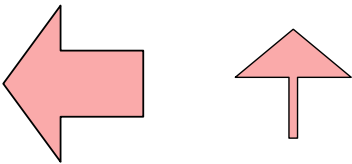
7)




8)



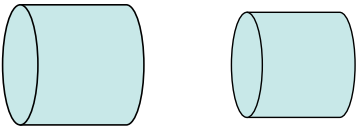
9)



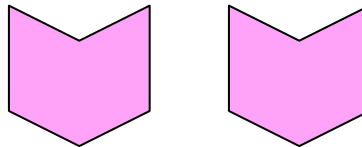
10)



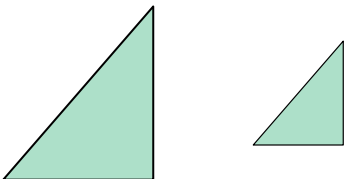
11)



12)




13)



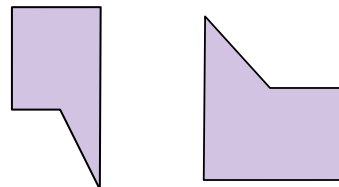
14)



15)



16)



Answers

1. congruent

2. congruent

3. congruent

4. congruent

5. similar

6. similar

7. neither

8. similar

9. neither

10. neither

11. similar

12. congruent

13. similar

14. congruent

15. neither

16. neither