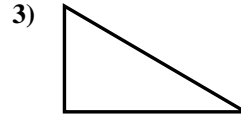
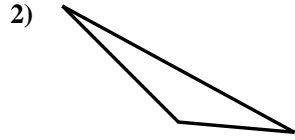
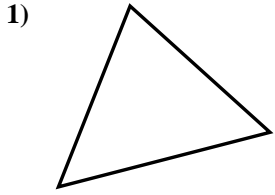




Determine if the triangle shown is a right triangle (yes) or not (no).

Answers

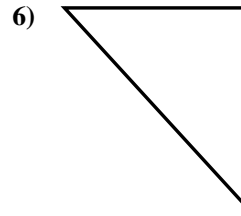
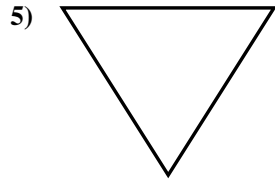
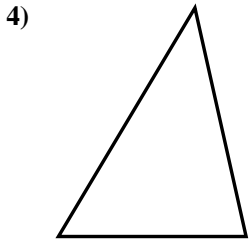


1. \_\_\_\_\_

2. \_\_\_\_\_

3. \_\_\_\_\_

4. \_\_\_\_\_

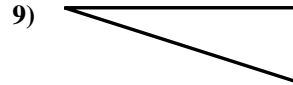
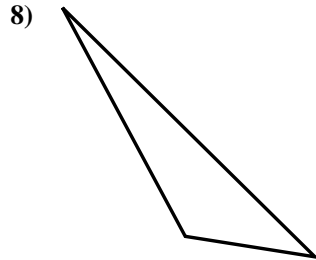
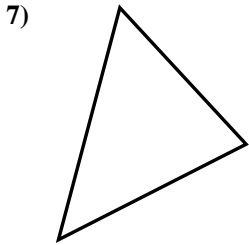


5. \_\_\_\_\_

6. \_\_\_\_\_

7. \_\_\_\_\_

8. \_\_\_\_\_

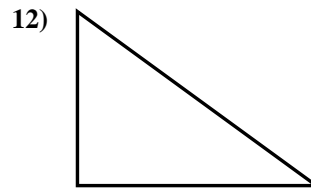
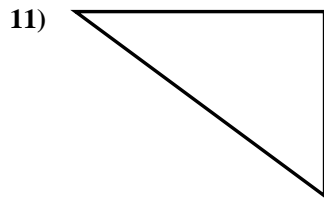
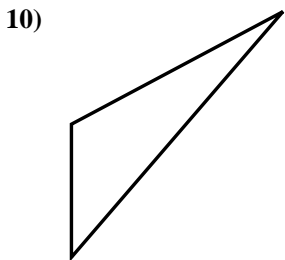


9. \_\_\_\_\_

10. \_\_\_\_\_

11. \_\_\_\_\_

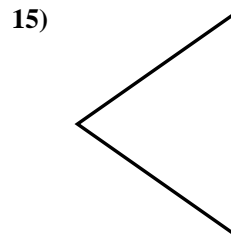
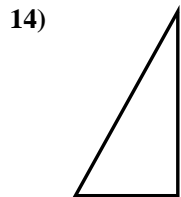
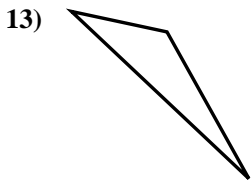
12. \_\_\_\_\_



13. \_\_\_\_\_

14. \_\_\_\_\_

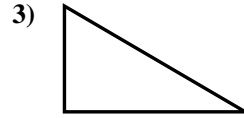
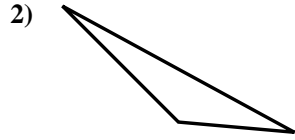
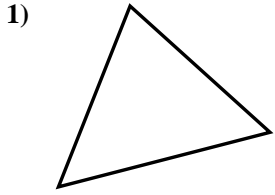
15. \_\_\_\_\_





Determine if the triangle shown is a right triangle (yes) or not (no).

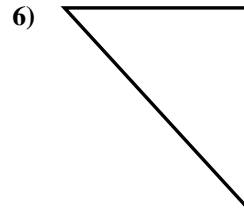
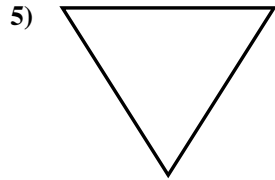
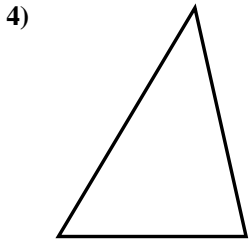
Answers



1. no

2. no

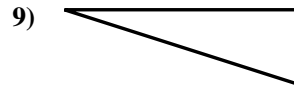
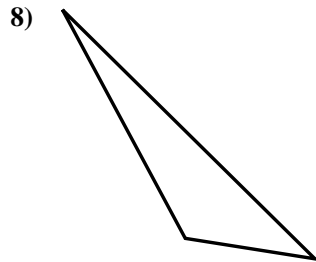
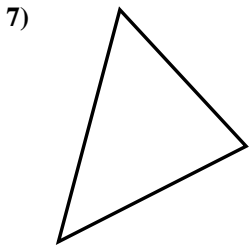
3. yes



4. no

5. no

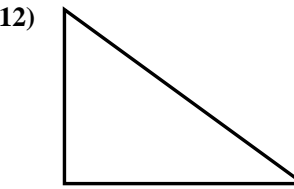
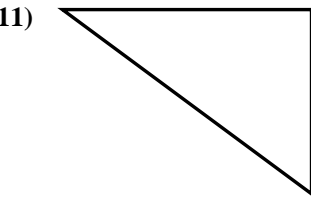
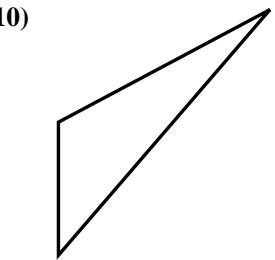
6. yes



7. no

8. no

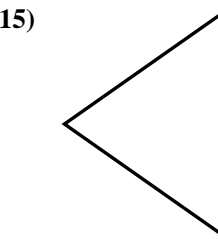
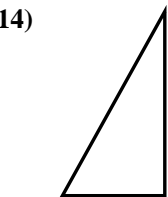
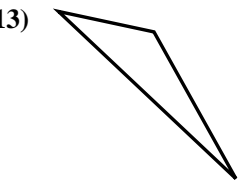
9. yes



10. no

11. yes

12. yes



13. no

14. yes

15. no