



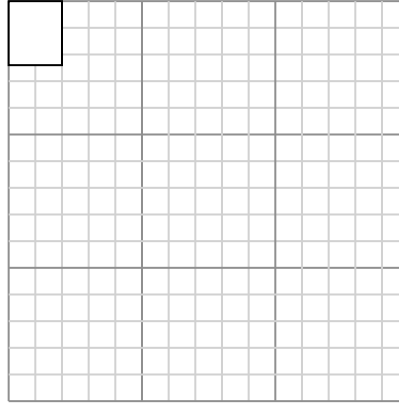
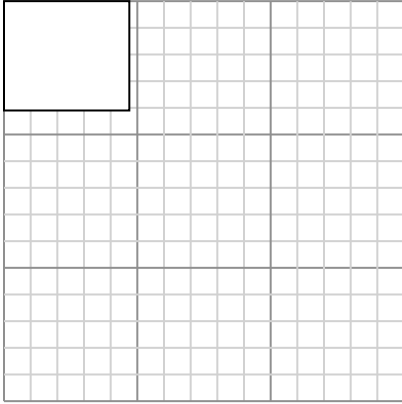
Draw each rectangle to the scale shown and determine the new dimensions.

Answers

- 1) The rectangle below has the dimensions:
 4.7×4.1

- 2) The rectangle below has the dimensions:
 2×2.4

1. _____



2. _____

Create another rectangle that is scaled to 9 times the size of the current rectangle.

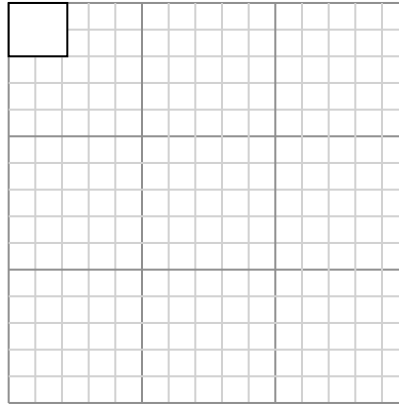
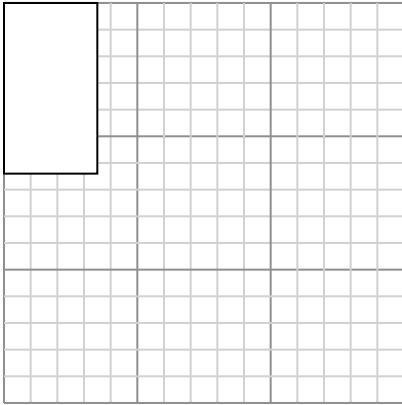
Create another rectangle that is scaled to 16 times the size of the current rectangle.

3. _____

- 3) The rectangle below has the dimensions:
 3.5×6.4

- 4) The rectangle below has the dimensions:
 2.2×2

4. _____



Create another rectangle that is scaled to 4 times the size of the current rectangle.

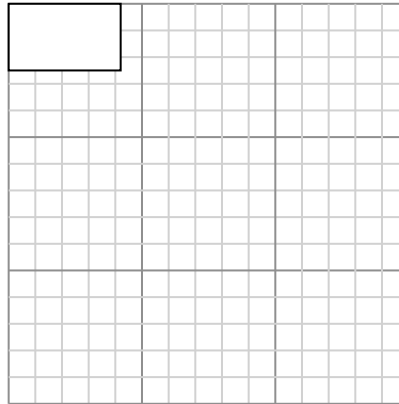
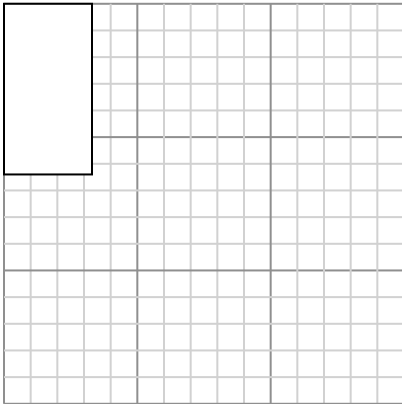
Create another rectangle that is scaled to 16 times the size of the current rectangle.

5. _____

- 5) The rectangle below has the dimensions:
 3.3×6.4

- 6) The rectangle below has the dimensions:
 4.2×2.5

6. _____



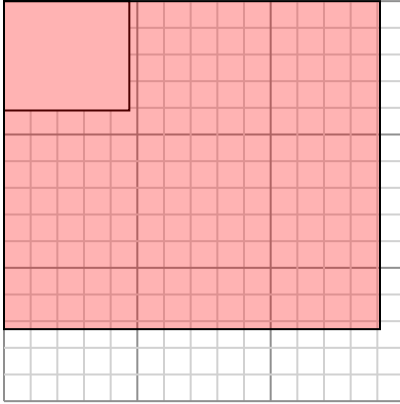
Create another rectangle that is scaled to 4 times the size of the current rectangle.

Create another rectangle that is scaled to 9 times the size of the current rectangle.



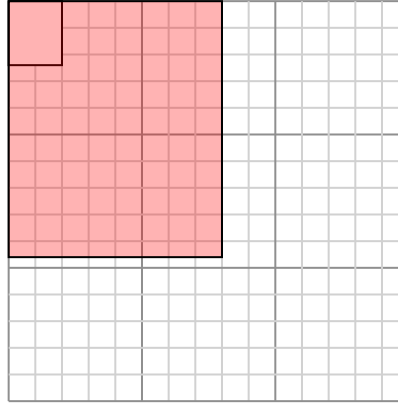
Draw each rectangle to the scale shown and determine the new dimensions.

- 1) The rectangle below has the dimensions:
 4.7×4.1



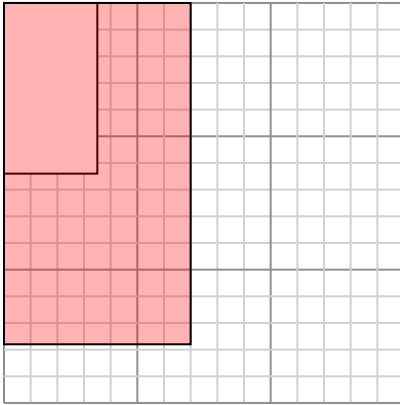
Create another rectangle that is scaled to 9 times the size of the current rectangle.

- 2) The rectangle below has the dimensions:
 2×2.4



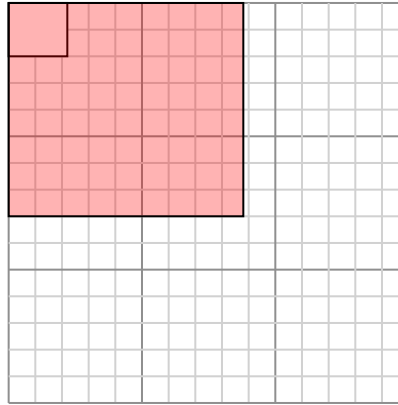
Create another rectangle that is scaled to 16 times the size of the current rectangle.

- 3) The rectangle below has the dimensions:
 3.5×6.4



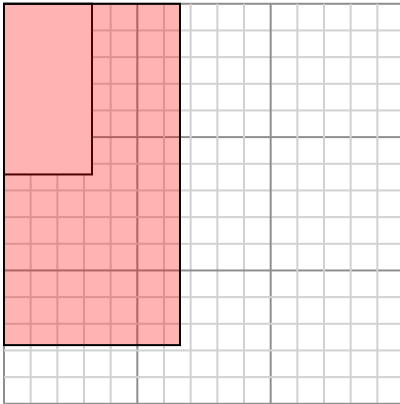
Create another rectangle that is scaled to 4 times the size of the current rectangle.

- 4) The rectangle below has the dimensions:
 2.2×2



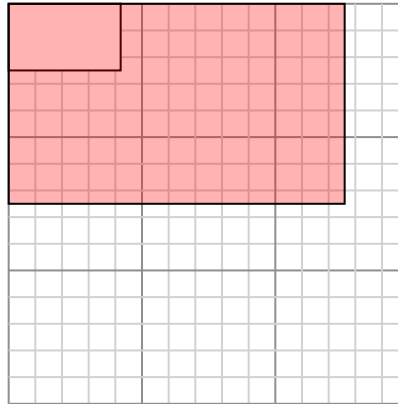
Create another rectangle that is scaled to 16 times the size of the current rectangle.

- 5) The rectangle below has the dimensions:
 3.3×6.4



Create another rectangle that is scaled to 4 times the size of the current rectangle.

- 6) The rectangle below has the dimensions:
 4.2×2.5



Create another rectangle that is scaled to 9 times the size of the current rectangle.

Answers

1. 14.1×12.3

2. 8×9.6

3. 7×12.8

4. 8.8×8

5. 6.6×12.8

6. 12.6×7.5