

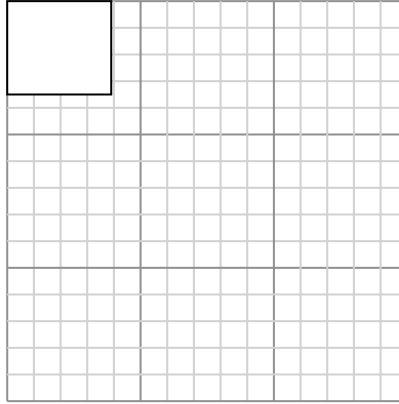
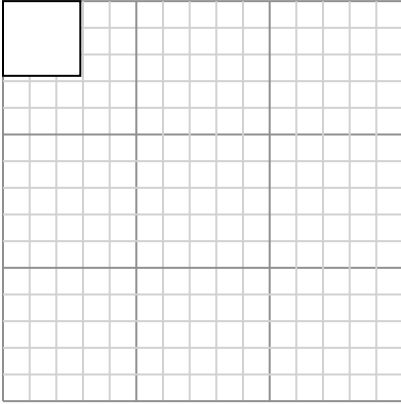


Draw each rectangle to the scale shown and determine the new dimensions.

Answers

- 1) The rectangle below has the dimensions:
 2.9×2.8

- 2) The rectangle below has the dimensions:
 3.9×3.5



1. _____

2. _____

3. _____

4. _____

5. _____

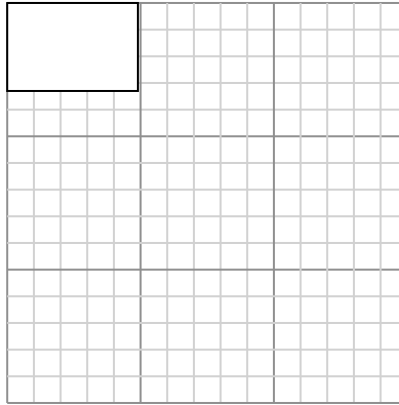
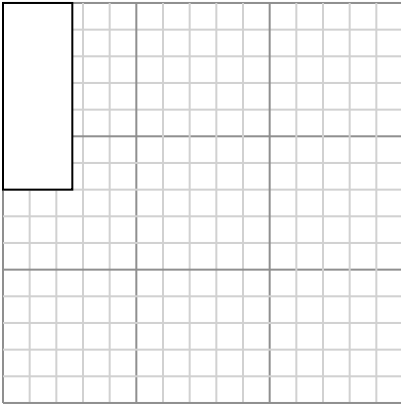
6. _____

Create another rectangle that is scaled to 16 times the size of the current rectangle.

Create another rectangle that is scaled to 9 times the size of the current rectangle.

- 3) The rectangle below has the dimensions:
 2.6×7

- 4) The rectangle below has the dimensions:
 4.9×3.3

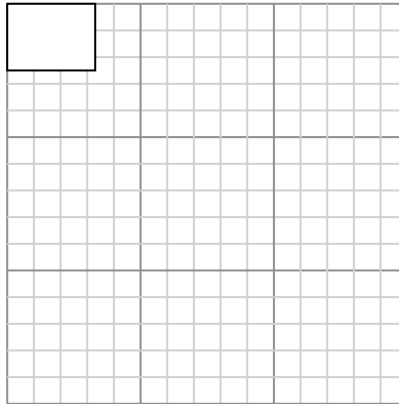
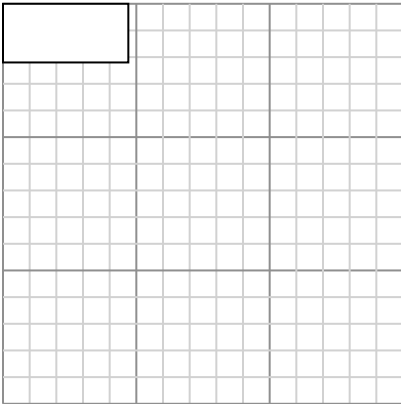


Create another rectangle that is scaled to 4 times the size of the current rectangle.

Create another rectangle that is scaled to 4 times the size of the current rectangle.

- 5) The rectangle below has the dimensions:
 4.7×2.2

- 6) The rectangle below has the dimensions:
 3.3×2.5



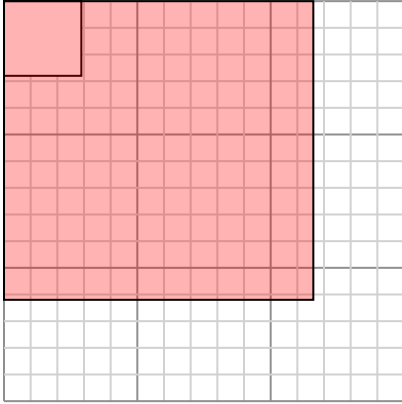
Create another rectangle that is scaled to 9 times the size of the current rectangle.

Create another rectangle that is scaled to 9 times the size of the current rectangle.



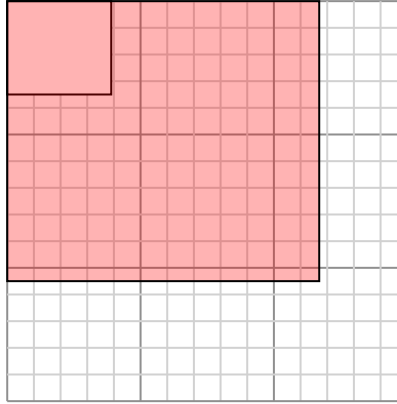
Draw each rectangle to the scale shown and determine the new dimensions.

- 1) The rectangle below has the dimensions:
 2.9×2.8



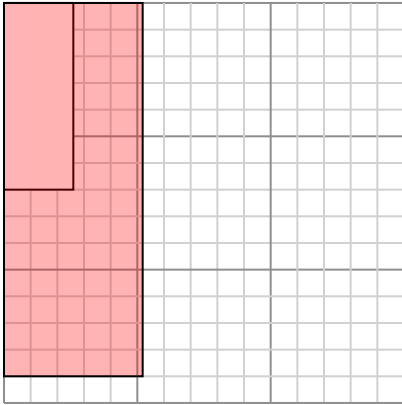
Create another rectangle that is scaled to 16 times the size of the current rectangle.

- 2) The rectangle below has the dimensions:
 3.9×3.5



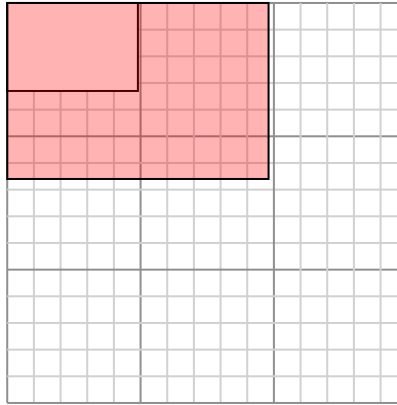
Create another rectangle that is scaled to 9 times the size of the current rectangle.

- 3) The rectangle below has the dimensions:
 2.6×7



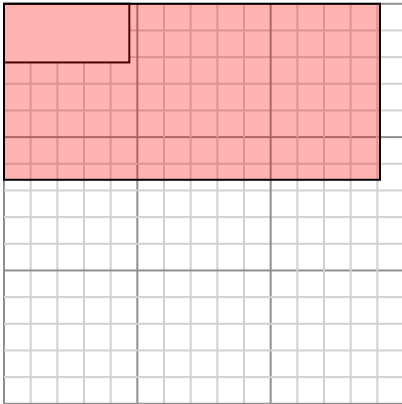
Create another rectangle that is scaled to 4 times the size of the current rectangle.

- 4) The rectangle below has the dimensions:
 4.9×3.3



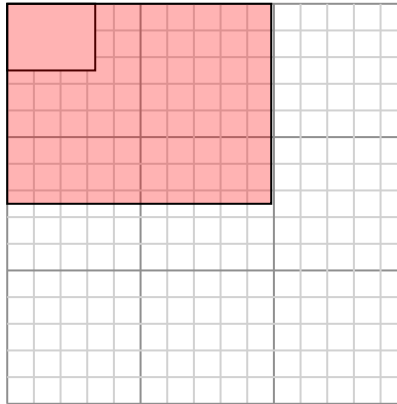
Create another rectangle that is scaled to 4 times the size of the current rectangle.

- 5) The rectangle below has the dimensions:
 4.7×2.2



Create another rectangle that is scaled to 9 times the size of the current rectangle.

- 6) The rectangle below has the dimensions:
 3.3×2.5



Create another rectangle that is scaled to 9 times the size of the current rectangle.

Answers

1. **11.6×11.2**

2. **11.7×10.5**

3. **5.2×14**

4. **9.8×6.6**

5. **14.1×6.6**

6. **9.9×7.5**