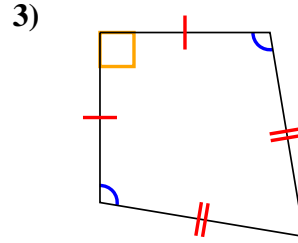
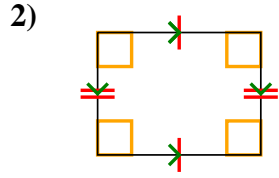
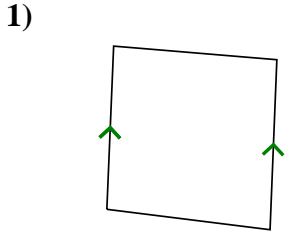




Determine if the shape shown is a Quadrilateral, Kite, Trapezoid, Parallelogram, Rhombus, Rectangle or Square (can be more than one).

Answers



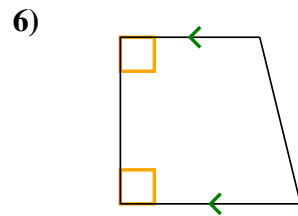
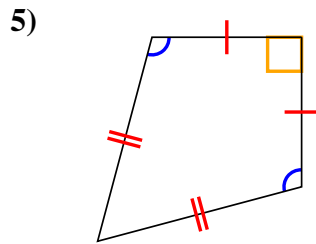
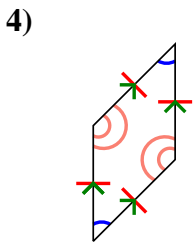
1. _____

2. _____

3. _____

4. _____

5. _____



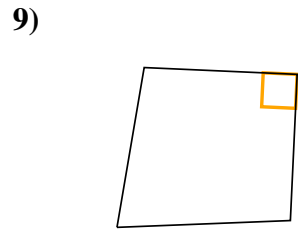
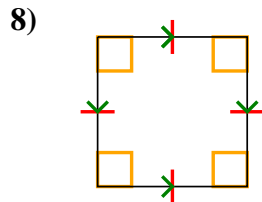
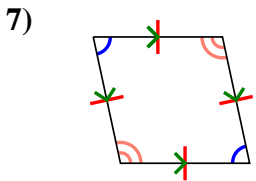
6. _____

7. _____

8. _____


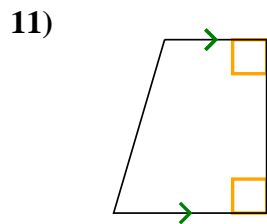
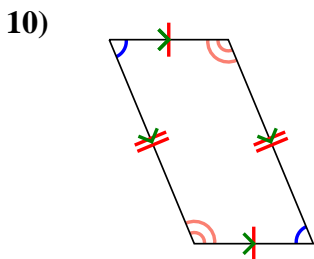
9. _____

10. _____



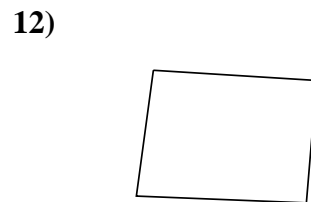
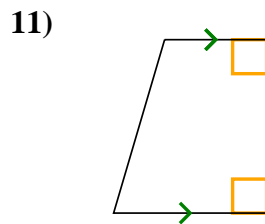
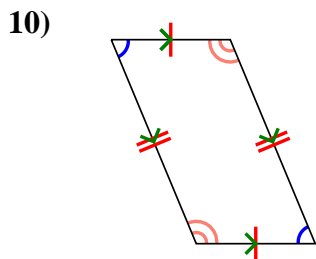
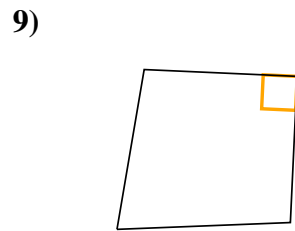
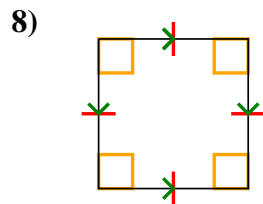
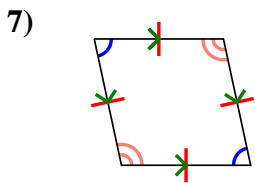
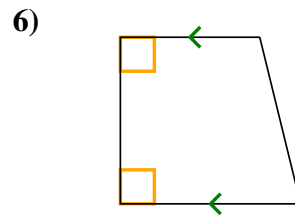
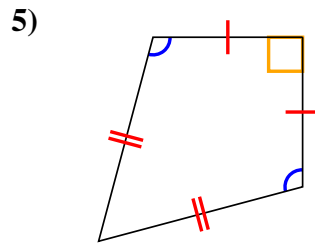
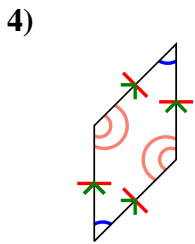
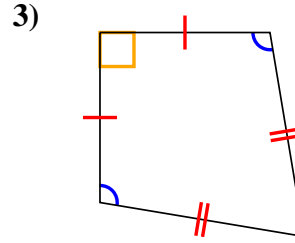
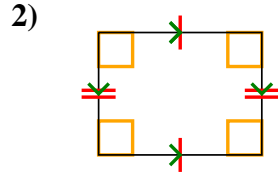
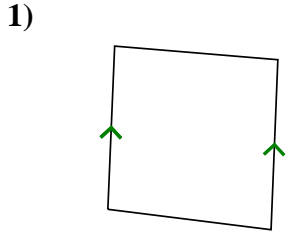
11. _____

12. _____





Determine if the shape shown is a Quadrilateral, Kite, Trapezoid, Parallelogram, Rhombus, Rectangle or Square (can be more than one).



Answers

1. Q,T

2. Q,P,R

3. Q,K

4. Q,P,H

5. Q,K

6. Q,T

7. Q,P,H

8. Q,P,H,R,S

9. Q

10. Q,P

11. Q,T

12. Q