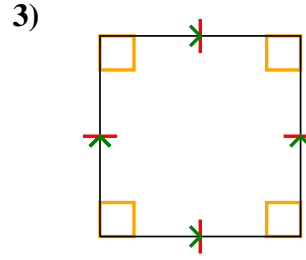
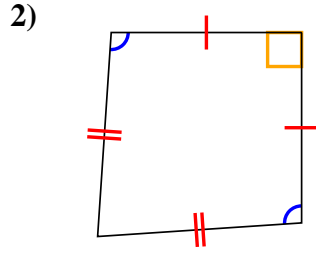
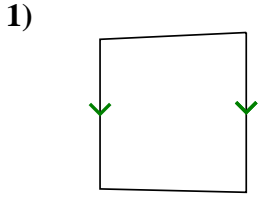




Determine if the shape shown is a Quadrilateral, Kite, Trapezoid, Parallelogram, Rhombus, Rectangle or Square (can be more than one).

Answers



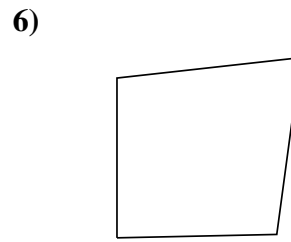
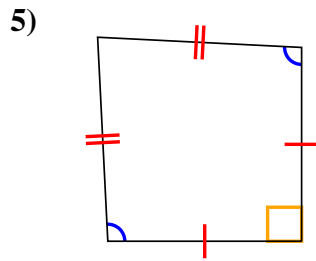
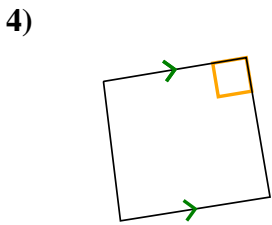
1. _____

2. _____

3. _____

4. _____

5. _____



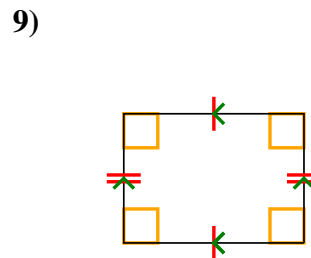
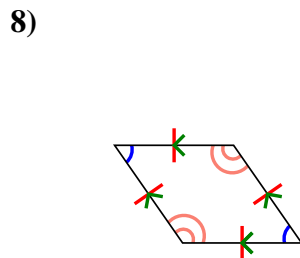
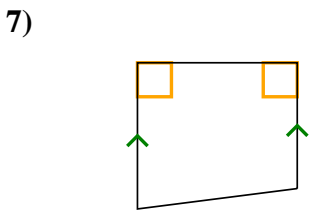
6. _____

7. _____

8. _____

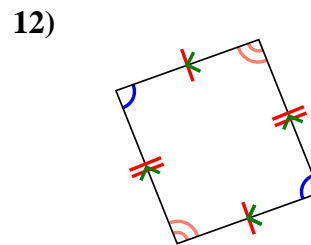
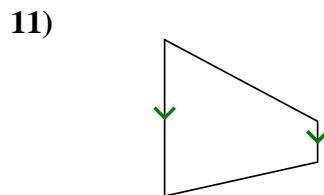
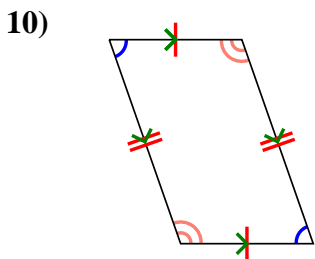
9. _____

10. _____



11. _____

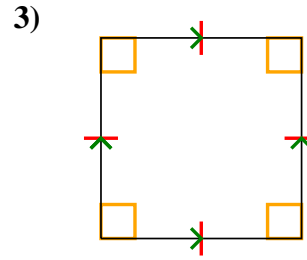
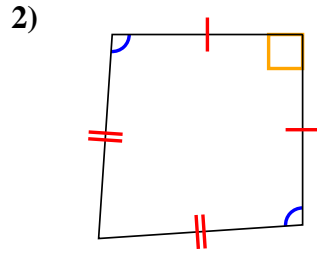
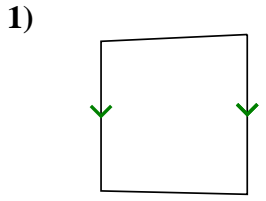
12. _____



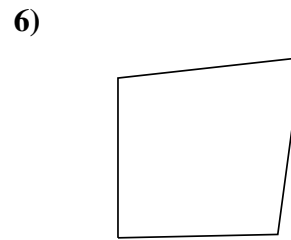
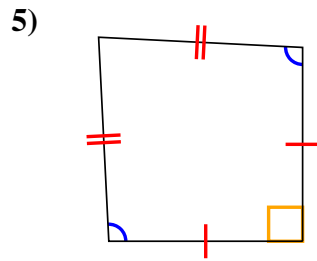
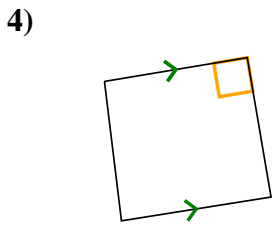


Determine if the shape shown is a Quadrilateral, Kite, Trapezoid, Parallelogram, Rhombus, Rectangle or Square (can be more than one).

Answers



1. Q,T



2. Q,K

3. Q,P,H,R,S

4. Q,T

5. Q,K

6. Q

7. Q,T

8. Q,P,H

9. Q,P,R

10. Q,P

11. Q,T

12. Q,P

