



Mark the location (approximate) on the numberline and then solve.

Answers

1) Round 1,491 to the nearest thousand.



1. _____

2) Round 867,315 to the nearest hundred.



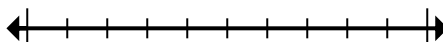
2. _____

3) Round 524 to the nearest hundred.



3. _____

4) Round 698 to the nearest hundred.



4. _____

5) Round 4,646,919 to the nearest hundred.



5. _____

6) Round 6,630,803 to the nearest thousand.



6. _____

7) Round 4,407,993 to the nearest hundred thousand.



7. _____

8) Round 83,368 to the nearest ten thousand.



8. _____

9) Round 5,665,526 to the nearest ten thousand.



9. _____

10) Round 1,299 to the nearest thousand.



10. _____

11) Round 448,098 to the nearest hundred thousand.



11. _____

12) Round 178,876 to the nearest ten thousand.



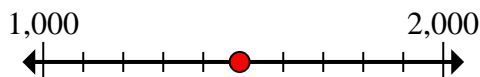
12. _____



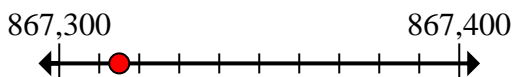
Mark the location (approximate) on the numberline and then solve.

Answers

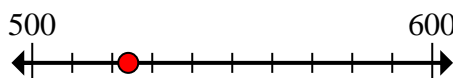
- 1) Round 1,491 to the nearest thousand.

1. 1,000

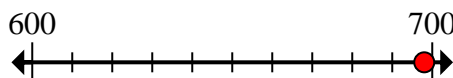
- 2) Round 867,315 to the nearest hundred.

2. 867,300

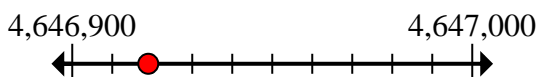
- 3) Round 524 to the nearest hundred.

3. 500

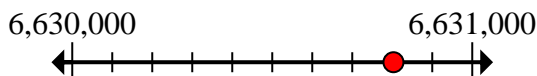
- 4) Round 698 to the nearest hundred.

4. 700

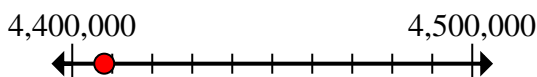
- 5) Round 4,646,919 to the nearest hundred.

5. 4,646,900

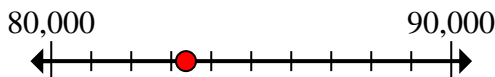
- 6) Round 6,630,803 to the nearest thousand.

6. 6,631,000

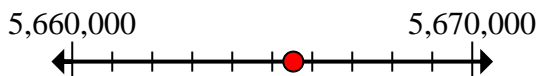
- 7) Round 4,407,993 to the nearest hundred thousand.

7. 4,400,000

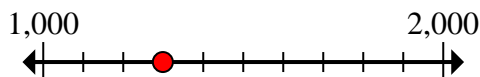
- 8) Round 83,368 to the nearest ten thousand.

8. 80,000

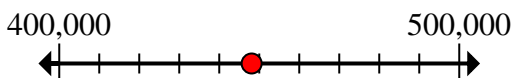
- 9) Round 5,665,526 to the nearest ten thousand.

9. 5,670,000

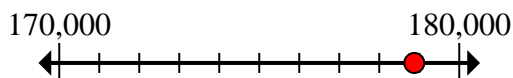
- 10) Round 1,299 to the nearest thousand.

10. 1,000

- 11) Round 448,098 to the nearest hundred thousand.

11. 400,000

- 12) Round 178,876 to the nearest ten thousand.

12. 180,000



Mark the location (approximate) on the numberline and then solve.

Answers

867,300

500

4,400,000

80,000

1,000

4,646,900

700

400,000

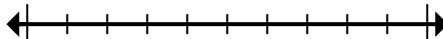
180,000

1,000

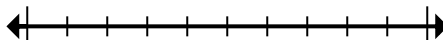
5,670,000

6,631,000

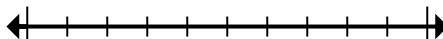
- 1) Round 1,491 to the nearest thousand.



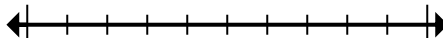
- 2) Round 867,315 to the nearest hundred.



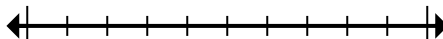
- 3) Round 524 to the nearest hundred.



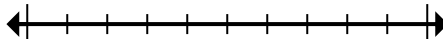
- 4) Round 698 to the nearest hundred.



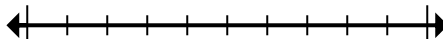
- 5) Round 4,646,919 to the nearest hundred.



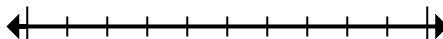
- 6) Round 6,630,803 to the nearest thousand.



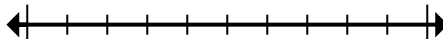
- 7) Round 4,407,993 to the nearest hundred thousand.



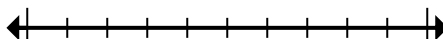
- 8) Round 83,368 to the nearest ten thousand.



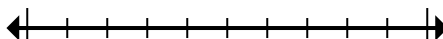
- 9) Round 5,665,526 to the nearest ten thousand.



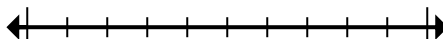
- 10) Round 1,299 to the nearest thousand.



- 11) Round 448,098 to the nearest hundred thousand.



- 12) Round 178,876 to the nearest ten thousand.



1. _____
2. _____
3. _____
4. _____
5. _____
6. _____
7. _____
8. _____
9. _____
10. _____
11. _____
12. _____