



Use the numberlines to round each number to the nearest 100.

Ex)

44,027



Answers

Ex. 44,000

1)

5,227



1. _____

2)

8,920



2. _____

3)

679



3. _____

4)

872



4. _____

5)

991



5. _____

6)

47,822



6. _____

7)

2,586



7. _____

8)

36,539



8. _____

9)

6,199



9. _____

10)

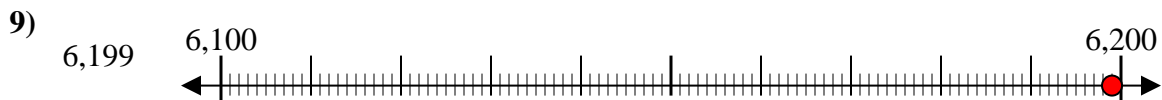
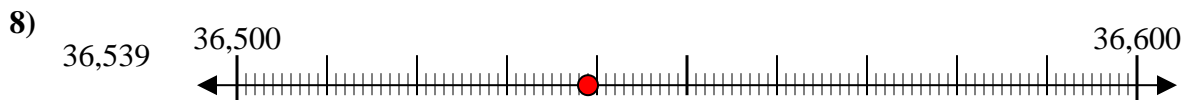
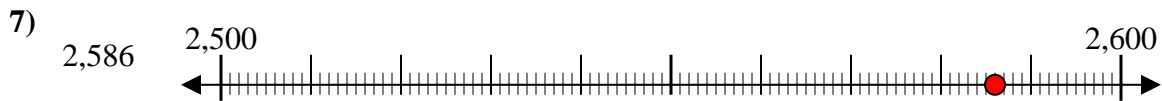
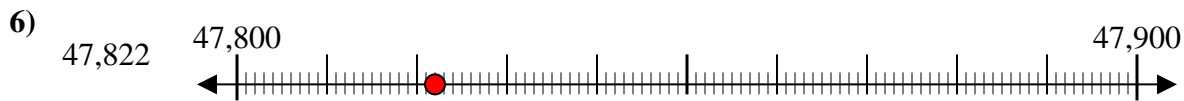
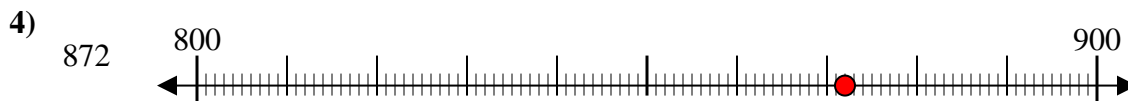
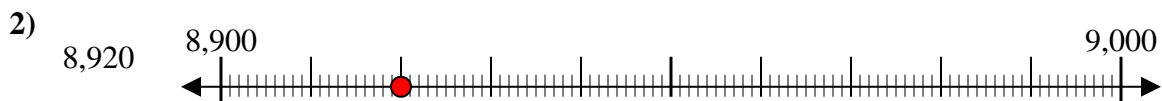
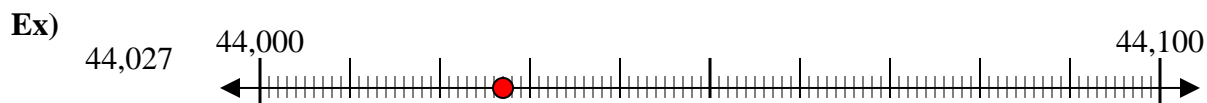
161



10. _____



Use the numberlines to round each number to the nearest 100.



Answers

Ex. 44,000

1. 5,200

2. 8,900

3. 700

4. 900

5. 1,000

6. 47,800

7. 2,600

8. 36,500

9. 6,200

10. 200