



Use the numberlines to round each number to the nearest 100.

Answers

Ex)

612



Ex. 600

1)

9,223



1. \_\_\_\_\_

2)

17,922



2. \_\_\_\_\_

3)

87,465



3. \_\_\_\_\_

4)

653



4. \_\_\_\_\_

5)

3,616



5. \_\_\_\_\_

6)

6,677



6. \_\_\_\_\_

7)

22,598



7. \_\_\_\_\_

8)

1,241



8. \_\_\_\_\_

9)

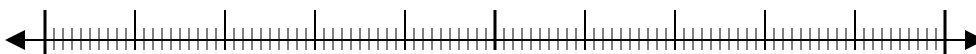
960



9. \_\_\_\_\_

10)

873

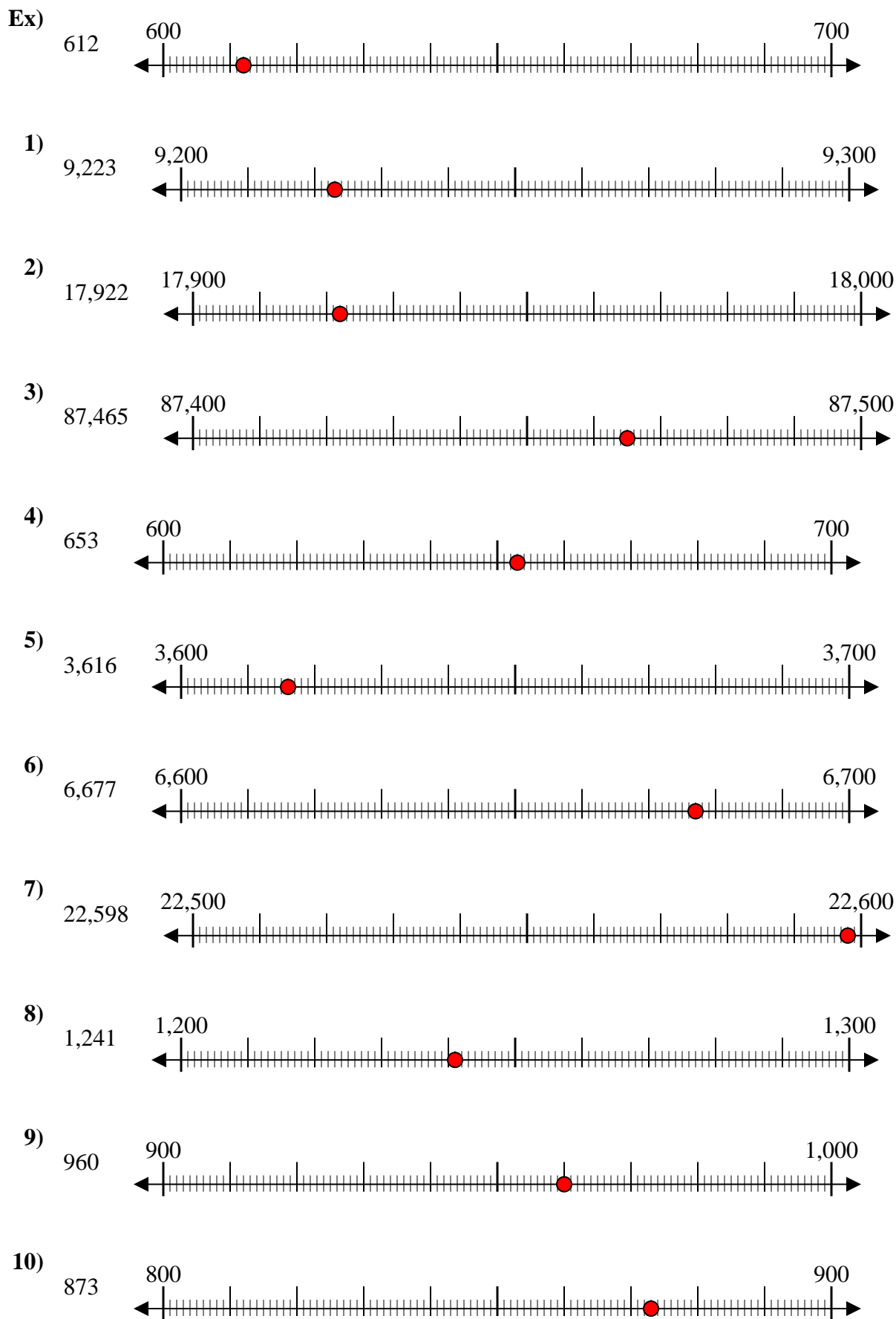


10. \_\_\_\_\_

10. \_\_\_\_\_



Use the numberlines to round each number to the nearest 100.



Answers

- Ex. 600
1. 9,200
2. 17,900
3. 87,500
4. 700
5. 3,600
6. 6,700
7. 22,600
8. 1,200
9. 1,000
10. 900



Use the numberlines to round each number to the nearest 100.

Ex)

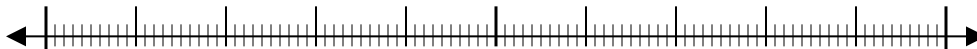
356



Ex. 400

1)

1,360



1. \_\_\_\_\_

2)

7,216



2. \_\_\_\_\_

3)

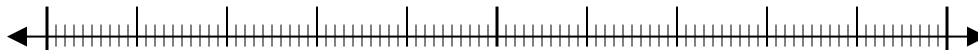
51,669



3. \_\_\_\_\_

4)

670



4. \_\_\_\_\_

5)

171



5. \_\_\_\_\_

6)

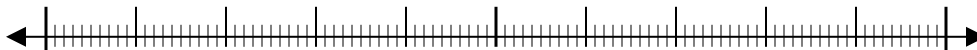
80,458



6. \_\_\_\_\_

7)

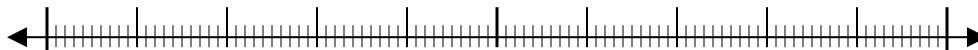
9,425



7. \_\_\_\_\_

8)

616



8. \_\_\_\_\_

9)

88,299



9. \_\_\_\_\_

10)

5,076

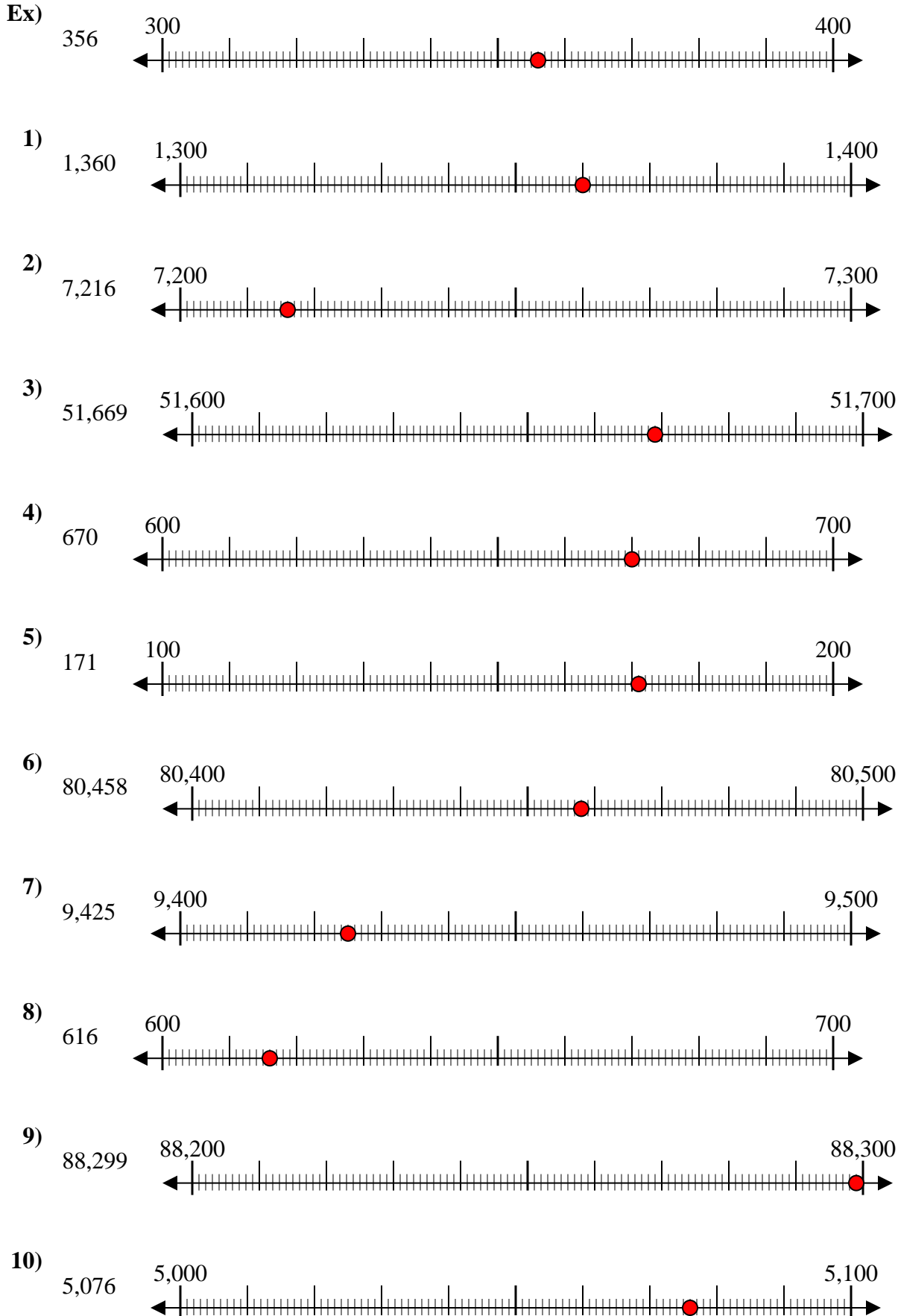


10. \_\_\_\_\_

Answers



Use the numberlines to round each number to the nearest 100.



Answers

- Ex. 400
1. 1,400
2. 7,200
3. 51,700
4. 700
5. 200
6. 80,500
7. 9,400
8. 600
9. 88,300
10. 5,100



Use the numberlines to round each number to the nearest 100.

Ex)

908



Ex. 900

1)

257



1. \_\_\_\_\_

2)

8,566



2. \_\_\_\_\_

3)

18,478



3. \_\_\_\_\_

4)

84,766



4. \_\_\_\_\_

5)

991



5. \_\_\_\_\_

6)

76,319



6. \_\_\_\_\_

7)

759



7. \_\_\_\_\_

8)

4,490



8. \_\_\_\_\_

9)

70,699



9. \_\_\_\_\_

10)

1,399



10. \_\_\_\_\_

Answers

Ex. 900

1. \_\_\_\_\_

2. \_\_\_\_\_

3. \_\_\_\_\_

4. \_\_\_\_\_

5. \_\_\_\_\_

6. \_\_\_\_\_

7. \_\_\_\_\_

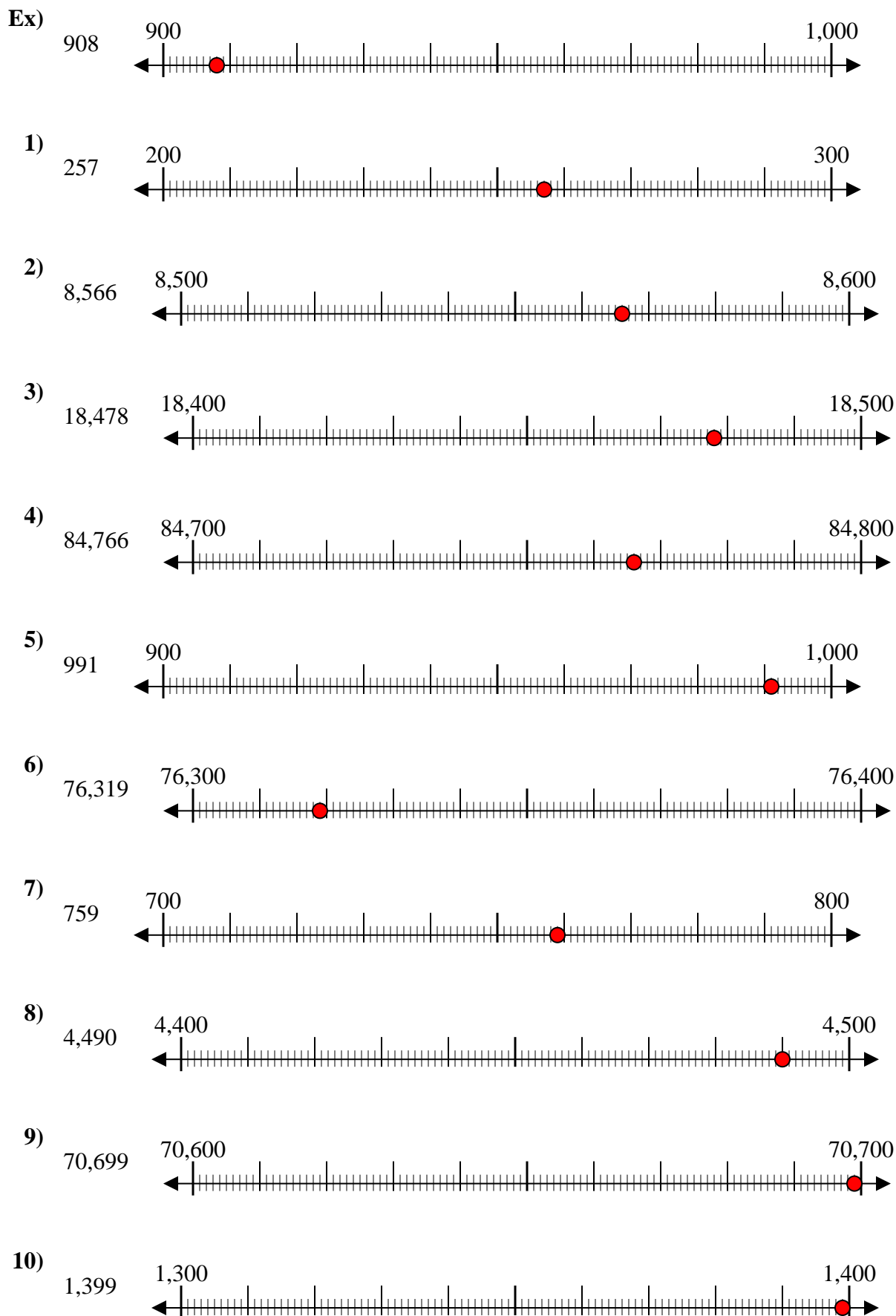
8. \_\_\_\_\_

9. \_\_\_\_\_

10. \_\_\_\_\_



Use the numberlines to round each number to the nearest 100.



Answers

- Ex. 900
1. 300
2. 8,600
3. 18,500
4. 84,800
5. 1,000
6. 76,300
7. 800
8. 4,500
9. 70,700
10. 1,400



Use the numberlines to round each number to the nearest 100.

Ex)

4,410



Ex. 4,400

1)

853



1. \_\_\_\_\_

2)

783



2. \_\_\_\_\_

3)

9,697



3. \_\_\_\_\_

4)

8,980



4. \_\_\_\_\_

5)

569



5. \_\_\_\_\_

6)

9,924



6. \_\_\_\_\_

7)

99,310



7. \_\_\_\_\_

8)

90,005



8. \_\_\_\_\_

9)

17,192



9. \_\_\_\_\_

10)

60,453



10. \_\_\_\_\_

Answers

Ex. 4,400

1. \_\_\_\_\_

2. \_\_\_\_\_

3. \_\_\_\_\_

4. \_\_\_\_\_

5. \_\_\_\_\_

6. \_\_\_\_\_

7. \_\_\_\_\_

8. \_\_\_\_\_

9. \_\_\_\_\_

10. \_\_\_\_\_



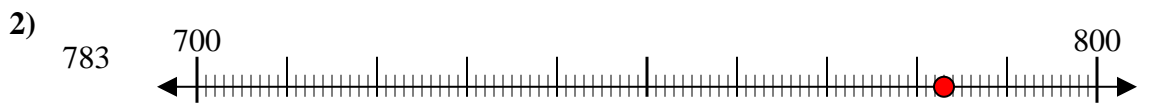
Use the numberlines to round each number to the nearest 100.



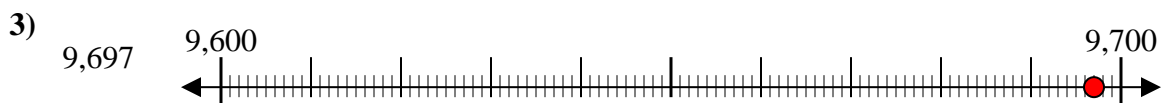
Answers  
Ex. **4,400**



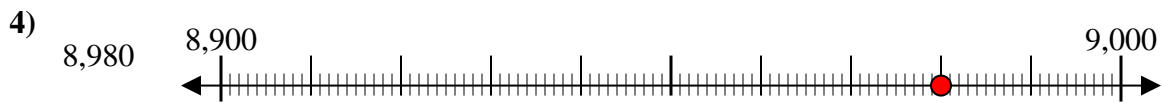
1. **900**



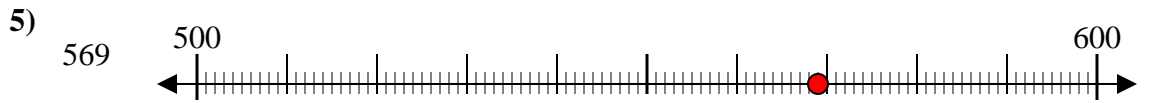
2. **800**



3. **9,700**



4. **9,000**



5. **600**



6. **9,900**



7. **99,300**



8. **90,000**



9. **17,200**



10. **60,500**





Use the numberlines to round each number to the nearest 100.

Ex)

1,224



Ex. 1,200

1)

9,937



1. \_\_\_\_\_

2)

81,895



2. \_\_\_\_\_

3)

791



3. \_\_\_\_\_

4)

3,821



4. \_\_\_\_\_

5)

216



5. \_\_\_\_\_

6)

45,078



6. \_\_\_\_\_

7)

21,436



7. \_\_\_\_\_

8)

85,063



8. \_\_\_\_\_

9)

232



9. \_\_\_\_\_

10)

608

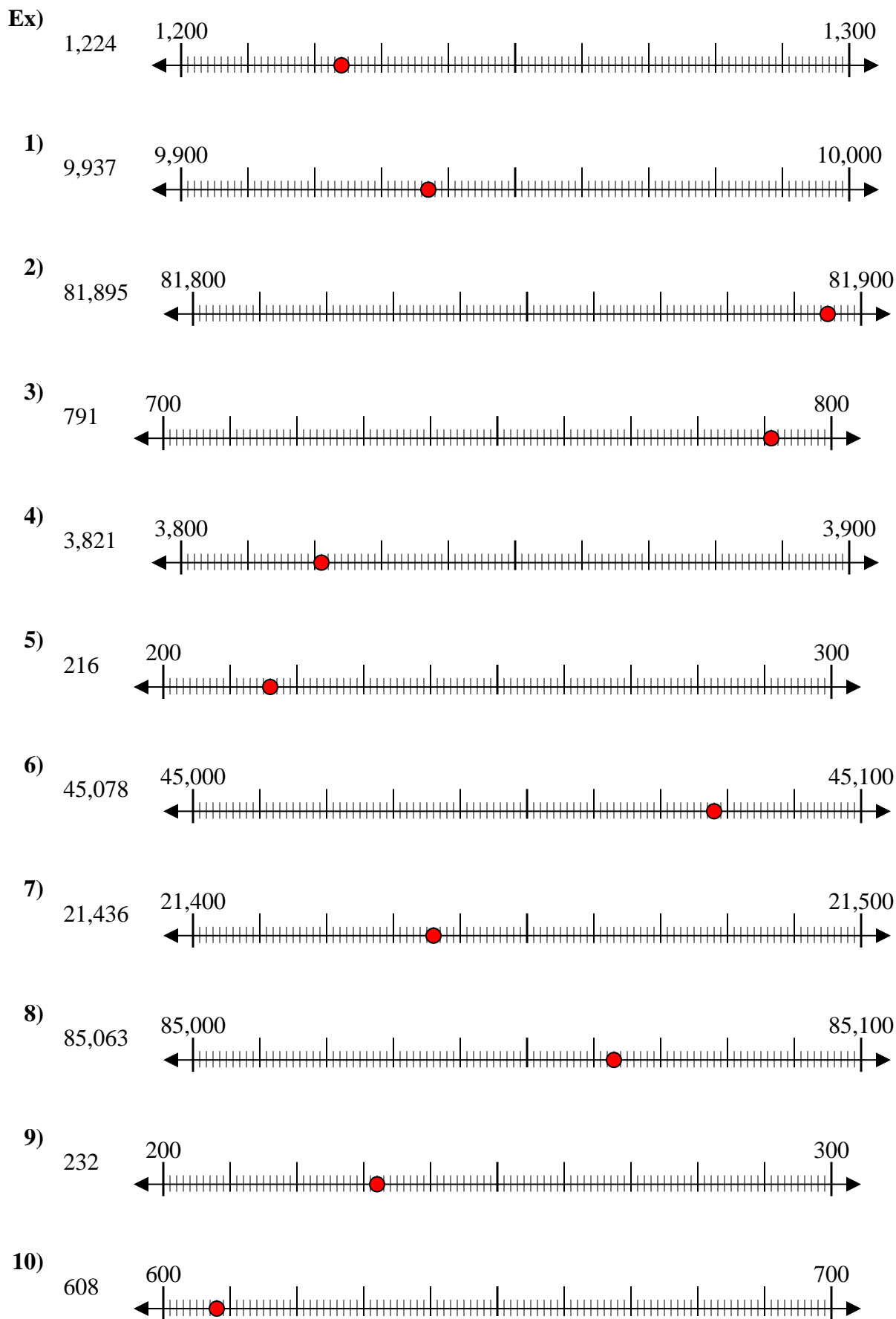


10. \_\_\_\_\_

Answers



Use the numberlines to round each number to the nearest 100.



Answers

- Ex. 1,200
1. 9,900
2. 81,900
3. 800
4. 3,800
5. 200
6. 45,100
7. 21,400
8. 85,100
9. 200
10. 600



Use the numberlines to round each number to the nearest 100.

Ex)

25,932



Ex. 25,900

1)

28,551



1. \_\_\_\_\_

2)

854



2. \_\_\_\_\_

3)

831



3. \_\_\_\_\_

4)

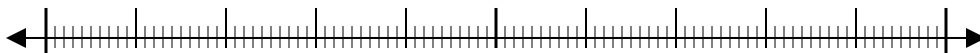
274



4. \_\_\_\_\_

5)

12,793



5. \_\_\_\_\_

6)

5,558



6. \_\_\_\_\_

7)

5,688



7. \_\_\_\_\_

8)

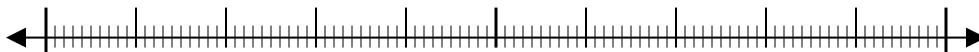
134



8. \_\_\_\_\_

9)

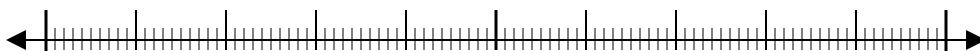
9,335



9. \_\_\_\_\_

10)

36,045



10. \_\_\_\_\_

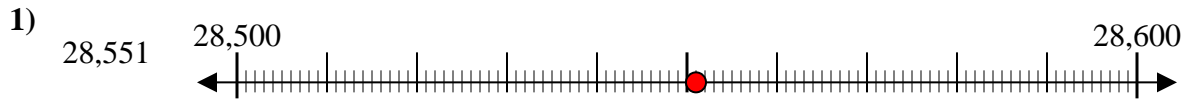
Answers



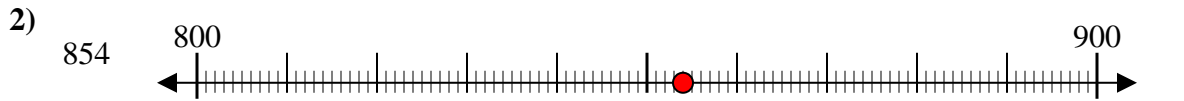
Use the numberlines to round each number to the nearest 100.



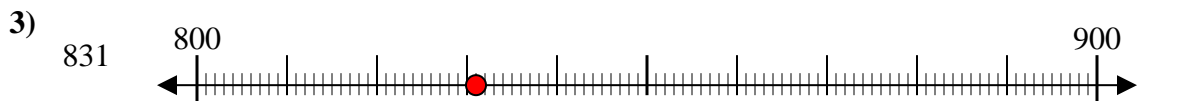
Answers  
Ex. 25,900



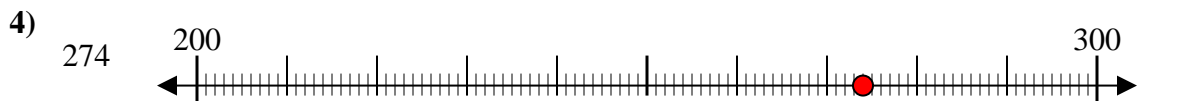
1. 28,600



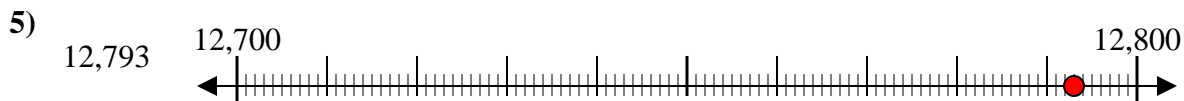
2. 900



3. 800



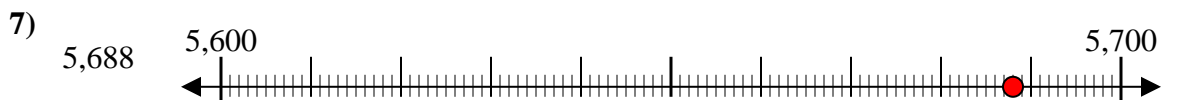
4. 300



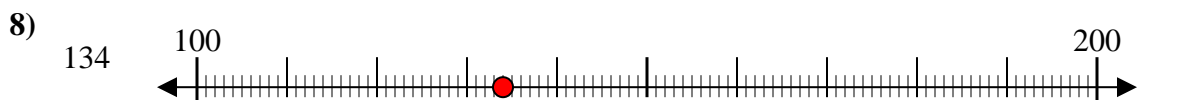
5. 12,800



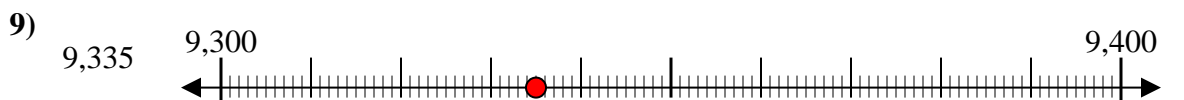
6. 5,600



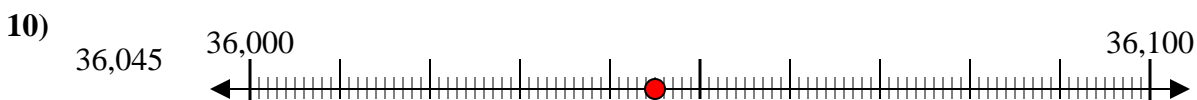
7. 5,700



8. 100



9. 9,300



10. 36,000



Use the numberlines to round each number to the nearest 100.

Answers

Ex)

803



Ex. 800

1)

589



1. \_\_\_\_\_

2)

35,102



2. \_\_\_\_\_

3)

6,126



3. \_\_\_\_\_

4)

5,531



4. \_\_\_\_\_

5)

5,313



5. \_\_\_\_\_

6)

951



6. \_\_\_\_\_

7)

8,816



7. \_\_\_\_\_

8)

152



8. \_\_\_\_\_

9)

62,481



9. \_\_\_\_\_

10)

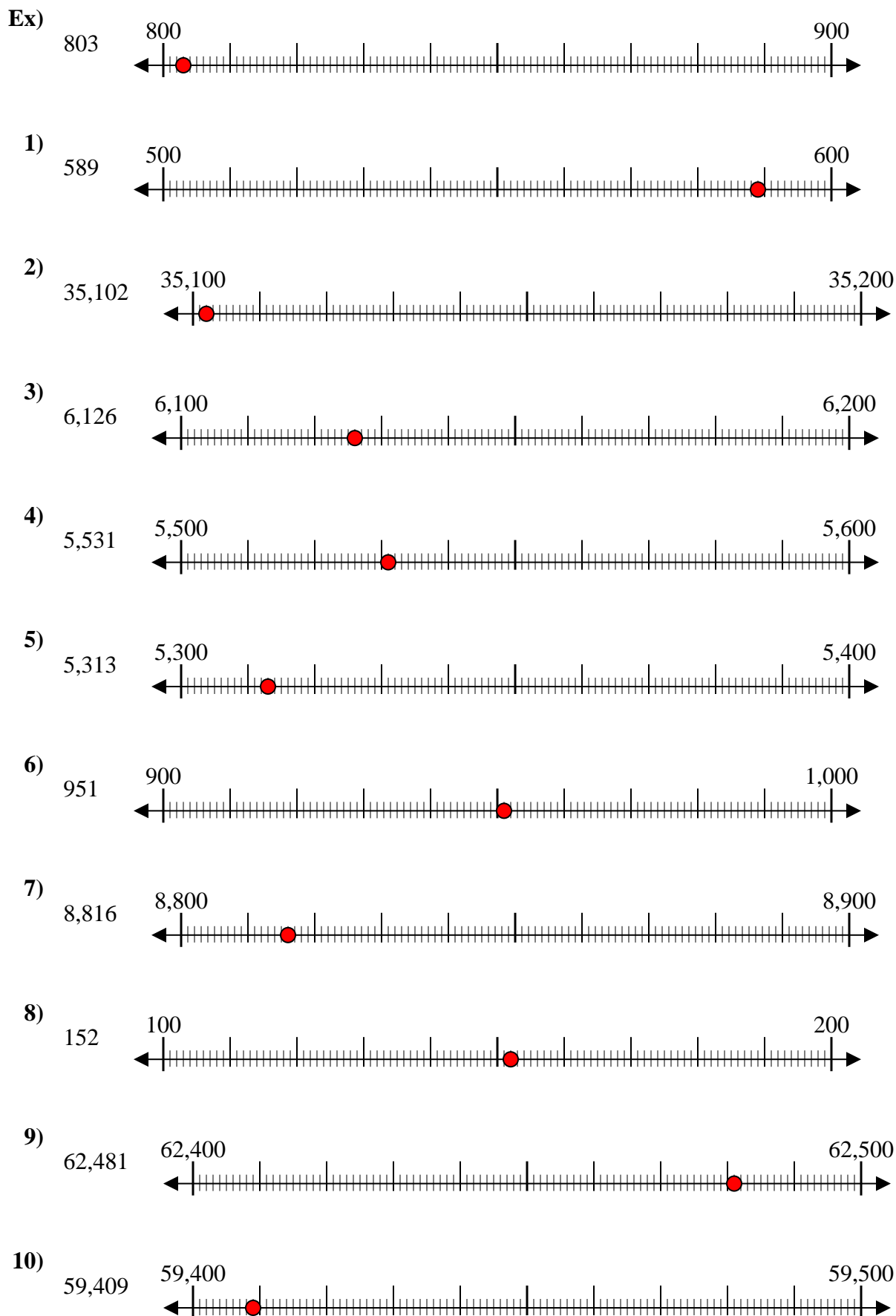
59,409



10. \_\_\_\_\_



Use the numberlines to round each number to the nearest 100.



Answers

Ex. 800

1. 600

2. 35,100

3. 6,100

4. 5,500

5. 5,300

6. 1,000

7. 8,800

8. 200

9. 62,500

10. 59,400



Use the numberlines to round each number to the nearest 100.

Ex)

842



Answers

Ex. 800

1)

777



1. \_\_\_\_\_

2)

395



2. \_\_\_\_\_

3)

856



3. \_\_\_\_\_

4)

7,693



4. \_\_\_\_\_

5)

22,440



5. \_\_\_\_\_

6)

52,709



6. \_\_\_\_\_

7)

5,550



7. \_\_\_\_\_

8)

6,348



8. \_\_\_\_\_

9)

76,807



9. \_\_\_\_\_

10)

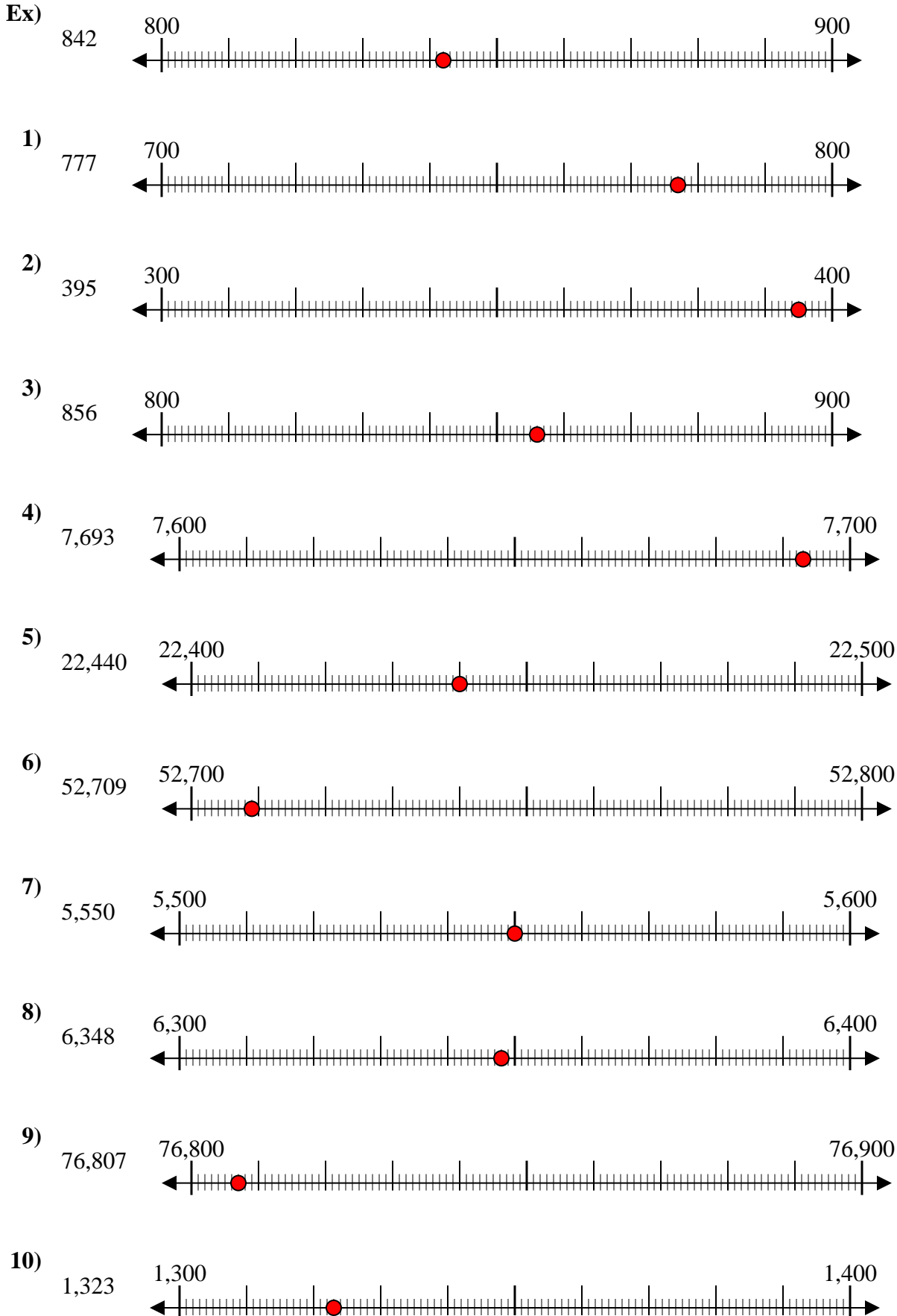
1,323



10. \_\_\_\_\_



Use the numberlines to round each number to the nearest 100.



Answers

- Ex. 800
1. 800
2. 400
3. 900
4. 7,700
5. 22,400
6. 52,700
7. 5,600
8. 6,300
9. 76,800
10. 1,300





Use the numberlines to round each number to the nearest 100.

Ex)

22,128



Ex. 22,100

1)

7,798



1. \_\_\_\_\_

2)

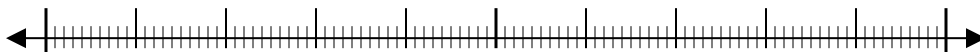
73,791



2. \_\_\_\_\_

3)

48,807



3. \_\_\_\_\_

4)

1,381



4. \_\_\_\_\_

5)

746



5. \_\_\_\_\_

6)

140



6. \_\_\_\_\_

7)

904



7. \_\_\_\_\_

8)

93,445



8. \_\_\_\_\_

9)

4,176



9. \_\_\_\_\_

10)

369

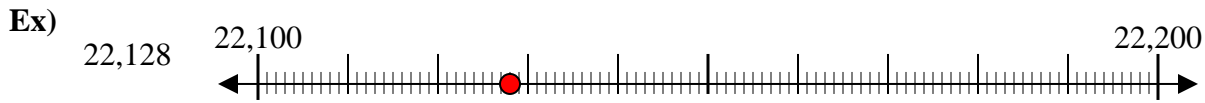


10. \_\_\_\_\_

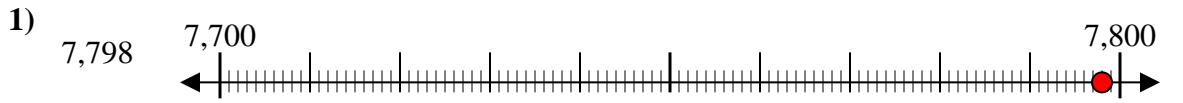
Answers



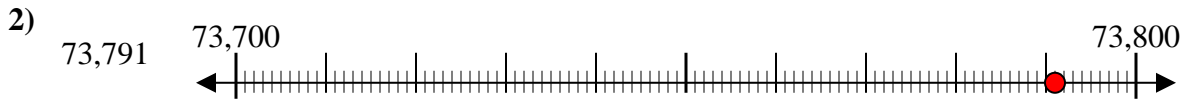
Use the numberlines to round each number to the nearest 100.



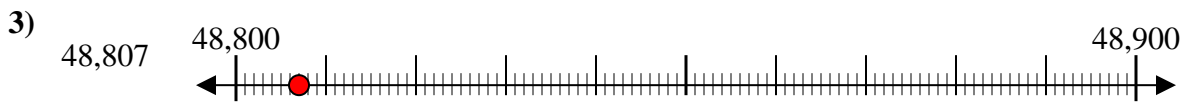
Answers  
Ex. 22,100



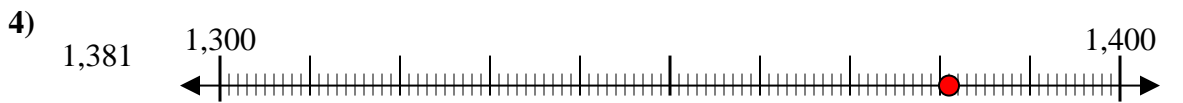
1. 7,800



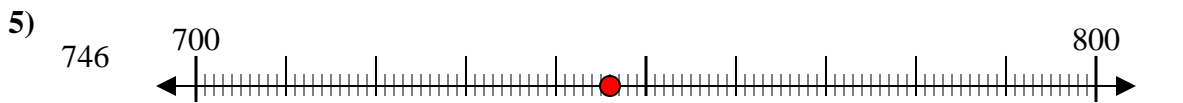
2. 73,800



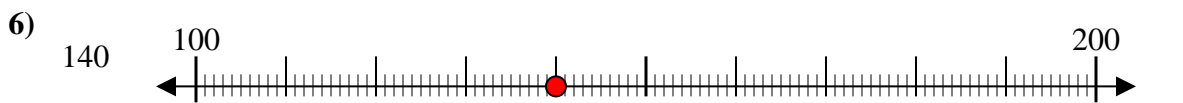
3. 48,800



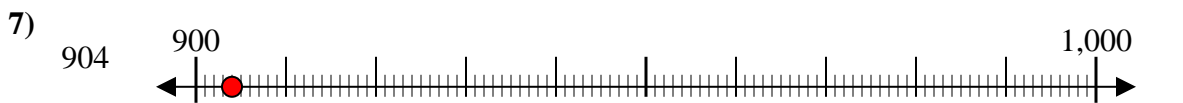
4. 1,400



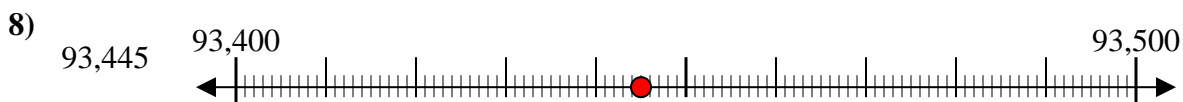
5. 700



6. 100



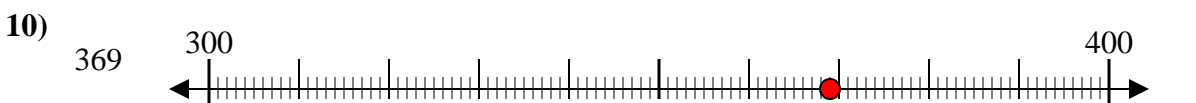
7. 900



8. 93,400



9. 4,200



10. 400



Use the numberlines to round each number to the nearest 100.

Ex)

4,028



Ex. 4,000

1)

905



1. \_\_\_\_\_

2)

4,915



2. \_\_\_\_\_

3)

984



3. \_\_\_\_\_

4)

6,410



4. \_\_\_\_\_

5)

43,902



5. \_\_\_\_\_

6)

20,088



6. \_\_\_\_\_

7)

59,370



7. \_\_\_\_\_

8)

815



8. \_\_\_\_\_

9)

38,901



9. \_\_\_\_\_

10)

4,908



10. \_\_\_\_\_

Answers

Ex. 4,000

1. \_\_\_\_\_

2. \_\_\_\_\_

3. \_\_\_\_\_

4. \_\_\_\_\_

5. \_\_\_\_\_

6. \_\_\_\_\_

7. \_\_\_\_\_

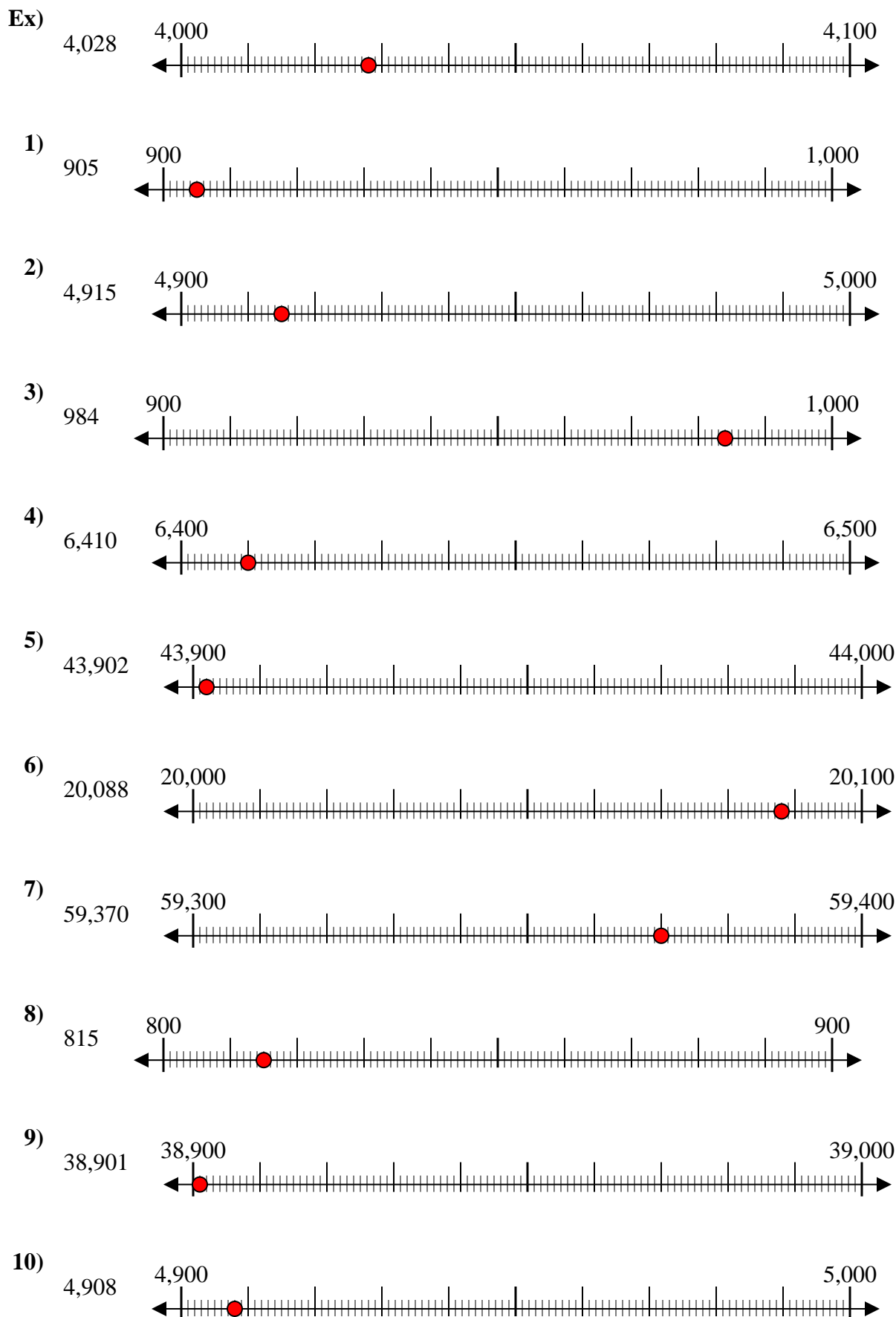
8. \_\_\_\_\_

9. \_\_\_\_\_

10. \_\_\_\_\_



Use the numberlines to round each number to the nearest 100.



Answers

- Ex. 4,000
1. 900
2. 4,900
3. 1,000
4. 6,400
5. 43,900
6. 20,100
7. 59,400
8. 800
9. 38,900
10. 4,900