



Use the double numberline to solve the problems.

Answers

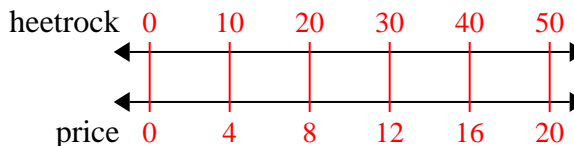
- 1) A builder could get 10 sheets of sheetrock for \$4. If he bought 50 sheets, how much money would he have spent?
- heetrock
←————→
price
←————→
- 2) A store had a sale where you could get 5 bags of cashews for \$8. If you wanted to buy 40 bags, how much would it cost?
- cashews
←————→
price
←————→
- 3) On her MP3 player for every 2 pop song Gwen had she also had 8 country song. If she has 18 pop songs on her MP3 player, how many country songs does she have?
- pop
←————→
country
←————→
- 4) For every 8 cans Adam collected for recycling he earned 9 cents. After he collected 72 cans, how much money would he have earned?
- cans
←————→
money
←————→
- 5) A box of candy had 10 cherry pieces for every 9 lemon pieces. If the box had 63 lemon pieces, how many cherry pieces would there be?
- lemon
←————→
cherry
←————→
- 6) A sloppy joe restaurant gave 4 napkins for every 9 items ordered. If someone bought 63 items, how many napkins should they get?
- item
←————→
napkins
←————→
- 7) In a video game for every 5 enemies defeat, you earned 8 points. If you defeated 30 enemies, how many points would you have earned?
- enemies
←————→
points
←————→
- 8) At a school fundraiser for every 2 boxes of chocolate sold you earn 9 points. If you were to sell 4 boxes, how many points would you have earned?
- boxes
←————→
points
←————→
1. _____
2. _____
3. _____
4. _____
5. _____
6. _____
7. _____
8. _____



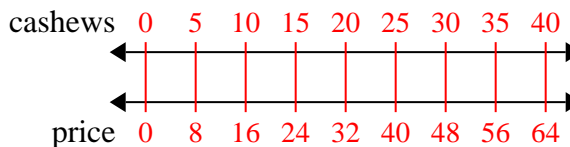
Use the double numberline to solve the problems.

Answers

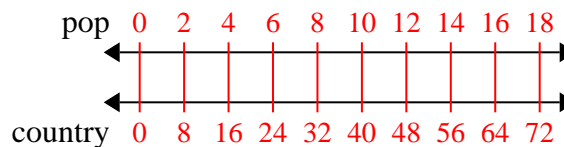
- 1) A builder could get 10 sheets of sheetrock for \$4. If he bought 50 sheets, how much money would he have spent?

1. 20

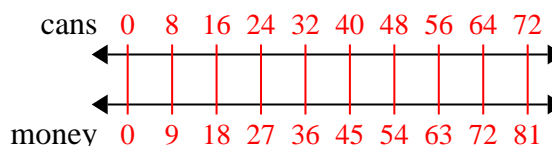
- 2) A store had a sale where you could get 5 bags of cashews for \$8. If you wanted to buy 40 bags, how much would it cost?

2. 643. 72

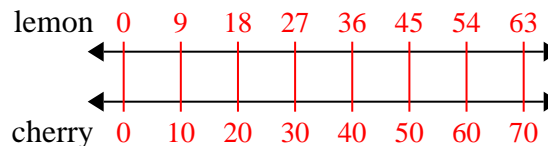
- 3) On her MP3 player for every 2 pop song Gwen had she also had 8 country song. If she has 18 pop songs on her MP3 player, how many country songs does she have?

4. 815. 706. 287. 48

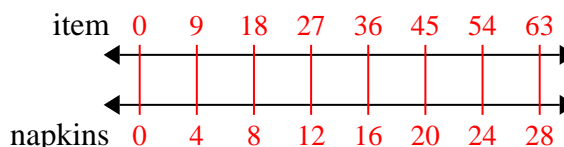
- 4) For every 8 cans Adam collected for recycling he earned 9 cents. After he collected 72 cans, how much money would he have earned?

8. 18

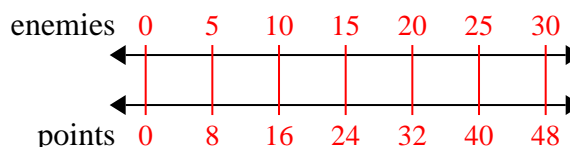
- 5) A box of candy had 10 cherry pieces for every 9 lemon pieces. If the box had 63 lemon pieces, how many cherry pieces would there be?



- 6) A sloppy joe restaurant gave 4 napkins for every 9 items ordered. If someone bought 63 items, how many napkins should they get?



- 7) In a video game for every 5 enemies defeat, you earned 8 points. If you defeated 30 enemies, how many points would you have earned?



- 8) At a school fundraiser for every 2 boxes of chocolate sold you earn 9 points. If you were to sell 4 boxes, how many points would you have earned?

