



Use the double numberline to solve the problems.

Answers

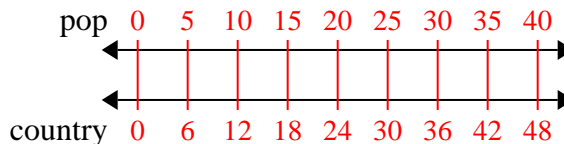
- 1) On her MP3 player for every 5 pop song Faye had she also had 6 country song. If she has 40 pop songs on her MP3 player, how many country songs does she have?
- pop
country
- 2) For every 2 cans Jerry collected for recycling he earned 7 cents. After he collected 10 cans, how much money would he have earned?
- cans
money
- 3) A movie theater put 3 cups of oil for every 7 batches of popcorn they made. After they had made 14 batches of popcorn, how much oil would they have used?
- popcorn
oil
- 4) The ratio of boys to girls at the park was 6 to 7. If there were 24 boys, how many girls were there?
- boys
girls
- 5) A recipe call for 10 teaspoons of seasoning for every 5 batches of chicken. If you have 50 batches of chicken, how many teaspoons of seasoning will you need?
- chicken
easoning
- 6) A builder could get 4 sheets of sheetrock for \$2. If he bought 12 sheets, how much money would he have spent?
- heetrock
price
- 7) A box of candy had 7 cherry pieces for every 8 lemon pieces. If the box had 72 lemon pieces, how many cherry pieces would there be?
- lemon
cherry
- 8) A store had a sale where you could get 9 bags of cashews for \$10. If you wanted to buy 27 bags, how much would it cost?
- cashews
price
1. _____
2. _____
3. _____
4. _____
5. _____
6. _____
7. _____
8. _____



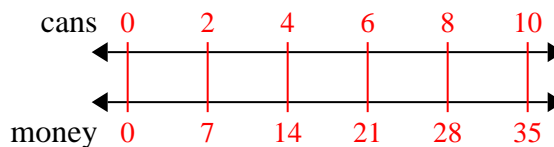
Use the double numberline to solve the problems.

Answers

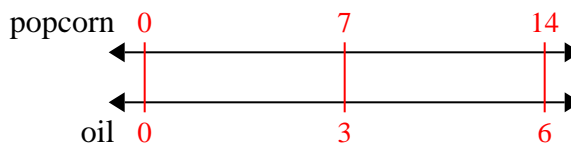
- 1) On her MP3 player for every 5 pop song Faye had she also had 6 country song. If she has 40 pop songs on her MP3 player, how many country songs does she have?

1. 48

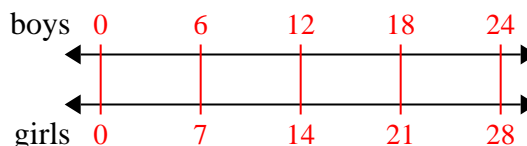
- 2) For every 2 cans Jerry collected for recycling he earned 7 cents. After he collected 10 cans, how much money would he have earned?

2. 35

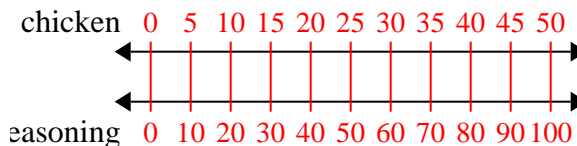
- 3) A movie theater put 3 cups of oil for every 7 batches of popcorn they made. After they had made 14 batches of popcorn, how much oil would they have used?

3. 6

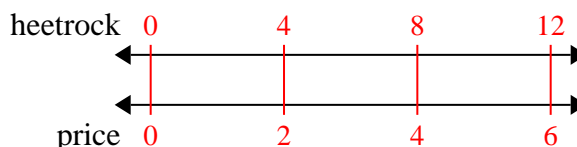
- 4) The ratio of boys to girls at the park was 6 to 7. If there were 24 boys, how many girls were there?

4. 28

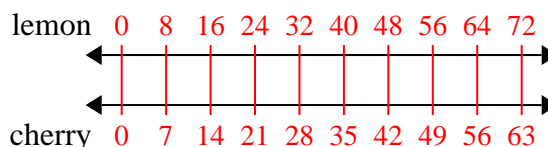
- 5) A recipe call for 10 teaspoons of seasoning for every 5 batches of chicken. If you have 50 batches of chicken, how many teaspoons of seasoning will you need?

5. 100

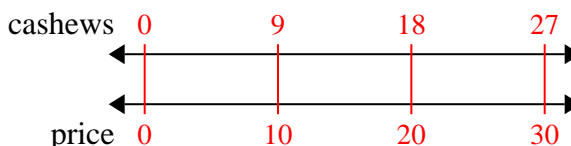
- 6) A builder could get 4 sheets of sheetrock for \$2. If he bought 12 sheets, how much money would he have spent?

6. 6

- 7) A box of candy had 7 cherry pieces for every 8 lemon pieces. If the box had 72 lemon pieces, how many cherry pieces would there be?

7. 63

- 8) A store had a sale where you could get 9 bags of cashews for \$10. If you wanted to buy 27 bags, how much would it cost?

8. 30