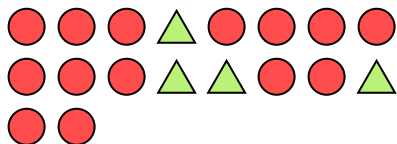





Solve each problem.

Ex) What is the ratio of triangles to circles?



1) What is the ratio of moons to pentagons?



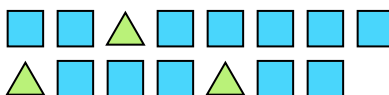
Answers

Ex. 4:14

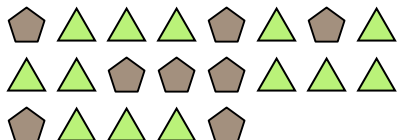
2) What is the ratio of circles to stars?



3) What is the ratio of squares to triangles?



4) What is the ratio of triangles to pentagons?




5) What is the ratio of triangles to hearts?



6) What is the ratio of moons to circles?



7) What is the ratio of circles to moons?




8) What is the ratio of moons to stars?



9) What is the ratio of stars to pentagons?



10) What is the ratio of circles to moons?



11) What is the ratio of pentagons to moons?

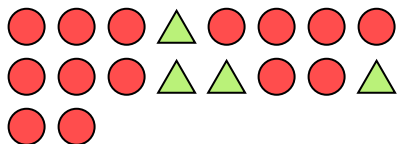


- 1. _____
- 2. _____
- 3. _____
- 4. _____
- 5. _____
- 6. _____
- 7. _____
- 8. _____
- 9. _____
- 10. _____
- 11. _____




Solve each problem.

Ex) What is the ratio of triangles to circles?



1) What is the ratio of moons to pentagons?



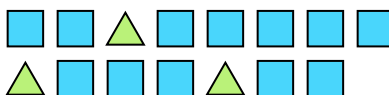
Answers

Ex. 4:14

2) What is the ratio of circles to stars?



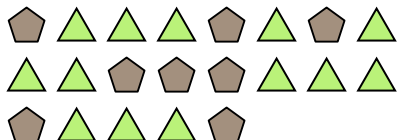
3) What is the ratio of squares to triangles?



1. 15:8

2. 9:7

4) What is the ratio of triangles to pentagons?



5) What is the ratio of triangles to hearts?



3. 12:3

4. 13:8

5. 4:10

6. 5:4

7. 11:12


8. 7:5

9. 6:13

6) What is the ratio of moons to circles?



7) What is the ratio of circles to moons?



10. 8:15

11. 2:3


8) What is the ratio of moons to stars?



9) What is the ratio of stars to pentagons?



10) What is the ratio of circles to moons?



11) What is the ratio of pentagons to moons?

