



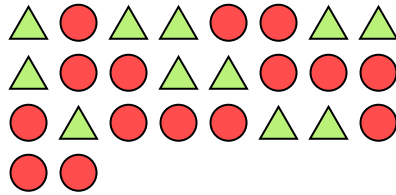


Solve each problem.

Ex) What is the ratio of triangles to stars?



1) What is the ratio of circles to triangles?



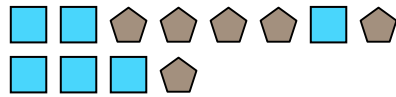
Answers

Ex. 3:9

2) What is the ratio of pentagons to moons?



3) What is the ratio of squares to pentagons?



1. 15:11

2. 4:11

3. 6:6

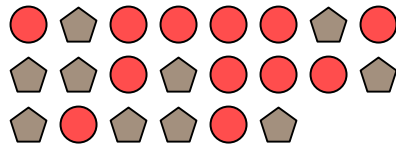
4. 8:14

5. 12:10

4) What is the ratio of moons to hearts?



5) What is the ratio of circles to pentagons?

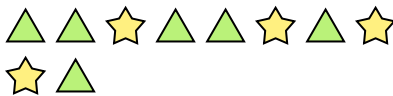


6. 6:4


7. 8:11

8. 15:8

6) What is the ratio of triangles to stars?



7) What is the ratio of hearts to circles?




9. 5:9


10. 6:13

11. 15:5


8) What is the ratio of hearts to circles?



9) What is the ratio of hearts to circles?



10) What is the ratio of squares to moons?



11) What is the ratio of triangles to pentagons?

