




Solve each problem.

Answers

Ex) What is the ratio of moons to stars?




1) What is the ratio of moons to triangles?




Ex. **5:10**

2) What is the ratio of hearts to squares?



3) What is the ratio of triangles to hearts?



1. _____

2. _____

4) What is the ratio of stars to hearts?



5) What is the ratio of stars to triangles?



3. _____

4. _____

5. _____

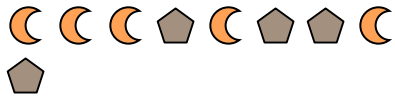
6. _____

7. _____

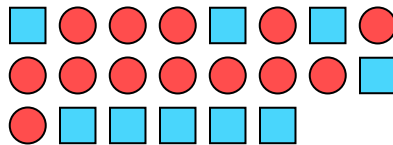
8. _____

9. _____

6) What is the ratio of pentagons to moons?



7) What is the ratio of circles to squares?



10. _____

11. _____

8) What is the ratio of stars to pentagons?



9) What is the ratio of triangles to stars?



10) What is the ratio of stars to circles?



11) What is the ratio of stars to hearts?






Solve each problem.

Ex) What is the ratio of moons to stars?




1) What is the ratio of moons to triangles?




Answers

Ex. 5:10

2) What is the ratio of hearts to squares?



3) What is the ratio of triangles to hearts?



1. 14:13

4) What is the ratio of stars to hearts?



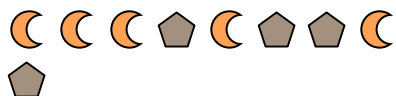
5) What is the ratio of stars to triangles?



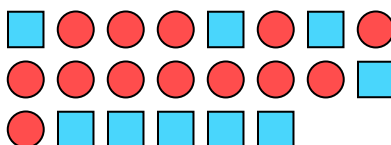
2. 11:7

3. 14:15

6) What is the ratio of pentagons to moons?



7) What is the ratio of circles to squares?



4. 8:3

5. 2:3

6. 4:5

8) What is the ratio of stars to pentagons?



9) What is the ratio of triangles to stars?



7. 13:9

8. 15:7

9. 10:8

10) What is the ratio of stars to circles?



11) What is the ratio of stars to hearts?



10. 2:4

11. 2:11