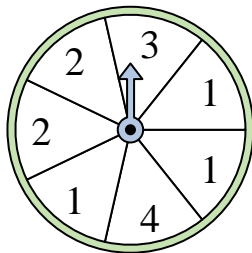


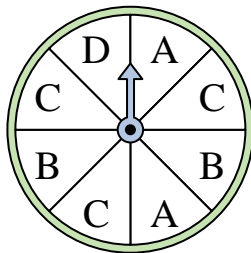


Solve each problem.

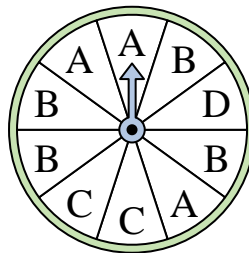
- 1) Which number is the spinner most likely to land on?



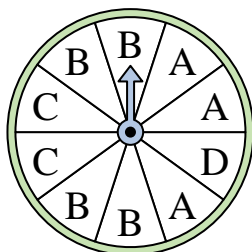
- 2) Which two letters is the spinner equally likely to land on?




- 3) Which letter is the spinner least likely to land on?



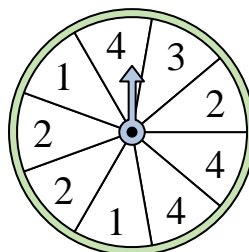
- 4) Which letter is the spinner most likely to land on?



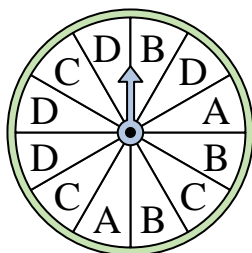
- 5) Which number is the spinner most likely to land on?



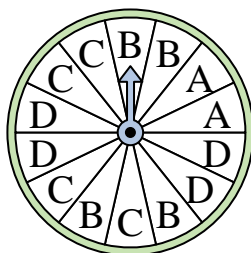
- 6) Which two numbers is the spinner equally likely to land on?



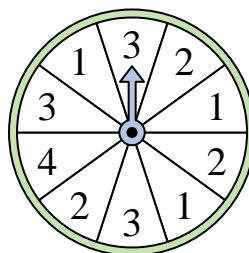
- 7) Which letter is the spinner least likely to land on?




- 8) Which letter is the spinner least likely to land on?



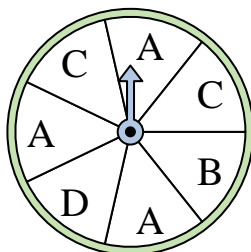
- 9) Which number is the spinner least likely to land on?



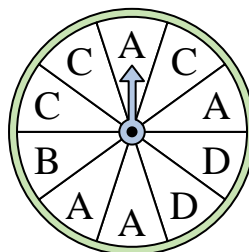
- 10) Which number is the spinner least likely to land on?



- 11) Which two letters is the spinner equally likely to land on?



- 12) Which letter is the spinner most likely to land on?



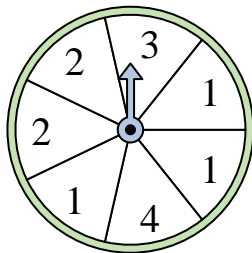
Answers

1. _____
2. _____
3. _____
4. _____
5. _____
6. _____
7. _____
8. _____
9. _____
10. _____
11. _____
12. _____

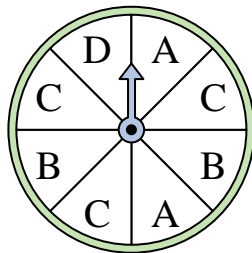


Solve each problem.

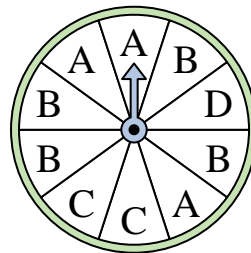
- 1) Which number is the spinner most likely to land on?



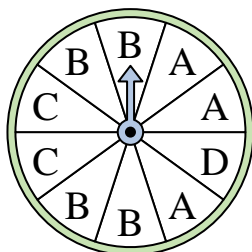
- 2) Which two letters is the spinner equally likely to land on?




- 3) Which letter is the spinner least likely to land on?



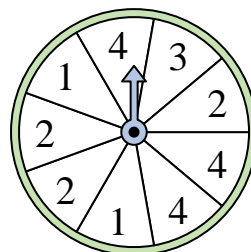
- 4) Which letter is the spinner most likely to land on?



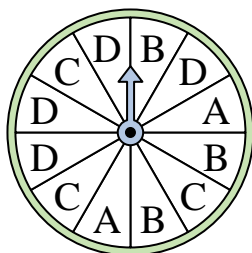
- 5) Which number is the spinner most likely to land on?



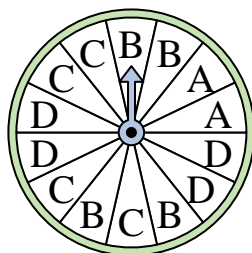
- 6) Which two numbers is the spinner equally likely to land on?



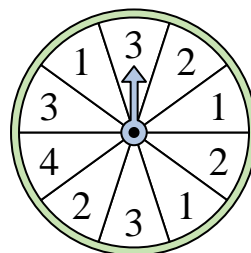
- 7) Which letter is the spinner least likely to land on?




- 8) Which letter is the spinner least likely to land on?



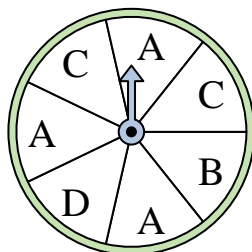
- 9) Which number is the spinner least likely to land on?



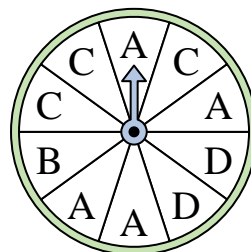
- 10) Which number is the spinner least likely to land on?



- 11) Which two letters is the spinner equally likely to land on?



- 12) Which letter is the spinner most likely to land on?



Answers

1. 1

2. A & B

3. D

4. B

5. 4

6. 2 & 4

7. A

8. A

9. 4

10. 4

11. B & D

12. A