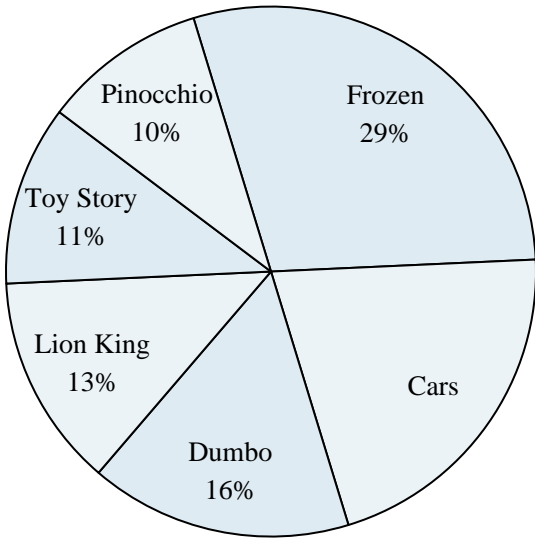




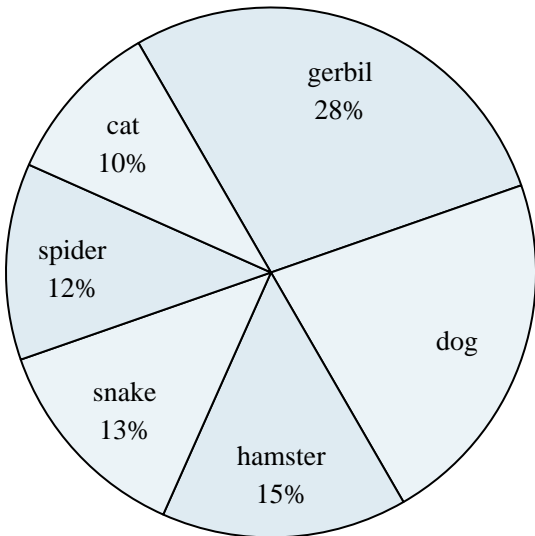
Use the graph to solve.

Favorite Disney Movie



- 1) Which two movies did about half the people say was their favorite?
- 2) What percent of people said either Dumbo or Pinocchio was their favorite?
- 3) Which movie was the least popular?
- 4) Which movie was the most popular?
- 5) What percent of people said Frozen was their favorite?

Favorite Pet



- 6) What percent of people preferred either the dog or the hamster?
- 7) What percent of people said the spider was their favorite pet?
- 8) Which two pets did about half the people say was their favorite?
- 9) Which pet did the least amount of people say was their favorite?
- 10) Which pet did the greatest number of people like?

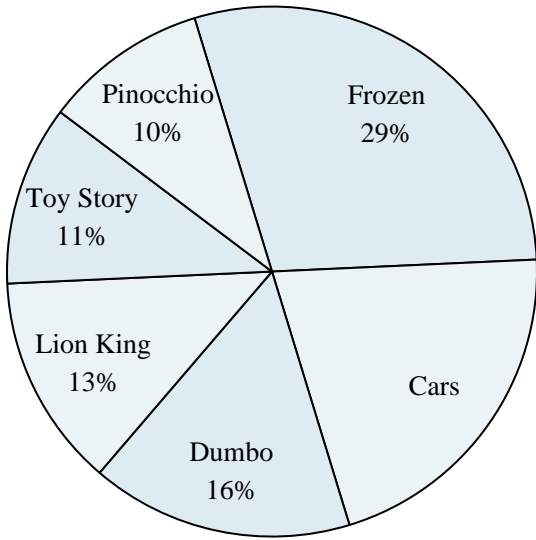
Answers

1. _____
2. _____
3. _____
4. _____
5. _____
6. _____
7. _____
8. _____
9. _____
10. _____



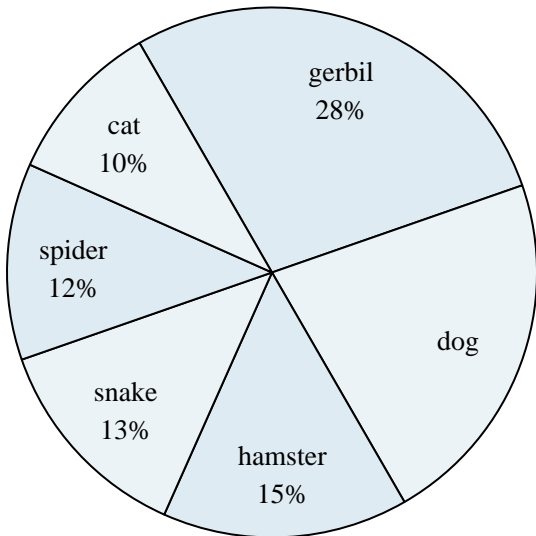
Use the graph to solve.

Favorite Disney Movie



- 1) Which two movies did about half the people say was their favorite?
- 2) What percent of people said either Dumbo or Pinocchio was their favorite?
- 3) Which movie was the least popular?
- 4) Which movie was the most popular?
- 5) What percent of people said Frozen was their favorite?

Favorite Pet



- 6) What percent of people preferred either the dog or the hamster?
- 7) What percent of people said the spider was their favorite pet?
- 8) Which two pets did about half the people say was their favorite?
- 9) Which pet did the least amount of people say was their favorite?
- 10) Which pet did the greatest number of people like?

Answers

1. **Frozen & Cars**
2. **26%**
3. **Pinocchio**
4. **Frozen**
5. **29%**
6. **37%**
7. **12%**
8. **gerbil & dog**
9. **cat**
10. **gerbil**