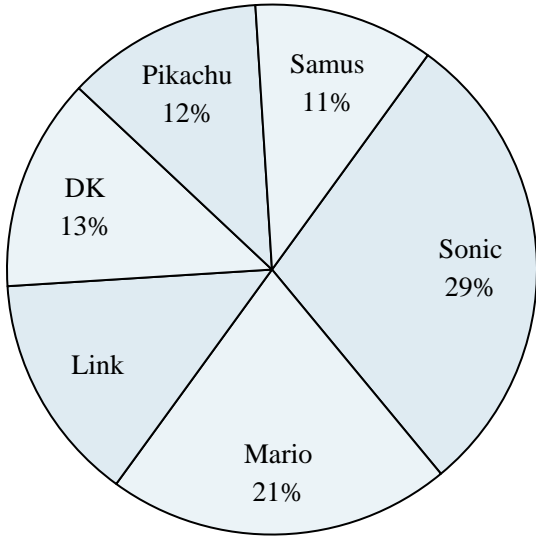




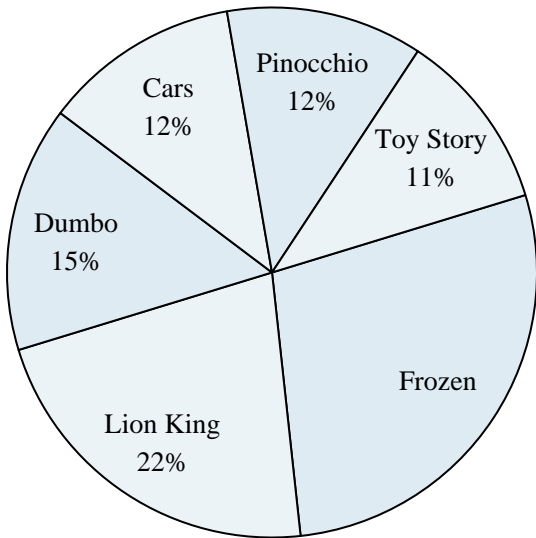
Use the graph to solve.

**Favorite Game Character**



- 1) What percent of people said either DK or Mario was their favorite?
- 2) Which character was the most popular?
- 3) What percent of people said Link was their favorite?
- 4) Which two characters did about half the people say was their favorite?
- 5) Which character was the least popular?

**Favorite Disney Movie**



- 6) Which movie was the most popular?
- 7) Which two movies did about half the people say was their favorite?
- 8) Which movie was the least popular?
- 9) What percent of people said Frozen was their favorite?
- 10) What percent of people said either Cars or Toy Story was their favorite?

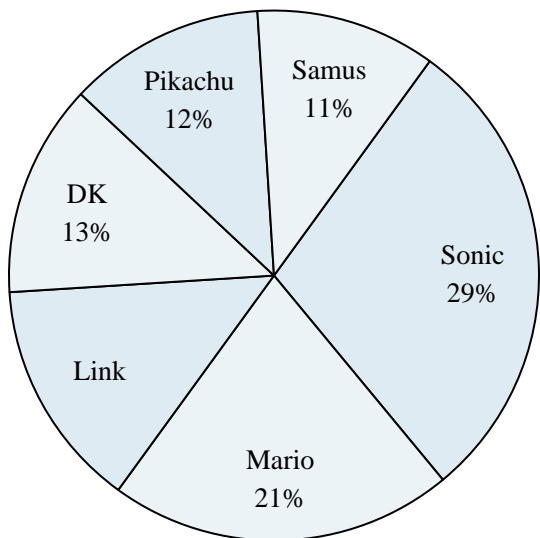
**Answers**

1. \_\_\_\_\_
2. \_\_\_\_\_
3. \_\_\_\_\_
4. \_\_\_\_\_
5. \_\_\_\_\_
6. \_\_\_\_\_
7. \_\_\_\_\_
8. \_\_\_\_\_
9. \_\_\_\_\_
10. \_\_\_\_\_



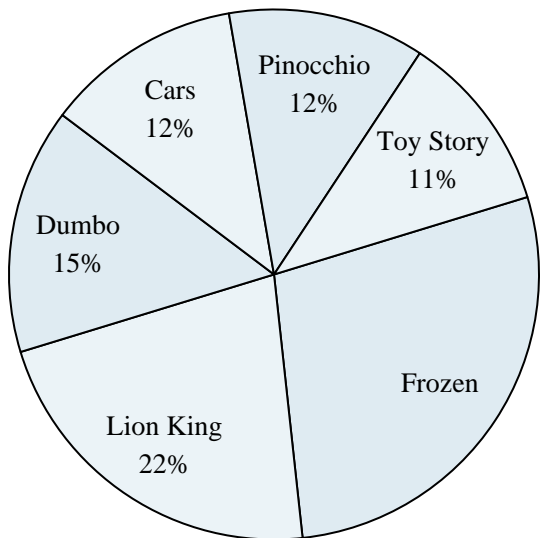
Use the graph to solve.

**Favorite Game Character**



- 1) What percent of people said either DK or Mario was their favorite?
- 2) Which character was the most popular?
- 3) What percent of people said Link was their favorite?
- 4) Which two characters did about half the people say was their favorite?
- 5) Which character was the least popular?

**Favorite Disney Movie**



- 6) Which movie was the most popular?
- 7) Which two movies did about half the people say was their favorite?
- 8) Which movie was the least popular?
- 9) What percent of people said Frozen was their favorite?
- 10) What percent of people said either Cars or Toy Story was their favorite?

Answers

1. 34%
2. Sonic
3. 14%
4. Sonic & Mario
5. Samus
6. Frozen
7. Frozen & Lion King
8. Toy Story
9. 28%
10. 23%