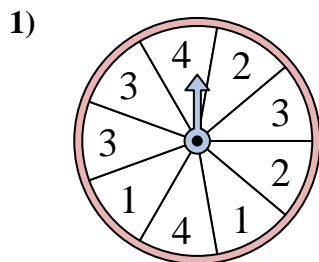
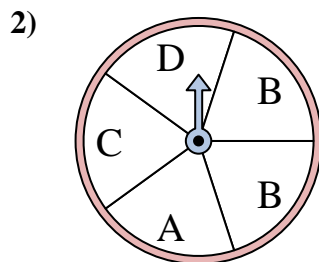




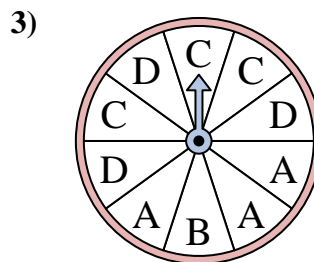
Solve each problem. Round your answer to the nearest tenth.



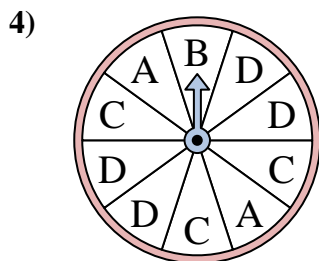
The spinner has a _____% chance of landing on a 2.



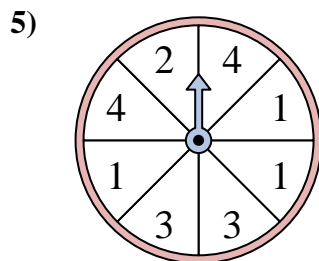
The spinner has a _____% chance of landing on a D.



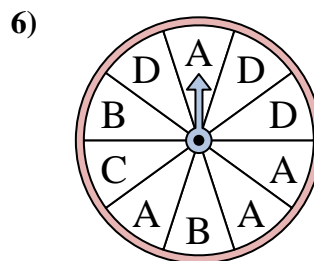
The spinner has a _____% chance of landing on a B.



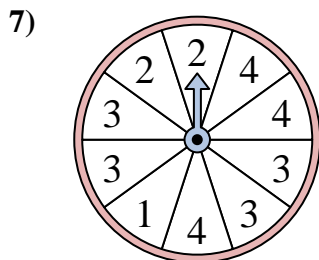
The spinner has a _____% chance of landing on a A.



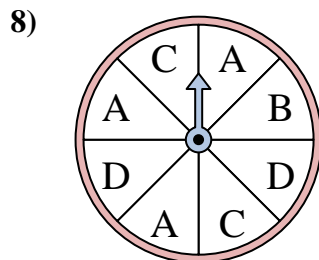
The spinner has a _____% chance of landing on a 3.



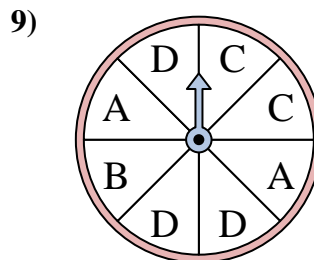
The spinner has a _____% chance of landing on a C.



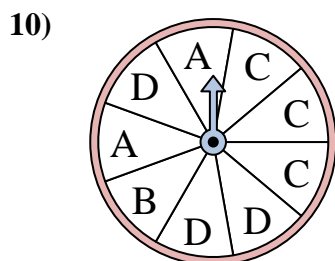
The spinner has a _____% chance of landing on a 4.



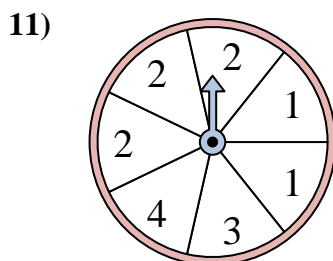
The spinner has a _____% chance of landing on a C.



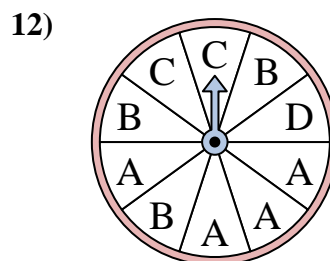
The spinner has a _____% chance of landing on a D.



The spinner has a _____% chance of landing on a A.



The spinner has a _____% chance of landing on a 1.



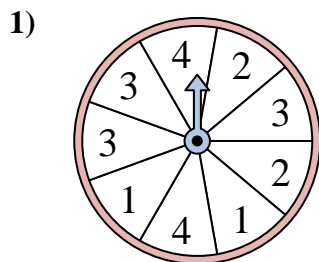
The spinner has a _____% chance of landing on a A.

Answers

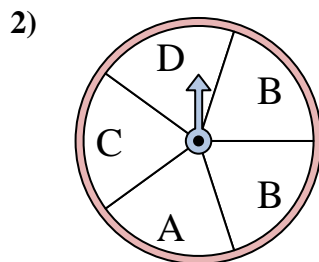
1. _____
2. _____
3. _____
4. _____
5. _____
6. _____
7. _____
8. _____
9. _____
10. _____
11. _____
12. _____



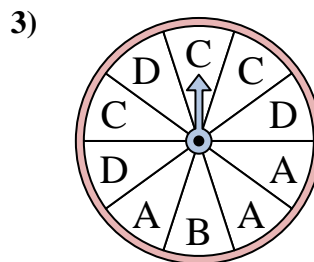
Solve each problem. Round your answer to the nearest tenth.



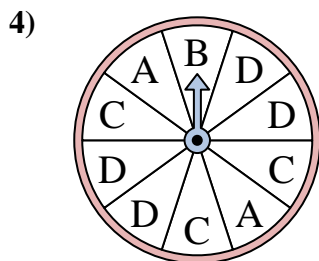
The spinner has a _____% chance of landing on a 2.



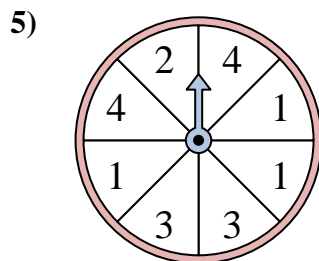
The spinner has a _____% chance of landing on a D.



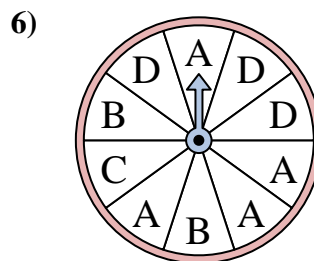
The spinner has a _____% chance of landing on a B.



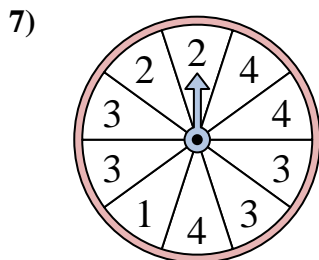
The spinner has a _____% chance of landing on a A.



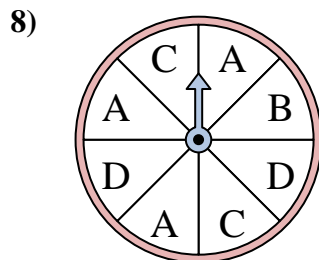
The spinner has a _____% chance of landing on a 3.



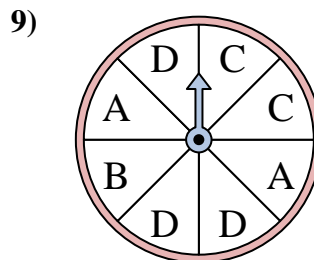
The spinner has a _____% chance of landing on a C.



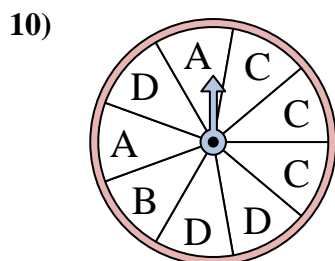
The spinner has a _____% chance of landing on a 4.



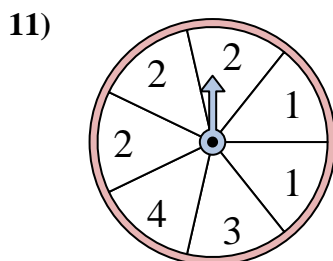
The spinner has a _____% chance of landing on a C.



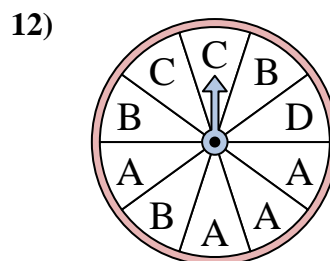
The spinner has a _____% chance of landing on a D.



The spinner has a _____% chance of landing on a A.



The spinner has a _____% chance of landing on a 1.



The spinner has a _____% chance of landing on a A.

Answers

1. 22.2
2. 20
3. 10
4. 20
5. 25
6. 10
7. 30
8. 25
9. 37.5
10. 22.2
11. 28.6
12. 40