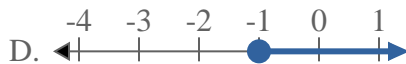
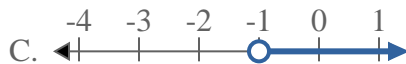




Solve each problem.

Answers

1) Which option best shows $X \geq -1$



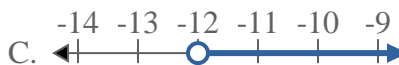
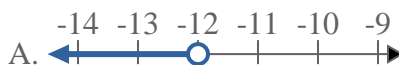
2) Which option best shows $X \geq 18$



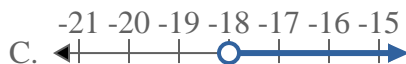
3) Which option best shows $X > 7$



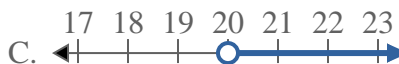
4) Which option best shows $X > -12$



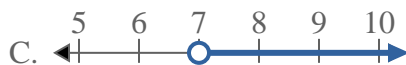
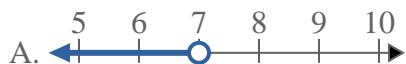
5) Which option best shows $X \leq -18$



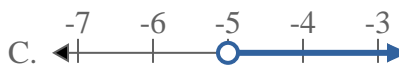
6) Which option best shows $X \leq 20$



7) Which option best shows $X > 7$



8) Which option best shows $X > -5$

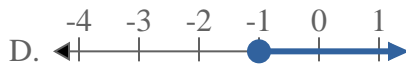
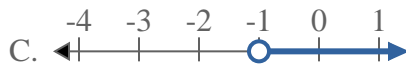


1. _____
2. _____
3. _____
4. _____
5. _____
6. _____
7. _____
8. _____



Solve each problem.

1) Which option best shows $X \geq -1$



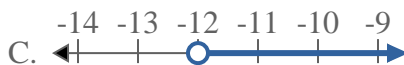
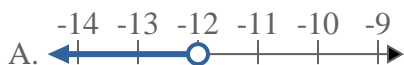
2) Which option best shows $X \geq 18$



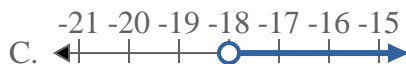
3) Which option best shows $X > 7$



4) Which option best shows $X > -12$



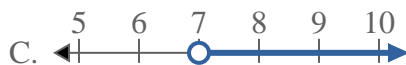
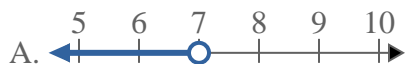
5) Which option best shows $X \leq -18$



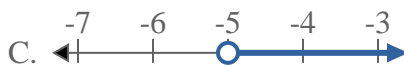
6) Which option best shows $X \leq 20$



7) Which option best shows $X > 7$



8) Which option best shows $X > -5$



Answers

1. **D**

2. **D**

3. **C**

4. **C**

5. **B**

6. **B**

7. **C**

8. **C**