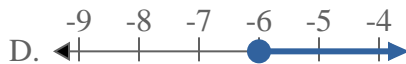
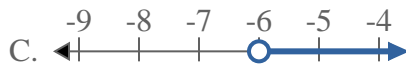


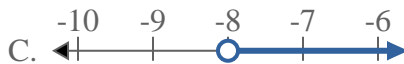


Solve each problem.

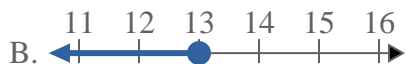
1) Which option best shows  $X \leq -6$



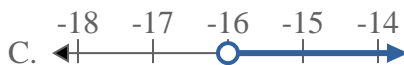
2) Which option best shows  $X > -8$



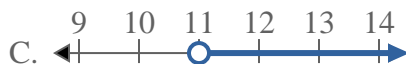
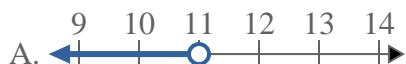
3) Which option best shows  $X < 13$



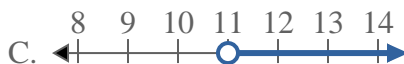
4) Which option best shows  $X < -16$



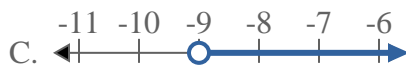
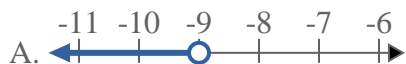
5) Which option best shows  $X \leq 11$



6) Which option best shows  $X \geq 11$



7) Which option best shows  $X > -9$



8) Which option best shows  $X \geq -5$



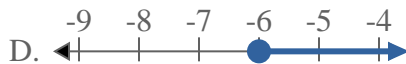
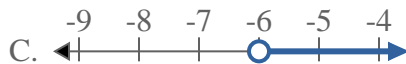
**Answers**

1. \_\_\_\_\_
2. \_\_\_\_\_
3. \_\_\_\_\_
4. \_\_\_\_\_
5. \_\_\_\_\_
6. \_\_\_\_\_
7. \_\_\_\_\_
8. \_\_\_\_\_

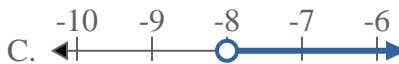


Solve each problem.

1) Which option best shows  $X \leq -6$



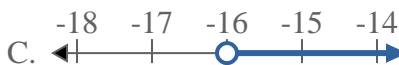
2) Which option best shows  $X > -8$



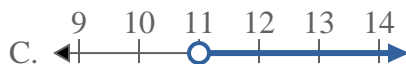
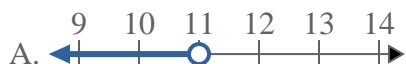
3) Which option best shows  $X < 13$



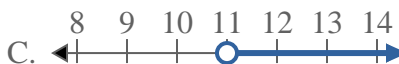
4) Which option best shows  $X < -16$



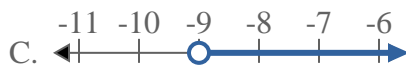
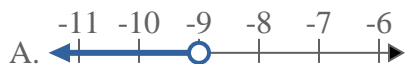
5) Which option best shows  $X \leq 11$



6) Which option best shows  $X \geq 11$



7) Which option best shows  $X > -9$



8) Which option best shows  $X \geq -5$



**Answers**

1. **B**

2. **C**

3. **A**

4. **A**

5. **B**

6. **D**

7. **C**

8. **D**