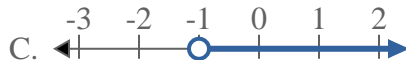
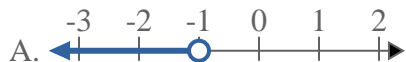




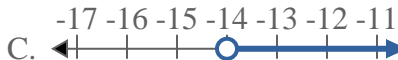
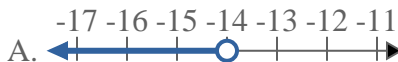
Solve each problem.

Answers

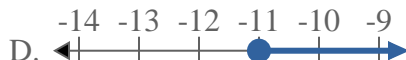
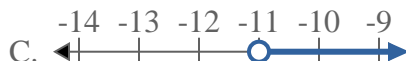
1) Which option best shows $X > -1$



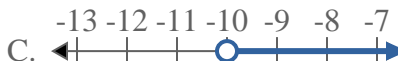
2) Which option best shows $X < -14$



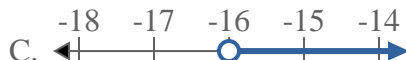
3) Which option best shows $X \leq -11$



4) Which option best shows $X < -10$



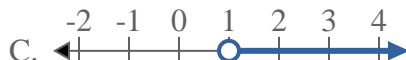
5) Which option best shows $X \leq -16$



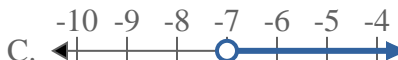
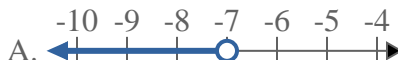
6) Which option best shows $X > 17$



7) Which option best shows $X > 1$



8) Which option best shows $X > -7$

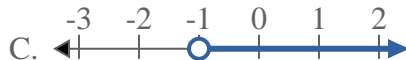
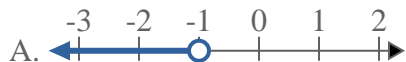


1. _____
2. _____
3. _____
4. _____
5. _____
6. _____
7. _____
8. _____

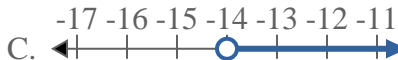
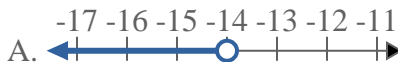


Solve each problem.

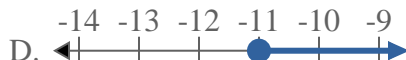
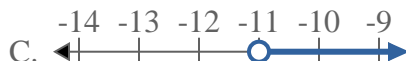
1) Which option best shows $X > -1$



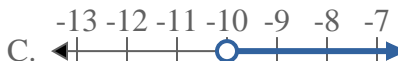
2) Which option best shows $X < -14$



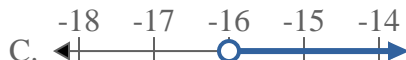
3) Which option best shows $X \leq -11$



4) Which option best shows $X < -10$



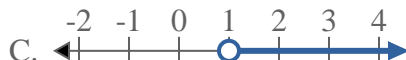
5) Which option best shows $X \leq -16$



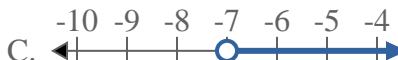
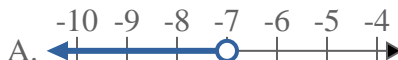
6) Which option best shows $X > 17$



7) Which option best shows $X > 1$



8) Which option best shows $X > -7$



Answers

1. **C**

2. **A**

3. **B**

4. **A**

5. **B**

6. **C**

7. **C**

8. **C**