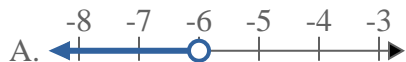


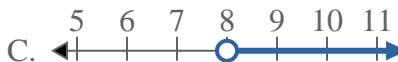


Solve each problem.

1) Which option best shows $X < -6$



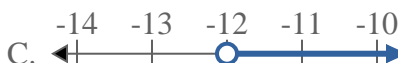
2) Which option best shows $X < 8$



3) Which option best shows $X \leq 5$



4) Which option best shows $X \geq -12$



5) Which option best shows $X \geq -18$



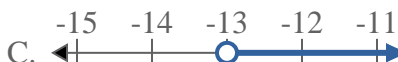
6) Which option best shows $X \geq -8$



7) Which option best shows $X < 3$



8) Which option best shows $X < -13$



Answers

1. _____

2. _____

3. _____

4. _____

5. _____

6. _____

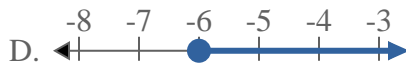
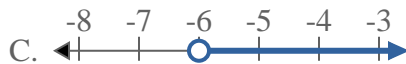
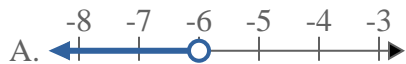
7. _____

8. _____

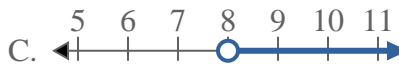


Solve each problem.

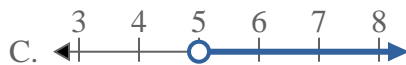
1) Which option best shows $X < -6$



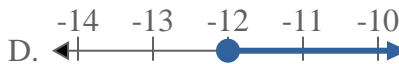
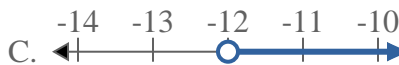
2) Which option best shows $X < 8$



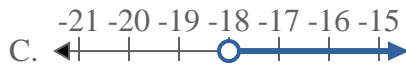
3) Which option best shows $X \leq 5$



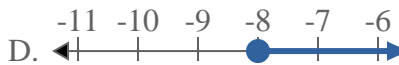
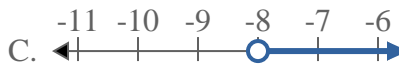
4) Which option best shows $X \geq -12$



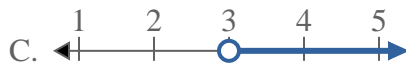
5) Which option best shows $X \geq -18$



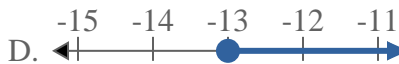
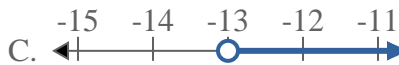
6) Which option best shows $X \geq -8$



7) Which option best shows $X < 3$



8) Which option best shows $X < -13$



Answers

1. **A**

2. **A**

3. **B**

4. **D**

5. **D**

6. **D**

7. **A**

8. **A**