



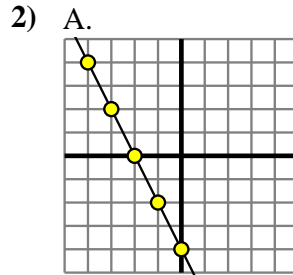
Determine which function has the greater change of rate. If the rate is the same answer with 'same'.

Answers

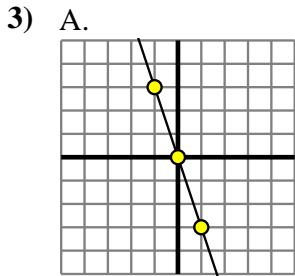
1) A.  
 $Y=6 \times X+(X \times 5)$

B.

X	Y
-4	-24
0	8
1	16
5	48
9	80



B.  
 $Y=X-(3 \times -1)$

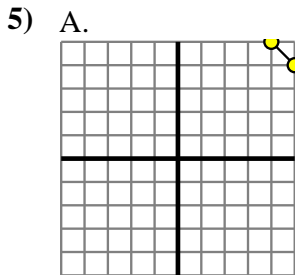


B.  
 $Y=4 \times X-(X \times 6)$

4) A.

X	Y
-8	-3
0	5
2	7
6	11
7	12

B.  
 $Y=X+(8 \times -1)$



B.  
 $Y=X+6$

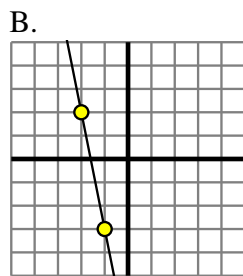
6) A.

X	Y
-10	-63
-5	-33
1	3
2	9
7	39

B.  
 $Y=9 \times X+(X-6)$

7) A.

X	Y
-6	-52
-5	-44
-1	-12
3	20
7	52



8) A.

X	Y
-7	-44
-5	-32
2	10
3	16
8	46

B.  
 $Y=X-4$

1. \_\_\_\_\_
2. \_\_\_\_\_
3. \_\_\_\_\_
4. \_\_\_\_\_
5. \_\_\_\_\_
6. \_\_\_\_\_
7. \_\_\_\_\_
8. \_\_\_\_\_

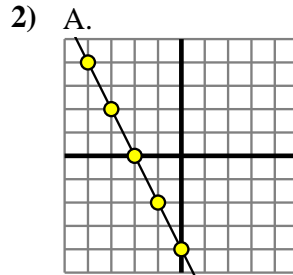


Determine which function has the greater change of rate. If the rate is the same answer with 'same'.

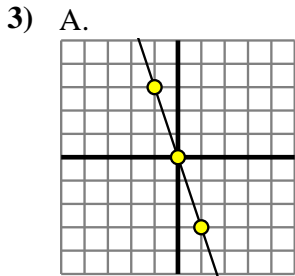
1) A.  
 $Y=6 \times X+(X \times 5)$

B.

X	Y
-4	-24
0	8
1	16
5	48
9	80



B.  
 $Y=X-(3 \times -1)$

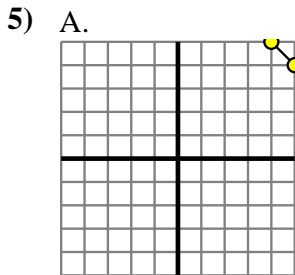


B.  
 $Y=4 \times X-(X \times 6)$

4) A.

X	Y
-8	-3
0	5
2	7
6	11
7	12

B.  
 $Y=X+(8 \times -1)$



B.  
 $Y=X+6$

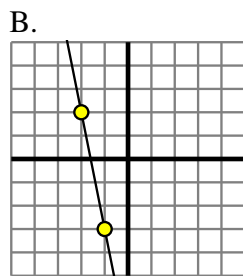
6) A.

X	Y
-10	-63
-5	-33
1	3
2	9
7	39

B.  
 $Y=9 \times X+(X-6)$

7) A.

X	Y
-6	-52
-5	-44
-1	-12
3	20
7	52



8) A.

X	Y
-7	-44
-5	-32
2	10
3	16
8	46

B.  
 $Y=X-4$

Answers

1. A
2. A
3. A
4. same
5. same
6. B
7. A
8. A